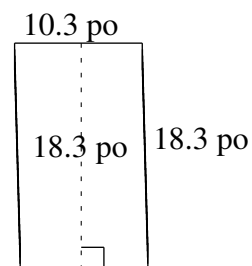
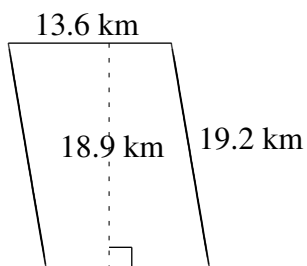
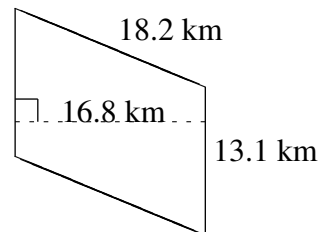
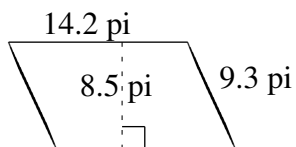
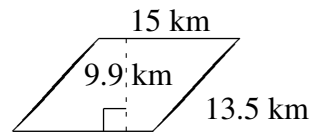
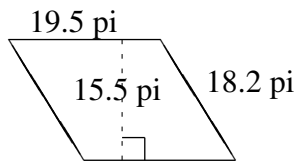


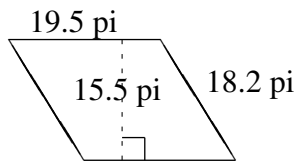
Aire et Périmètre de Parallélogrammes (C)

Trouvez l'aire et le périmètre de chaque parallélogramme.

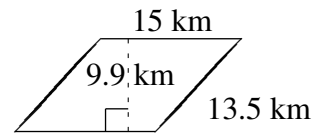


Aire et Périmètre de Parallélogrammes (C) Solutions

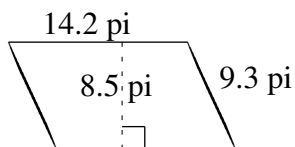
Trouvez l'aire et le périmètre de chaque parallélogramme.



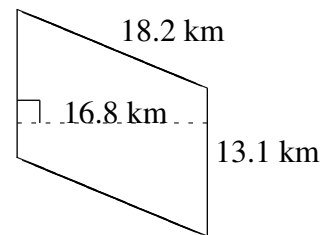
$$A = 302.25 \text{ pi}^2$$
$$P = 75.4 \text{ pi}$$



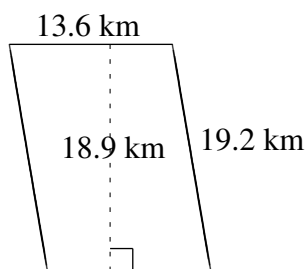
$$A = 148.5 \text{ km}^2$$
$$P = 57.0 \text{ km}$$



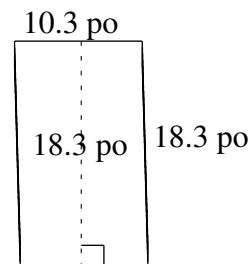
$$A = 120.70 \text{ pi}^2$$
$$P = 47.0 \text{ pi}$$



$$A = 220.08 \text{ km}^2$$
$$P = 62.6 \text{ km}$$



$$A = 257.04 \text{ km}^2$$
$$P = 65.6 \text{ km}$$



$$A = 188.49 \text{ po}^2$$
$$P = 57.2 \text{ po}$$