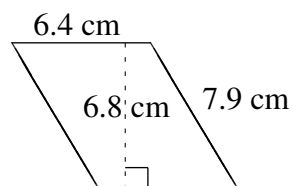
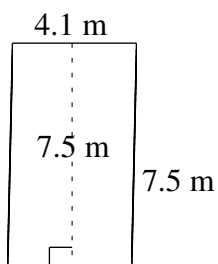
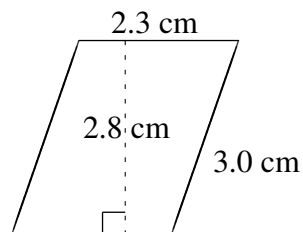
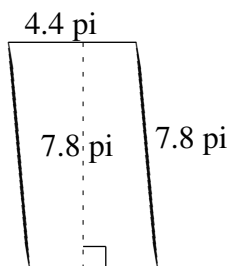
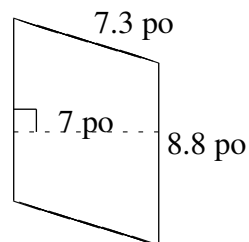
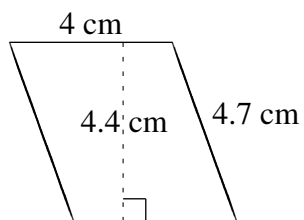


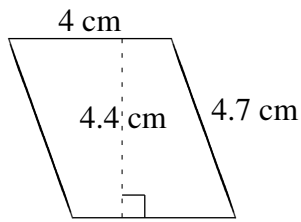
# Aire et Périmètre de Parallélogrammes (H)

Trouvez l'aire et le périmètre de chaque parallélogramme.

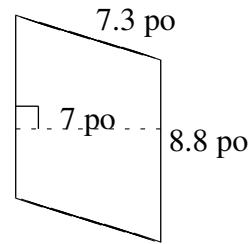


# Aire et Périmètre de Parallélogrammes (H) Solutions

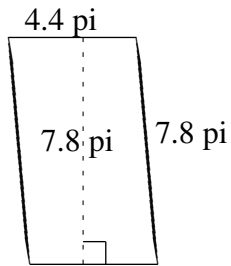
Trouvez l'aire et le périmètre de chaque parallélogramme.



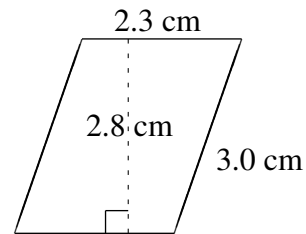
$$A = 17.6 \text{ cm}^2$$
$$P = 17.4 \text{ cm}$$



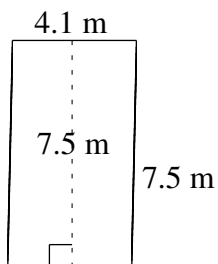
$$A = 61.6 \text{ po}^2$$
$$P = 32.2 \text{ po}$$



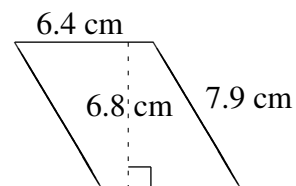
$$A = 34.32 \text{ pi}^2$$
$$P = 24.4 \text{ pi}$$



$$A = 6.44 \text{ cm}^2$$
$$P = 10.6 \text{ cm}$$



$$A = 30.75 \text{ m}^2$$
$$P = 23.2 \text{ m}$$



$$A = 43.52 \text{ cm}^2$$
$$P = 28.6 \text{ cm}$$