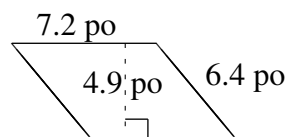
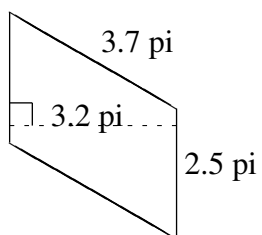
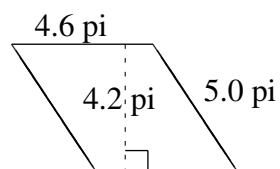
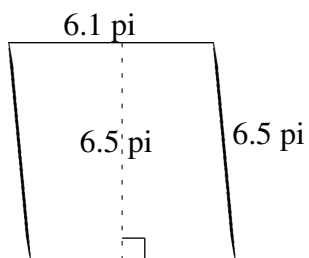
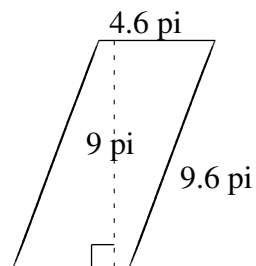
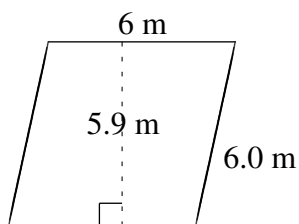


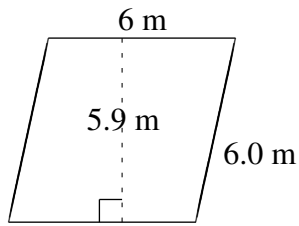
Aire et Périmètre de Parallélogrammes (C)

Trouvez l'aire et le périmètre de chaque parallélogramme.

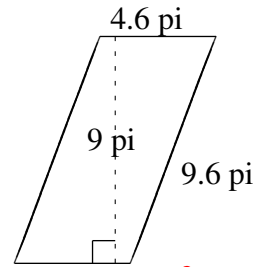


Aire et Périmètre de Parallélogrammes (C) Solutions

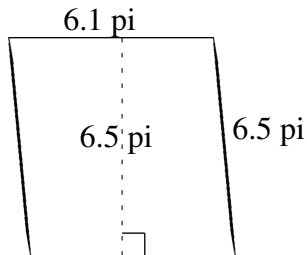
Trouvez l'aire et le périmètre de chaque parallélogramme.



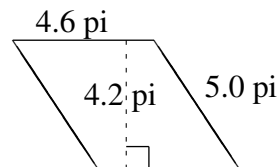
$$A = 35.4 \text{ m}^2$$
$$P = 24.0 \text{ m}$$



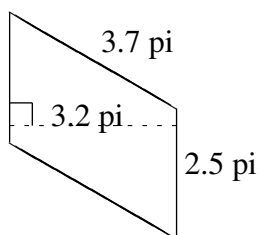
$$A = 41.4 \text{ pi}^2$$
$$P = 28.4 \text{ pi}$$



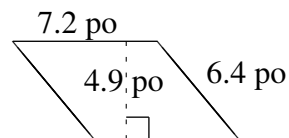
$$A = 39.65 \text{ pi}^2$$
$$P = 25.2 \text{ pi}$$



$$A = 19.32 \text{ pi}^2$$
$$P = 19.2 \text{ pi}$$



$$A = 8.00 \text{ pi}^2$$
$$P = 12.4 \text{ pi}$$



$$A = 35.28 \text{ po}^2$$
$$P = 27.2 \text{ po}$$