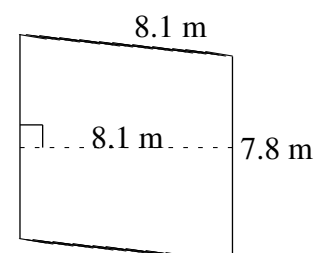
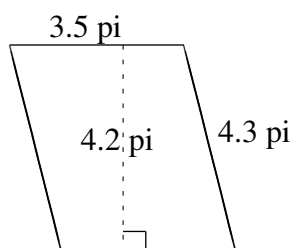
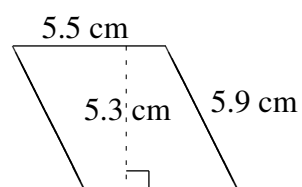
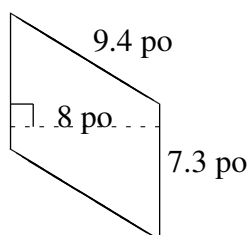
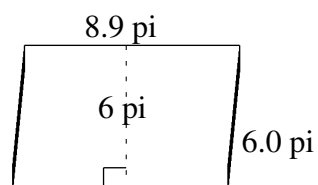
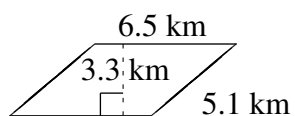


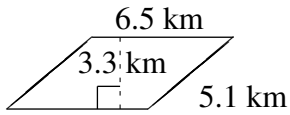
Aire et Périmètre de Parallélogrammes (A)

Trouvez l'aire et le périmètre de chaque parallélogramme.

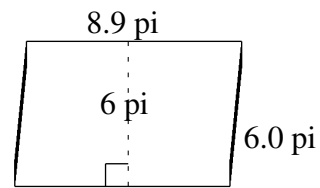


Aire et Périmètre de Parallélogrammes (A) Solutions

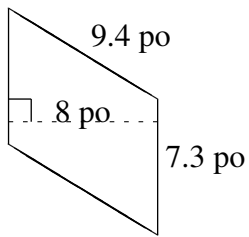
Trouvez l'aire et le périmètre de chaque parallélogramme.



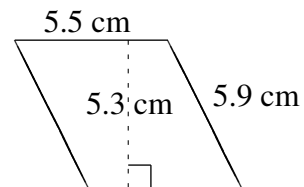
$$A = 21.45 \text{ km}^2$$
$$P = 23.2 \text{ km}$$



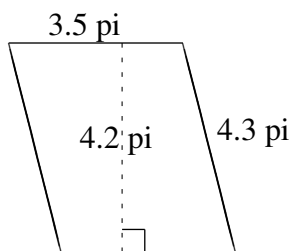
$$A = 53.4 \text{ pi}^2$$
$$P = 29.8 \text{ pi}$$



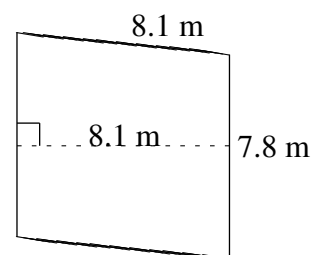
$$A = 58.4 \text{ po}^2$$
$$P = 33.4 \text{ po}$$



$$A = 29.15 \text{ cm}^2$$
$$P = 22.8 \text{ cm}$$



$$A = 14.70 \text{ pi}^2$$
$$P = 15.6 \text{ pi}$$



$$A = 63.18 \text{ m}^2$$
$$P = 31.8 \text{ m}$$