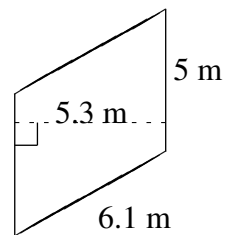
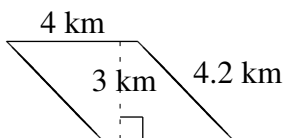
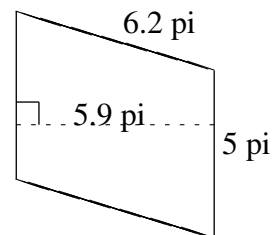
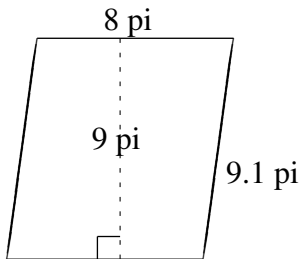
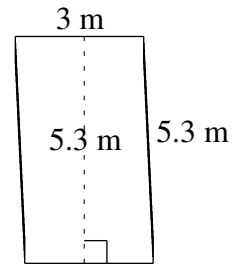
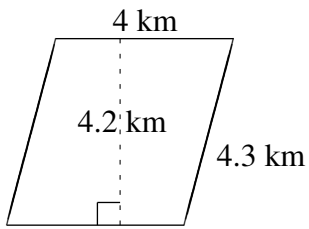


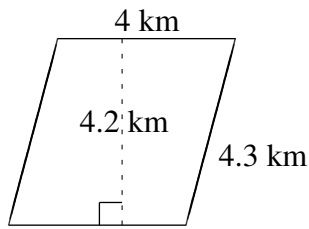
## Aire et Périmètre de Parallélogrammes (J)

Trouvez l'aire et le périmètre de chaque parallélogramme.

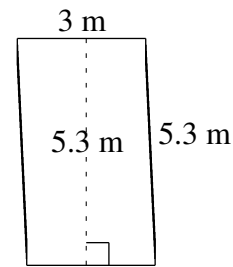


# Aire et Périmètre de Parallélogrammes (J) Solutions

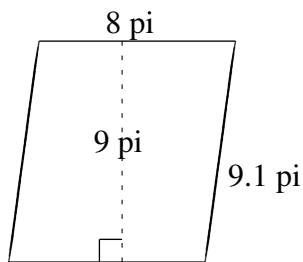
Trouvez l'aire et le périmètre de chaque parallélogramme.



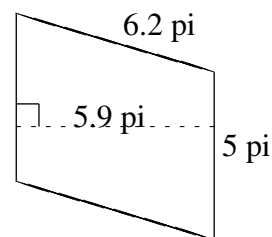
$$A = 16.8 \text{ km}^2$$
$$P = 16.6 \text{ km}$$



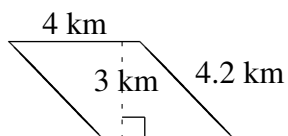
$$A = 15.9 \text{ m}^2$$
$$P = 16.6 \text{ m}$$



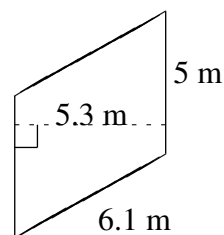
$$A = 72 \text{ pi}^2$$
$$P = 34.2 \text{ pi}$$



$$A = 29.5 \text{ pi}^2$$
$$P = 22.4 \text{ pi}$$



$$A = 12 \text{ km}^2$$
$$P = 16.4 \text{ km}$$



$$A = 26.5 \text{ m}^2$$
$$P = 22.2 \text{ m}$$