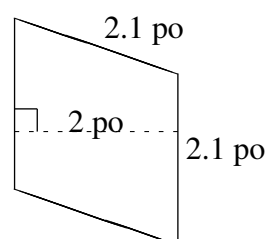
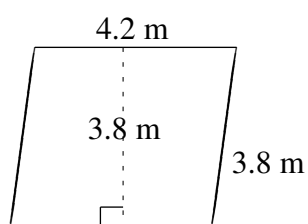
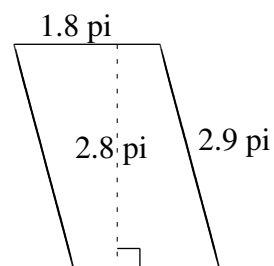
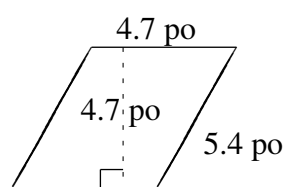
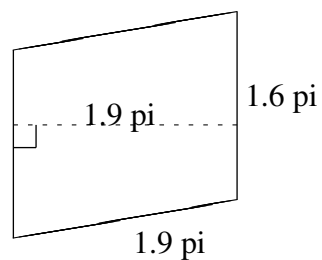
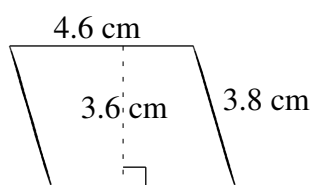


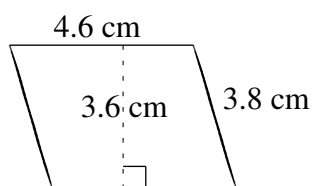
Aire et Périmètre de Parallélogrammes (G)

Trouvez l'aire et le périmètre de chaque parallélogramme.

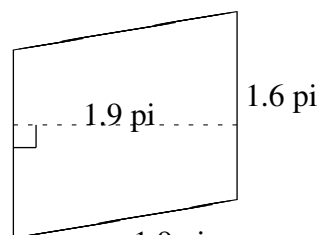


Aire et Périmètre de Parallélogrammes (G) Solutions

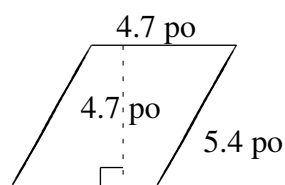
Trouvez l'aire et le périmètre de chaque parallélogramme.



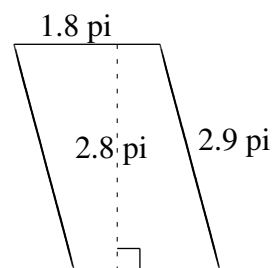
$$A = 16.56 \text{ cm}^2$$
$$P = 16.8 \text{ cm}$$



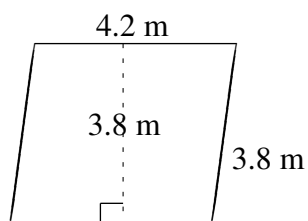
$$A = 3.04 \text{ pi}^2$$
$$P = 7.0 \text{ pi}$$



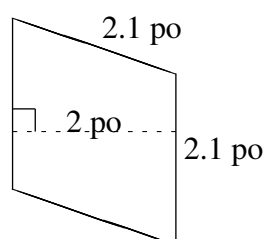
$$A = 22.09 \text{ po}^2$$
$$P = 20.2 \text{ po}$$



$$A = 5.04 \text{ pi}^2$$
$$P = 9.4 \text{ pi}$$



$$A = 15.96 \text{ m}^2$$
$$P = 16.0 \text{ m}$$



$$A = 4.2 \text{ po}^2$$
$$P = 8.4 \text{ po}$$