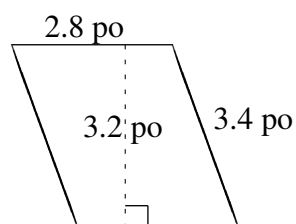
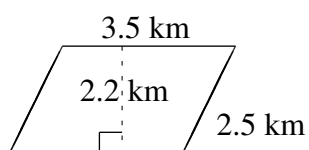
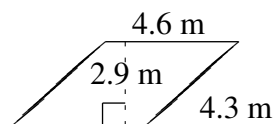
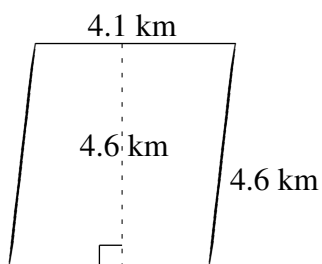
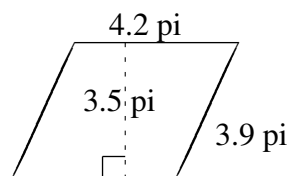
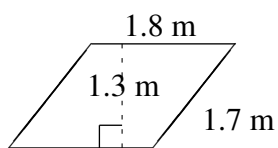


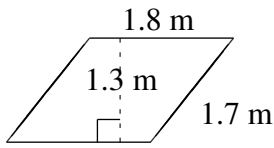
Aire et Périmètre de Parallélogrammes (F)

Trouvez l'aire et le périmètre de chaque parallélogramme.

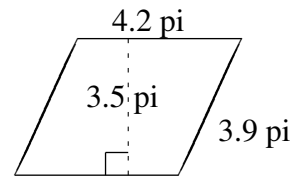


Aire et Périmètre de Parallélogrammes (F) Solutions

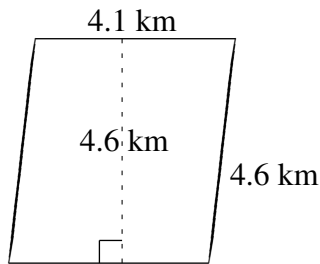
Trouvez l'aire et le périmètre de chaque parallélogramme.



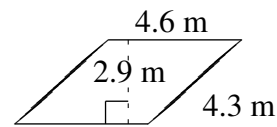
$$A = 2.34 \text{ m}^2$$
$$P = 7.0 \text{ m}$$



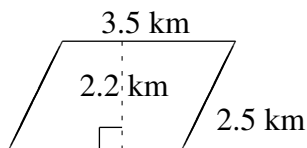
$$A = 14.70 \text{ pi}^2$$
$$P = 16.2 \text{ pi}$$



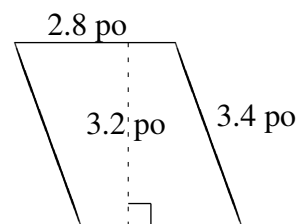
$$A = 18.86 \text{ km}^2$$
$$P = 17.4 \text{ km}$$



$$A = 13.34 \text{ m}^2$$
$$P = 17.8 \text{ m}$$



$$A = 7.70 \text{ km}^2$$
$$P = 12.0 \text{ km}$$



$$A = 8.96 \text{ po}^2$$
$$P = 12.4 \text{ po}$$