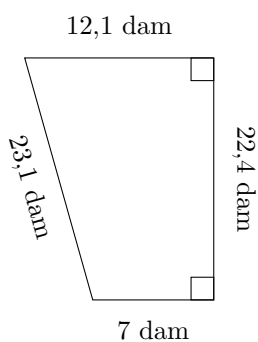


Aire et Périmètre des Trapèzes (C)

Calculez le périmètre et l'aire de chaque trapèze.

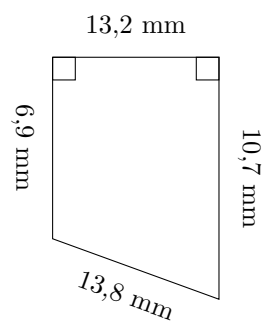
1.



$$P = ?$$

$$A = ?$$

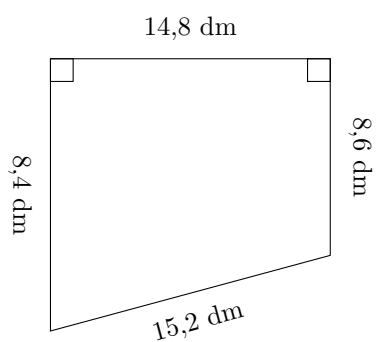
2.



$$P = ?$$

$$A = ?$$

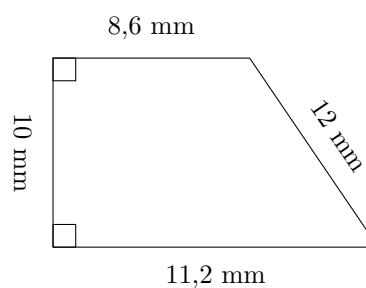
3.



$$P = ?$$

$$A = ?$$

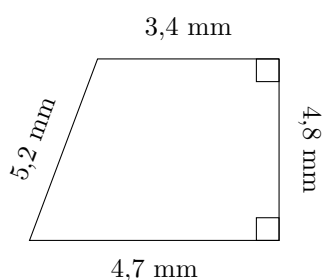
4.



$$P = ?$$

$$A = ?$$

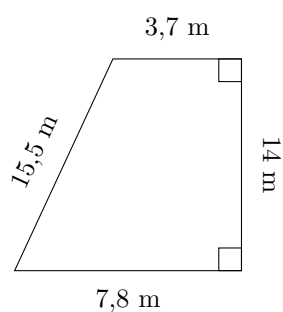
5.



$$P = ?$$

$$A = ?$$

6.



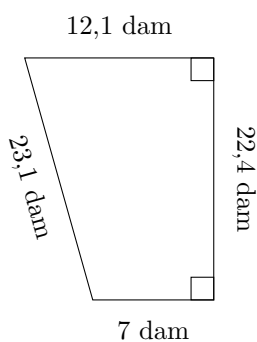
$$P = ?$$

$$A = ?$$

Aire et Périmètre des Trapèzes (C) Réponses

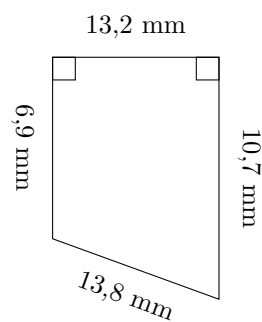
Calculez le périmètre et l'aire de chaque trapèze.

1.



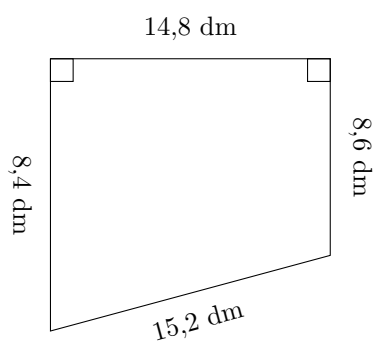
$$P = 64,6 \text{ dam}$$
$$A = 213,92 \text{ dam}^2$$

2.



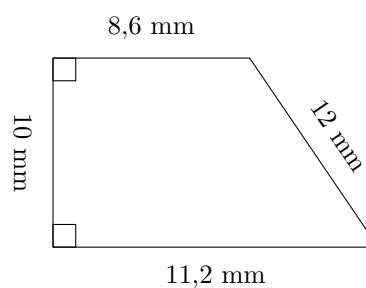
$$P = 44,6 \text{ mm}$$
$$A = 116,16 \text{ mm}^2$$

3.



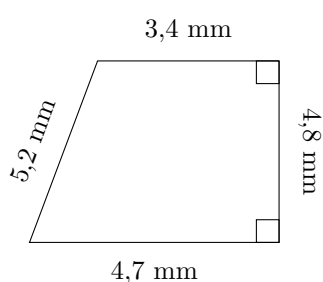
$$P = 47 \text{ dm}$$
$$A = 125,8 \text{ dm}^2$$

4.



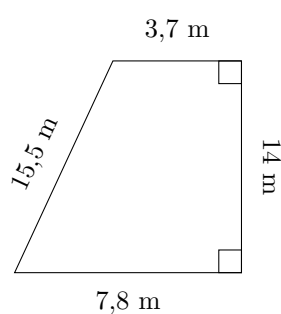
$$P = 41,8 \text{ mm}$$
$$A = 99 \text{ mm}^2$$

5.



$$P = 18,1 \text{ mm}$$
$$A = 19,44 \text{ mm}^2$$

6.



$$P = 41 \text{ m}$$
$$A = 80,5 \text{ m}^2$$