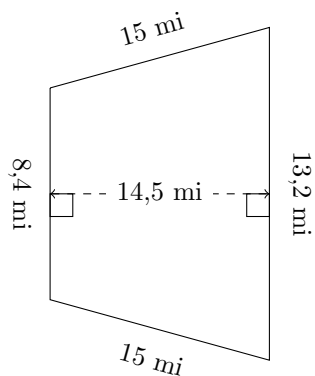


Aire et Périmètre des Trapèzes (D)

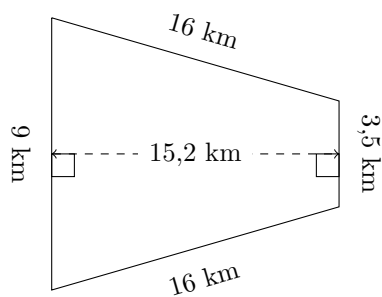
Calculez le périmètre et l'aire de chaque trapèze.

1.



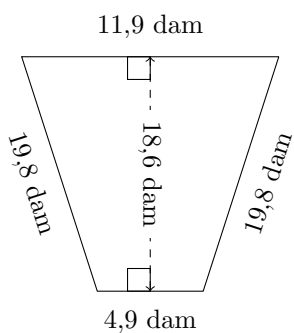
P = ?
A = ?

2.



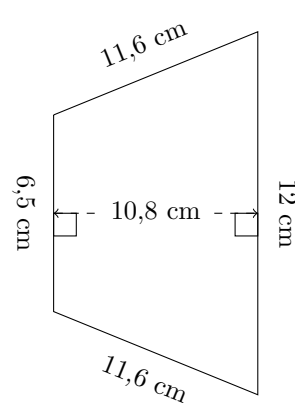
P = ?
A = ?

3.



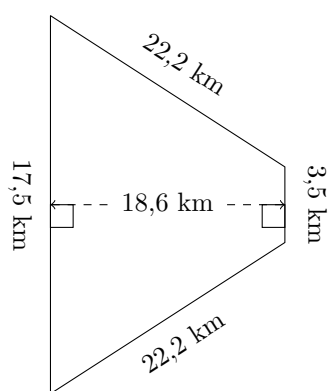
P = ?
A = ?

4.



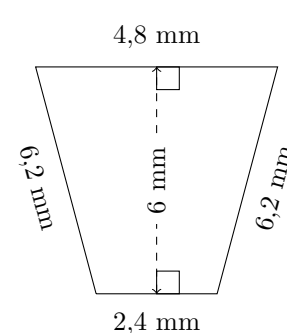
P = ?
A = ?

5.



P = ?
A = ?

6.

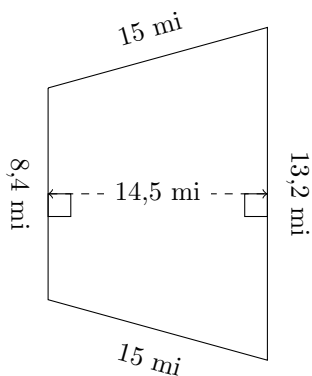


P = ?
A = ?

Aire et Périmètre des Trapèzes (D) Réponses

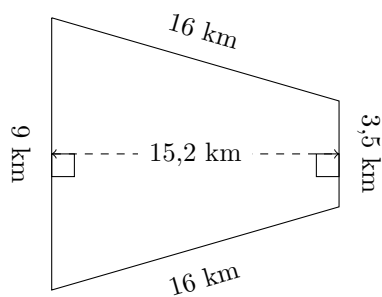
Calculez le périmètre et l'aire de chaque trapèze.

1.



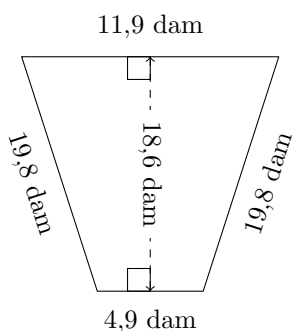
$P = 51,6 \text{ mi}$
 $A = 156,6 \text{ mi}^2$

2.



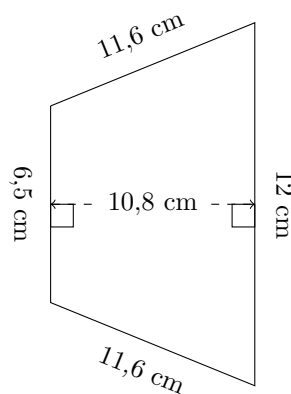
$P = 44,5 \text{ km}$
 $A = 95 \text{ km}^2$

3.



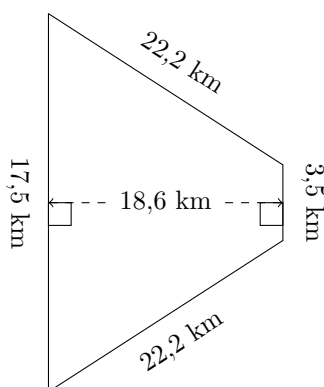
$P = 56,4 \text{ dam}$
 $A = 156,24 \text{ dam}^2$

4.



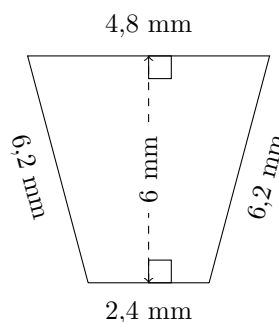
$P = 41,7 \text{ cm}$
 $A = 99,9 \text{ cm}^2$

5.



$P = 65,4 \text{ km}$
 $A = 195,3 \text{ km}^2$

6.



$P = 19,6 \text{ mm}$
 $A = 21,6 \text{ mm}^2$