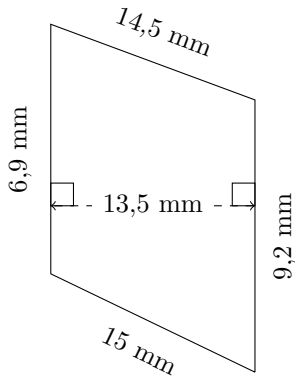


Aire et Périmètre des Trapèzes (I)

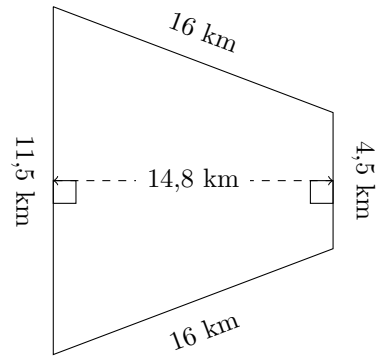
Calculez le périmètre et l'aire de chaque trapèze.

1.



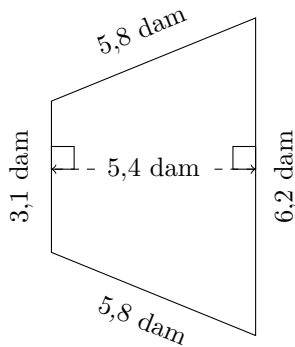
P = ?
A = ?

2.



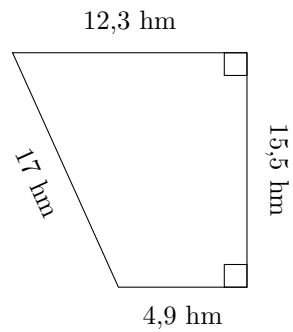
P = ?
A = ?

3.



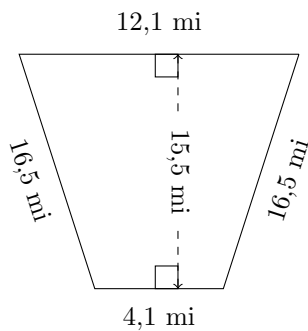
P = ?
A = ?

4.



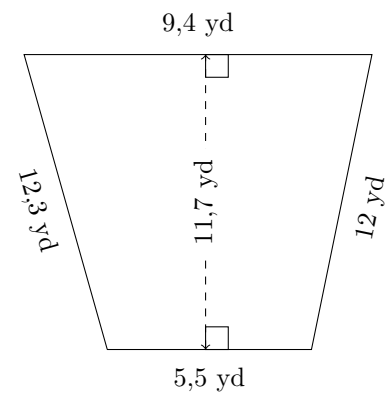
P = ?
A = ?

5.



P = ?
A = ?

6.

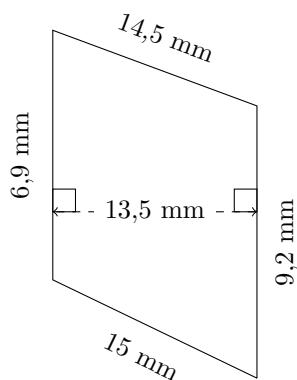


P = ?
A = ?

Aire et Périmètre des Trapèzes (I) Réponses

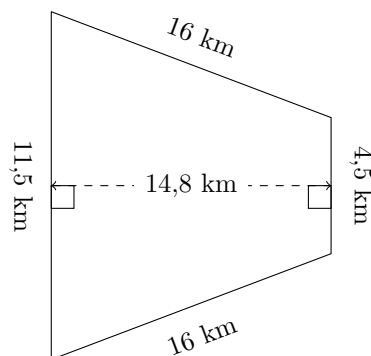
Calculez le périmètre et l'aire de chaque trapèze.

1.



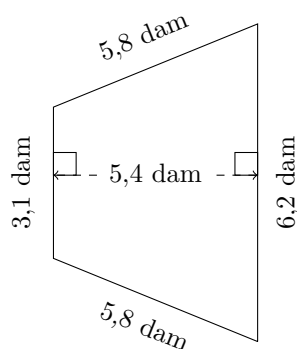
$P = 45,6 \text{ mm}$
 $A = 108,675 \text{ mm}^2$

2.



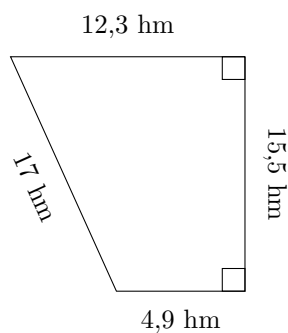
$P = 48 \text{ km}$
 $A = 118,4 \text{ km}^2$

3.



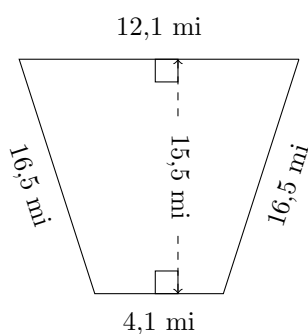
$P = 20,9 \text{ dam}$
 $A = 25,11 \text{ dam}^2$

4.



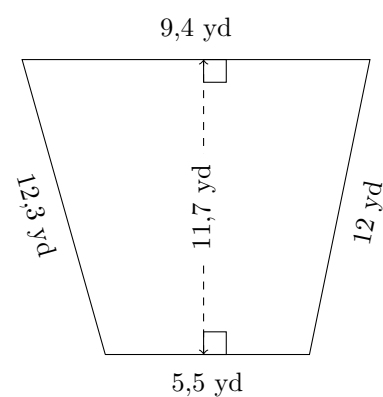
$P = 49,7 \text{ hm}$
 $A = 133,3 \text{ hm}^2$

5.



$P = 49,2 \text{ mi}$
 $A = 125,55 \text{ mi}^2$

6.



$P = 39,2 \text{ yd}$
 $A = 87,165 \text{ yd}^2$