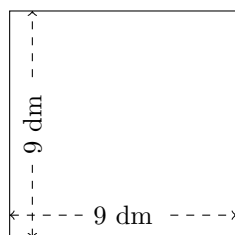


# Perimètre et Aire des Rectangles (H)

Calculez le périmètre et l'aire de chaque rectangle.

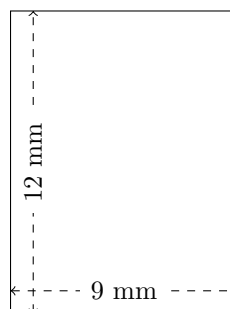
1.



$$P = ?$$

$$A = ?$$


2.



$$P = ?$$

$$A = ?$$

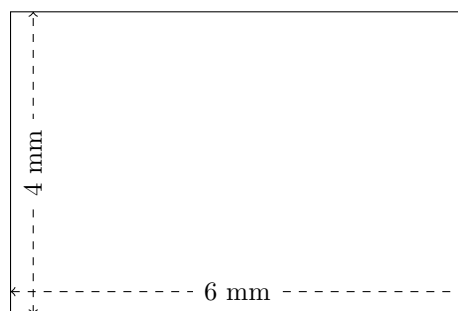
3.



$$P = ?$$

$$A = ?$$

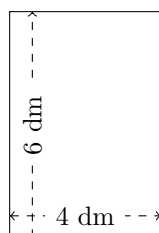
4.



$$P = ?$$

$$A = ?$$

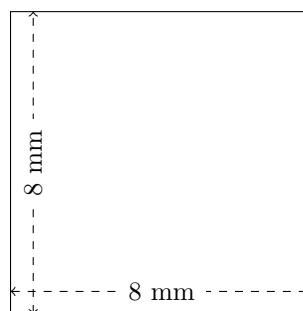
5.



$$P = ?$$

$$A = ?$$

6.



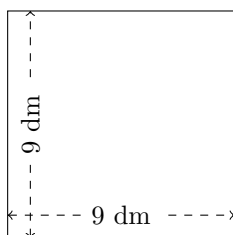
$$P = ?$$

$$A = ?$$

# Perimètre et Aire des Rectangles (H) Réponses

Calculez le périmètre et l'aire de chaque rectangle.

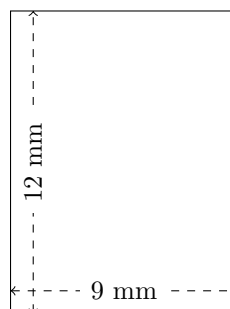
1.



$$P = 36 \text{ dm}$$

$$A = 81 \text{ dm}^2$$


2.



$$P = 42 \text{ mm}$$

$$A = 108 \text{ mm}^2$$

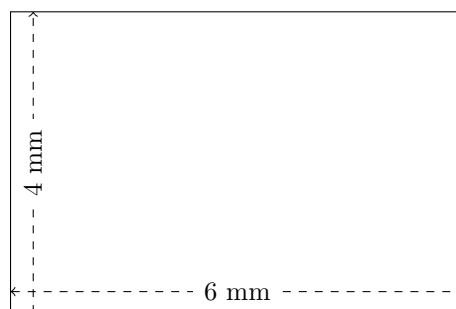
3.



$$P = 36 \text{ dam}$$

$$A = 72 \text{ dam}^2$$

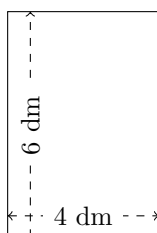
4.



$$P = 20 \text{ mm}$$

$$A = 24 \text{ mm}^2$$

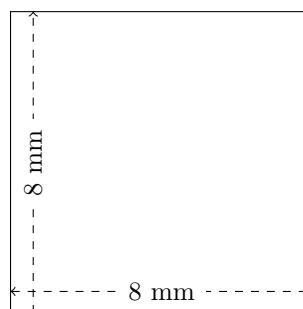
5.



$$P = 20 \text{ dm}$$

$$A = 24 \text{ dm}^2$$

6.



$$P = 32 \text{ mm}$$

$$A = 64 \text{ mm}^2$$