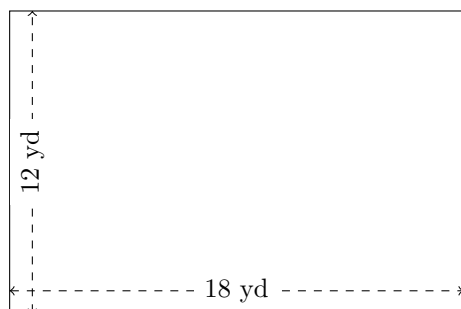


Perimètre et Aire des Rectangles (F)

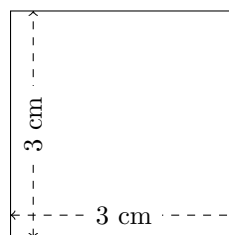
Calculez le périmètre et l'aire de chaque rectangle.

1.



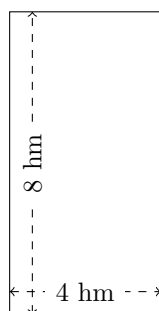
$$P = ?$$
$$A = ?$$

2.



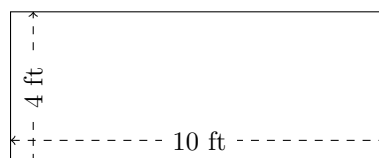
$$P = ?$$
$$A = ?$$

3.



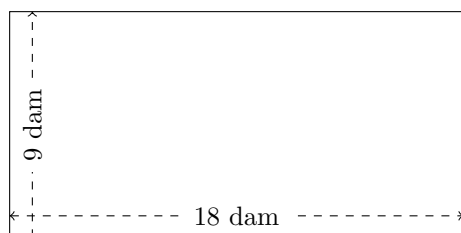
$$P = ?$$
$$A = ?$$

4.



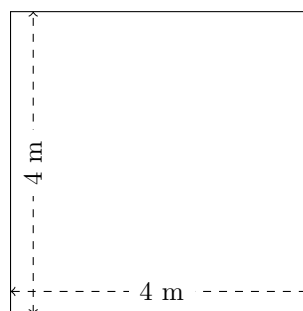
$$P = ?$$
$$A = ?$$

5.



$$P = ?$$
$$A = ?$$

6.

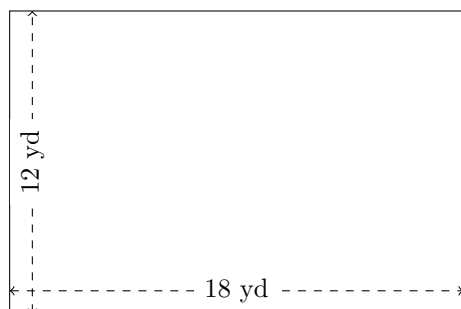


$$P = ?$$
$$A = ?$$

Perimètre et Aire des Rectangles (F) Réponses

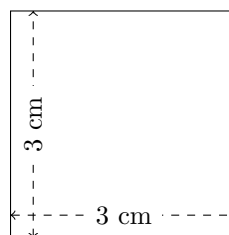
Calculez le périmètre et l'aire de chaque rectangle.

1.



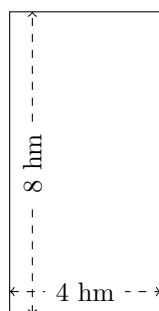
$$P = 60 \text{ yd}$$
$$A = 216 \text{ yd}^2$$

2.



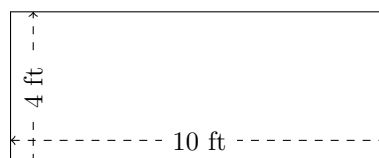
$$P = 12 \text{ cm}$$
$$A = 9 \text{ cm}^2$$

3.



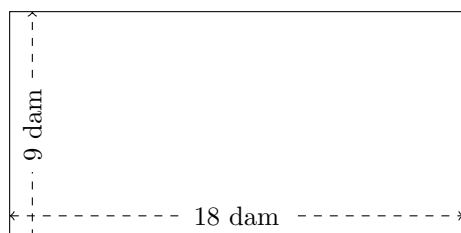
$$P = 24 \text{ hm}$$
$$A = 32 \text{ hm}^2$$

4.



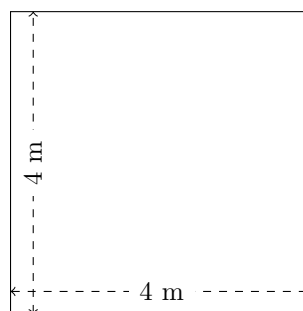
$$P = 28 \text{ ft}$$
$$A = 40 \text{ ft}^2$$

5.



$$P = 54 \text{ dam}$$
$$A = 162 \text{ dam}^2$$

6.



$$P = 16 \text{ m}$$
$$A = 16 \text{ m}^2$$