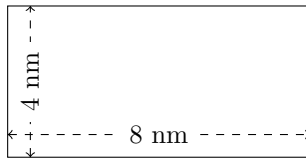


Perimètre et Aire des Rectangles (C)

Calculez le périmètre et l'aire de chaque rectangle.

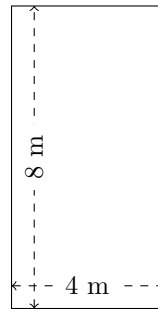
1.



$$P = ?$$

$$A = ?$$

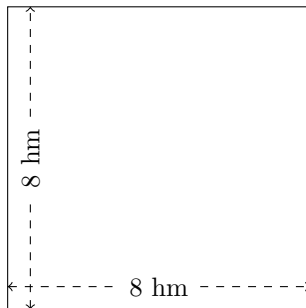
2.



$$P = ?$$

$$A = ?$$

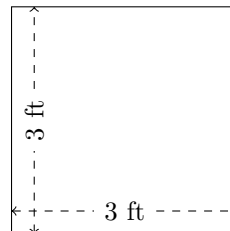
3.



$$P = ?$$

$$A = ?$$

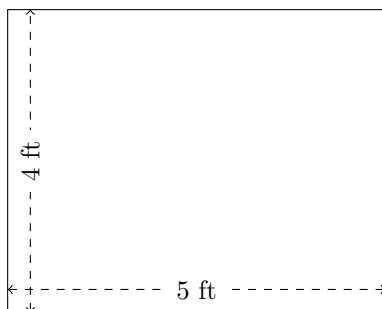
4.



$$P = ?$$

$$A = ?$$

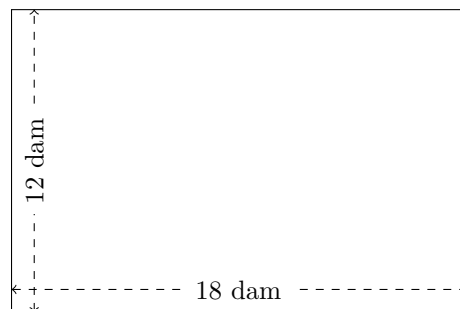
5.



$$P = ?$$

$$A = ?$$

6.



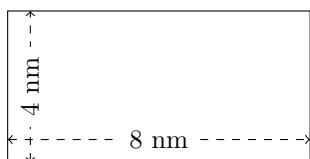
$$P = ?$$

$$A = ?$$

Perimètre et Aire des Rectangles (C) Réponses

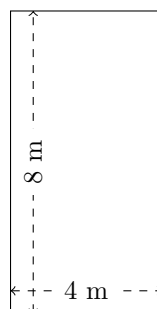
Calculez le périmètre et l'aire de chaque rectangle.

1.



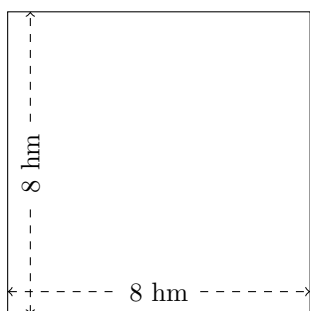
$$P = 24 \text{ nm}$$
$$A = 32 \text{ nm}^2$$

2.



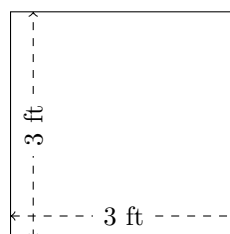
$$P = 24 \text{ m}$$
$$A = 32 \text{ m}^2$$

3.



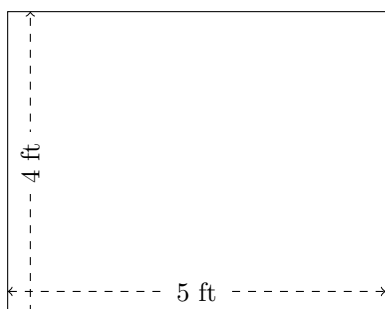
$$P = 32 \text{ hm}$$
$$A = 64 \text{ hm}^2$$

4.



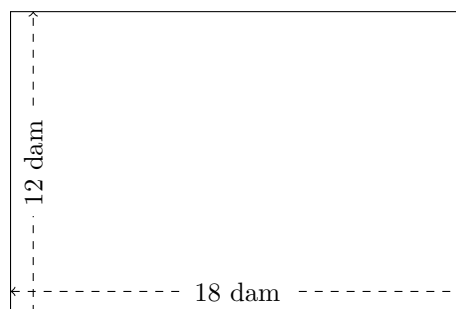
$$P = 12 \text{ ft}$$
$$A = 9 \text{ ft}^2$$

5.



$$P = 18 \text{ ft}$$
$$A = 20 \text{ ft}^2$$

6.



$$P = 60 \text{ dam}$$
$$A = 216 \text{ dam}^2$$