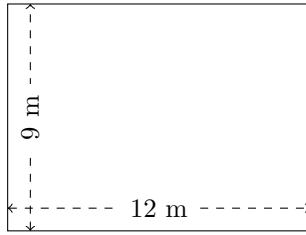


Perimètre et Aire des Rectangles (B)

Calculez le périmètre et l'aire de chaque rectangle.

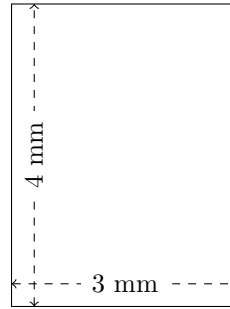
1.



$$P = ?$$

$$A = ?$$

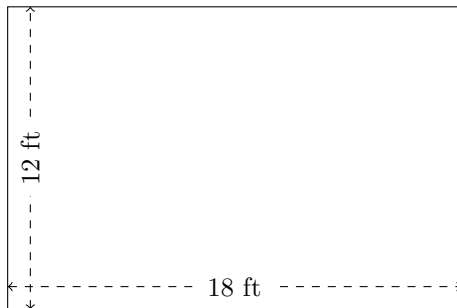
2.



$$P = ?$$

$$A = ?$$


3.



$$P = ?$$

$$A = ?$$

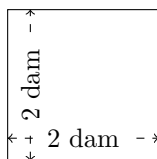
4.



$$P = ?$$

$$A = ?$$

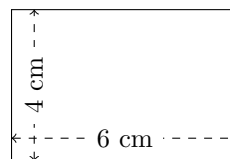
5.



$$P = ?$$

$$A = ?$$

6.



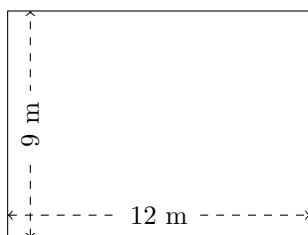
$$P = ?$$

$$A = ?$$

Perimètre et Aire des Rectangles (B) Réponses

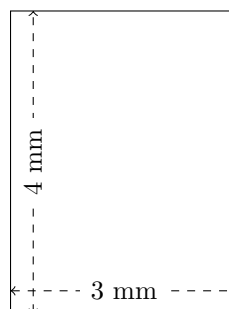
Calculez le périmètre et l'aire de chaque rectangle.

1.



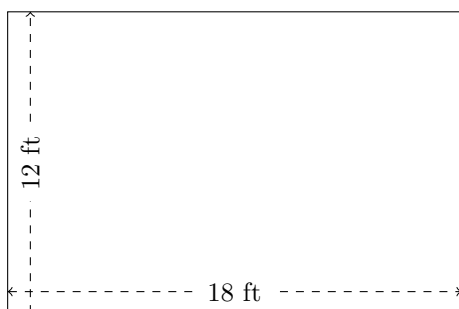
$$P = 42 \text{ m}$$
$$A = 108 \text{ m}^2$$

2.




$$P = 14 \text{ mm}$$
$$A = 12 \text{ mm}^2$$

3.




$$P = 60 \text{ ft}$$
$$A = 216 \text{ ft}^2$$

4.



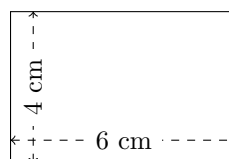
$$P = 42 \text{ mm}$$
$$A = 90 \text{ mm}^2$$

5.



$$P = 8 \text{ dam}$$
$$A = 4 \text{ dam}^2$$

6.



$$P = 20 \text{ cm}$$
$$A = 24 \text{ cm}^2$$