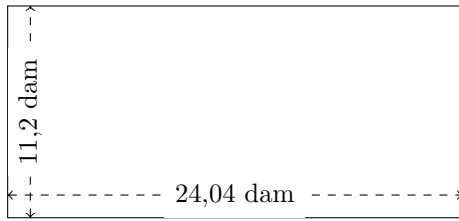


Perimètre et Aire des Rectangles (G)

Calculez le périmètre et l'aire de chaque rectangle.

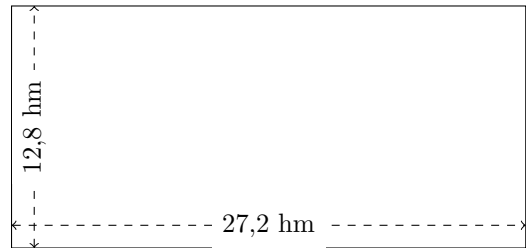
1.



$$P = ?$$

$$A = ?$$

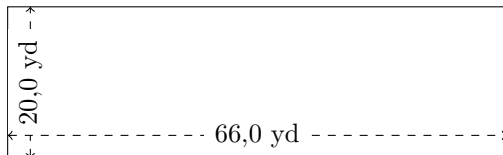
2.



$$P = ?$$

$$A = ?$$


3.



$$P = ?$$

$$A = ?$$

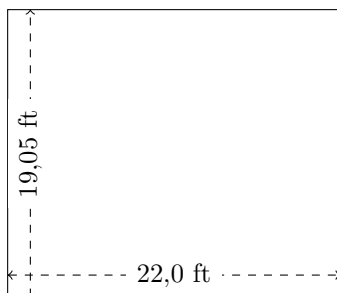
4.



$$P = ?$$

$$A = ?$$

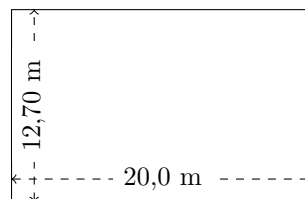
5.



$$P = ?$$

$$A = ?$$

6.



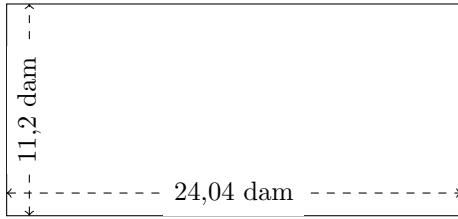
$$P = ?$$

$$A = ?$$

Perimètre et Aire des Rectangles (G) Réponses

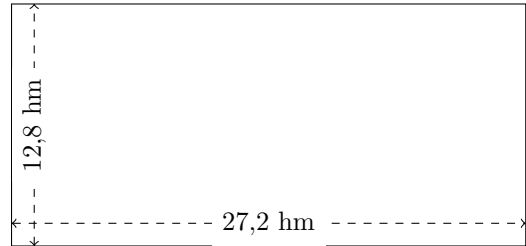
Calculez le périmètre et l'aire de chaque rectangle.

1.



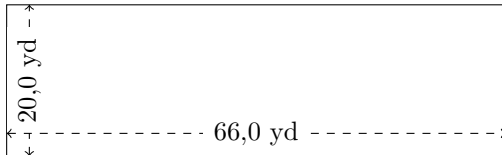
$$P = 70,48 \text{ dam}$$
$$A = 269,248 \text{ dam}^2$$

2.




$$P = 80 \text{ hm}$$
$$A = 348,16 \text{ hm}^2$$

3.



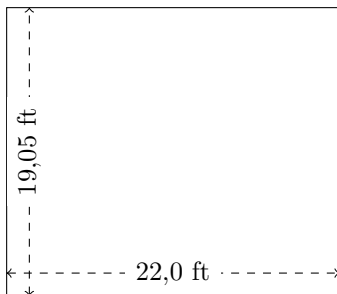
$$P = 172 \text{ yd}$$
$$A = 1320 \text{ yd}^2$$

4.



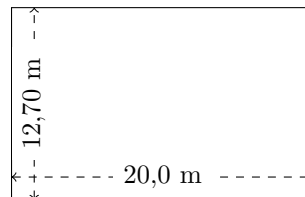
$$P = 115,5 \text{ dm}$$
$$A = 687,96 \text{ dm}^2$$

5.



$$P = 82,1 \text{ ft}$$
$$A = 419,1 \text{ ft}^2$$

6.



$$P = 65,4 \text{ m}$$
$$A = 254 \text{ m}^2$$