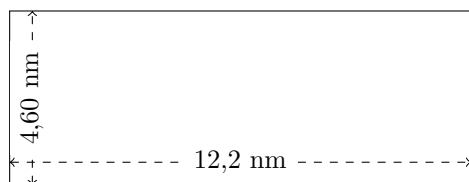


# Perimètre et Aire des Rectangles (D)

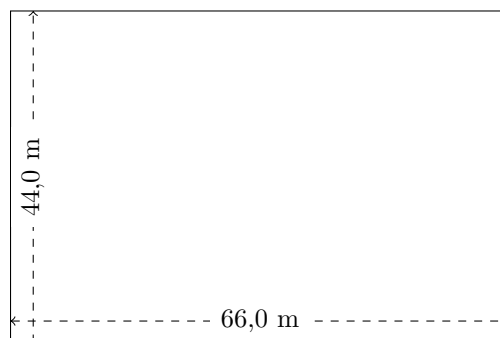
Calculez le périmètre et l'aire de chaque rectangle.

1.



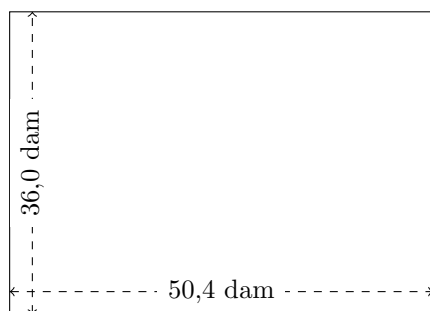
$$P = ?$$
$$A = ?$$

2.



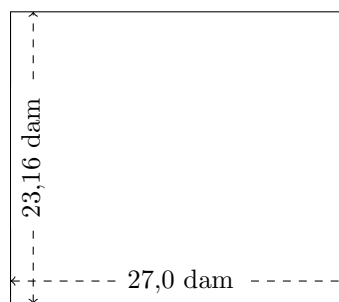
$$P = ?$$
$$A = ?$$

3.



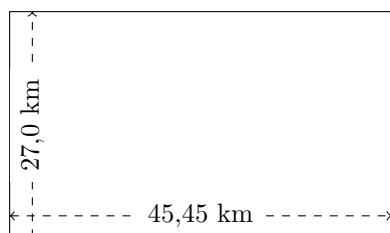
$$P = ?$$
$$A = ?$$

4.



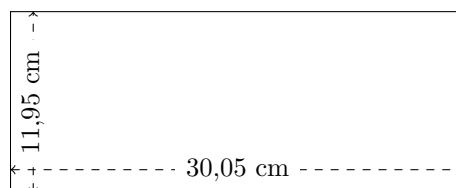
$$P = ?$$
$$A = ?$$

5.



$$P = ?$$
$$A = ?$$

6.

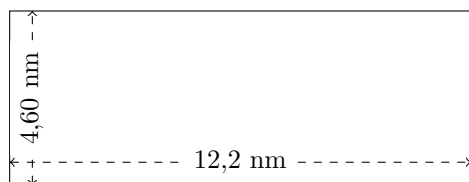


$$P = ?$$
$$A = ?$$

# Perimètre et Aire des Rectangles (D) Réponses

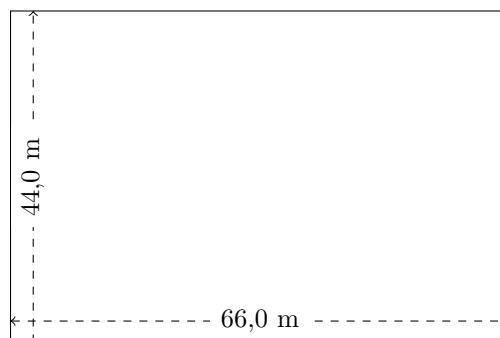
Calculez le périmètre et l'aire de chaque rectangle.

1.



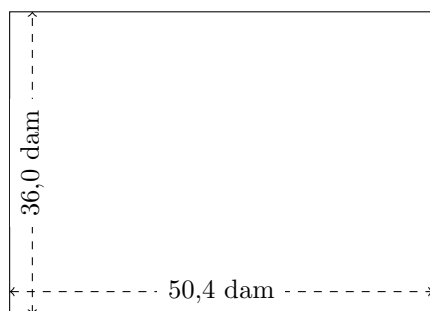
$$P = 33,6 \text{ nm}$$
$$A = 56,12 \text{ nm}^2$$

2.



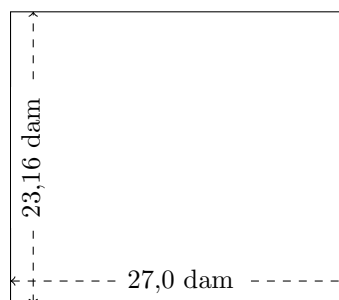
$$P = 220 \text{ m}$$
$$A = 2904 \text{ m}^2$$

3.



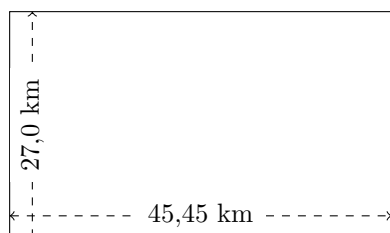
$$P = 172,8 \text{ dam}$$
$$A = 1814,4 \text{ dam}^2$$

4.



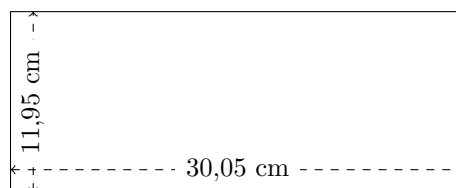
$$P = 100,32 \text{ dam}$$
$$A = 625,32 \text{ dam}^2$$

5.



$$P = 144,9 \text{ km}$$
$$A = 1227,15 \text{ km}^2$$

6.



$$P = 84 \text{ cm}$$
$$A = 359,0975 \text{ cm}^2$$