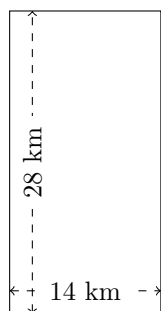


# Perimètre et Aire des Rectangles (H)

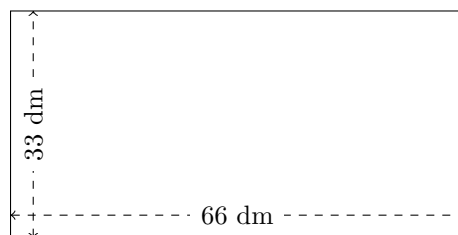
Calculez le périmètre et l'aire de chaque rectangle.

1.




$$P = ?$$
$$A = ?$$

2.



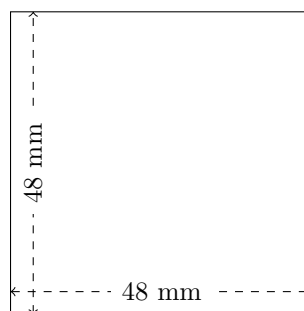
$$P = ?$$
$$A = ?$$

3.



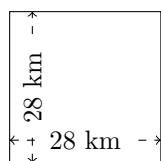
$$P = ?$$
$$A = ?$$

4.



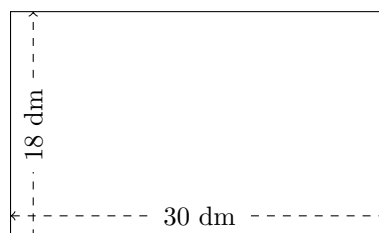
$$P = ?$$
$$A = ?$$

5.



$$P = ?$$
$$A = ?$$

6.

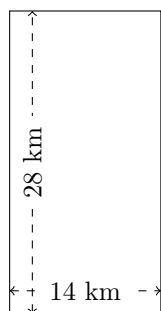


$$P = ?$$
$$A = ?$$

# Perimètre et Aire des Rectangles (H) Réponses

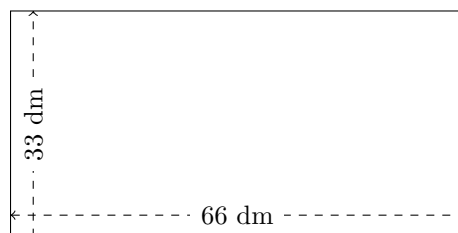
Calculez le périmètre et l'aire de chaque rectangle.

1.




$$P = 84 \text{ km}$$
$$A = 392 \text{ km}^2$$

2.



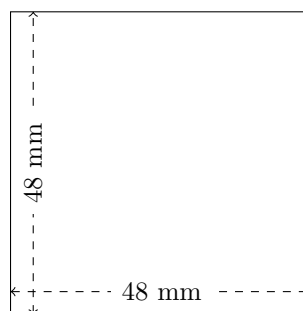
$$P = 198 \text{ dm}$$
$$A = 2178 \text{ dm}^2$$

3.



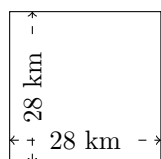
$$P = 70 \text{ dam}$$
$$A = 300 \text{ dam}^2$$

4.



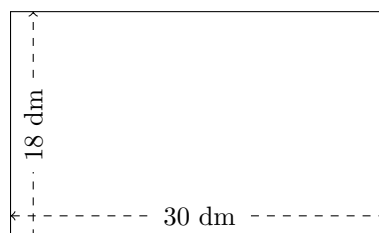
$$P = 192 \text{ mm}$$
$$A = 2304 \text{ mm}^2$$

5.



$$P = 112 \text{ km}$$
$$A = 784 \text{ km}^2$$

6.



$$P = 96 \text{ dm}$$
$$A = 540 \text{ dm}^2$$