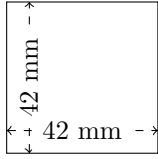


Perimètre et Aire des Rectangles (B)

Calculez le périmètre et l'aire de chaque rectangle.

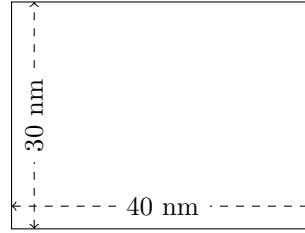
1.



$$P = ?$$

$$A = ?$$

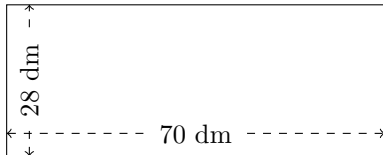
2.



$$P = ?$$

$$A = ?$$

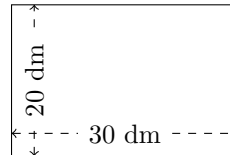
3.



$$P = ?$$

$$A = ?$$

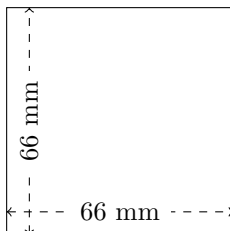
4.



$$P = ?$$

$$A = ?$$

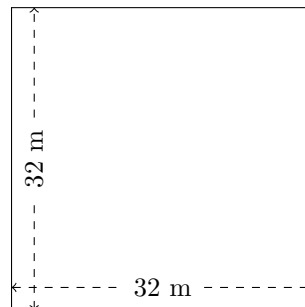
5.



$$P = ?$$

$$A = ?$$

6.



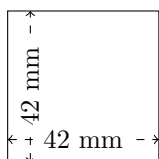
$$P = ?$$

$$A = ?$$

Perimètre et Aire des Rectangles (B) Réponses

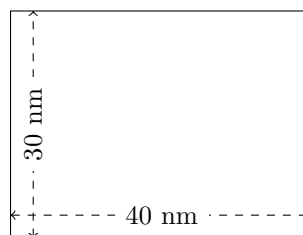
Calculez le périmètre et l'aire de chaque rectangle.

1.



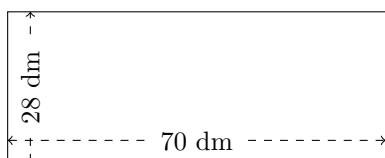
$$P = 168 \text{ mm}$$
$$A = 1764 \text{ mm}^2$$

2.



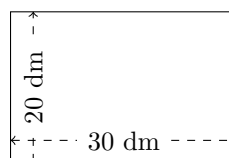
$$P = 140 \text{ mm}$$
$$A = 1200 \text{ mm}^2$$

3.



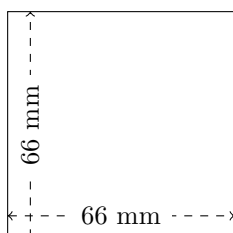
$$P = 196 \text{ dm}$$
$$A = 1960 \text{ dm}^2$$

4.



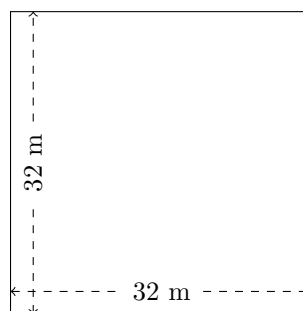
$$P = 100 \text{ dm}$$
$$A = 600 \text{ dm}^2$$

5.



$$P = 264 \text{ mm}$$
$$A = 4356 \text{ mm}^2$$

6.



$$P = 128 \text{ m}$$
$$A = 1024 \text{ m}^2$$