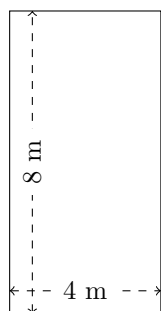


Mesure d'un Rectangle (J)

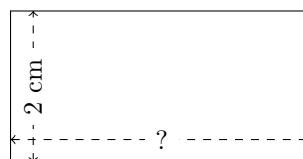
Calculez les mesures manquantes pour chaque rectangle.

1.




$$P = ?$$
$$A = ?$$

2.



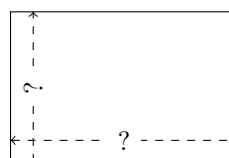
$$P = 12 \text{ cm}$$
$$A = ?$$

3.



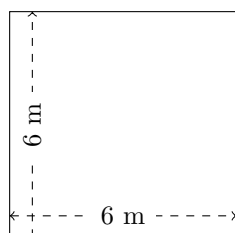
$$P = ?$$
$$A = 40 \text{ dam}^2$$

4.



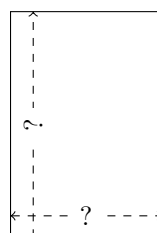
$$P = 10 \text{ m}$$
$$A = 6 \text{ m}^2$$

5.



$$P = ?$$
$$A = ?$$

6.

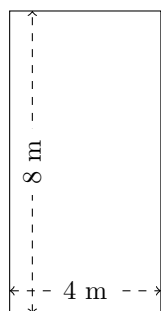


$$P = 20 \text{ dam}$$
$$A = 24 \text{ dam}^2$$

Mesure d'un Rectangle (J) Réponses

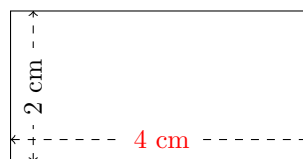
Calculez les mesures manquantes pour chaque rectangle.

1.




$$P = 24 \text{ m}$$
$$A = 32 \text{ m}^2$$

2.



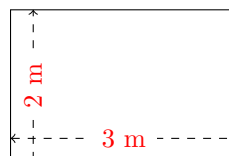
$$P = 12 \text{ cm}$$
$$A = 8 \text{ cm}^2$$

3.



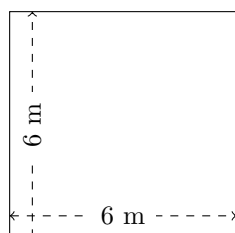
$$P = 28 \text{ dam}$$
$$A = 40 \text{ dam}^2$$

4.



$$P = 10 \text{ m}$$
$$A = 6 \text{ m}^2$$

5.



$$P = 24 \text{ m}$$
$$A = 36 \text{ m}^2$$

6.



$$P = 20 \text{ dam}$$
$$A = 24 \text{ dam}^2$$