


Mesure d'un Rectangle (D)

Calculez les mesures manquantes pour chaque rectangle.

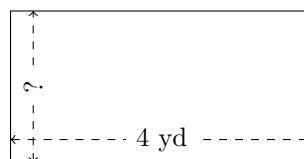
1.



$$P = ?$$

$$A = ?$$

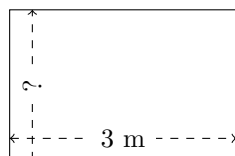
2.



$$P = 12 \text{ yd}$$

$$A = ?$$

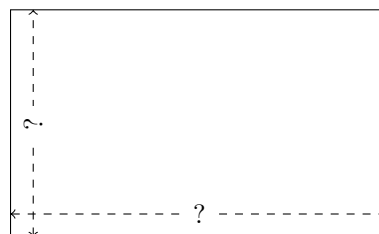
3.



$$P = ?$$

$$A = 6 \text{ m}^2$$

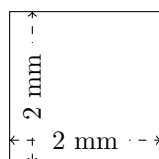
4.



$$P = 32 \text{ mm}$$

$$A = 60 \text{ mm}^2$$

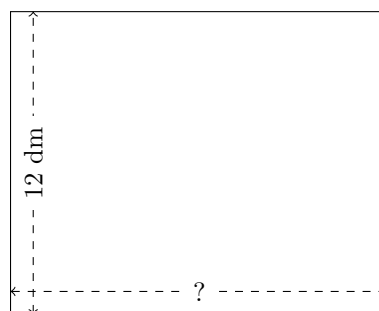
5.



$$P = ?$$

$$A = ?$$

6.




$$P = 54 \text{ dm}$$

$$A = ?$$

Mesure d'un Rectangle (D) Réponses

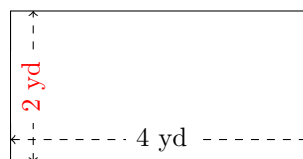
Calculez les mesures manquantes pour chaque rectangle.

1.



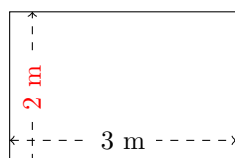
$$P = 48 \text{ mm}$$
$$A = 108 \text{ mm}^2$$

2.



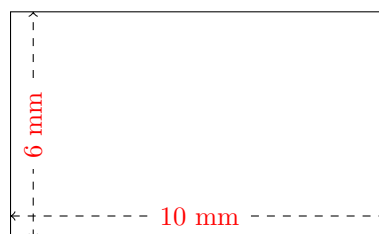
$$P = 12 \text{ yd}$$
$$A = 8 \text{ yd}^2$$

3.



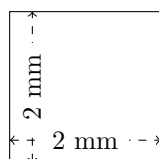
$$P = 10 \text{ m}$$
$$A = 6 \text{ m}^2$$

4.



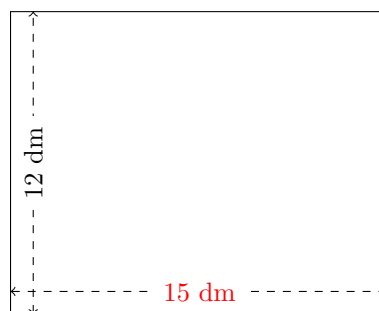
$$P = 32 \text{ mm}$$
$$A = 60 \text{ mm}^2$$

5.



$$P = 8 \text{ mm}$$
$$A = 4 \text{ mm}^2$$

6.



$$P = 54 \text{ dm}$$
$$A = 180 \text{ dm}^2$$