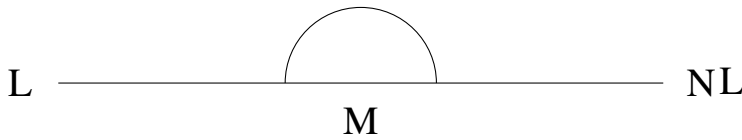


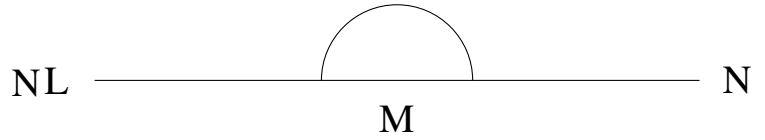
Mesure d'Angles (D)

Estimez et ensuite mesurez à l'aide d'un rapporteur la valeur de chaque angle.

1.

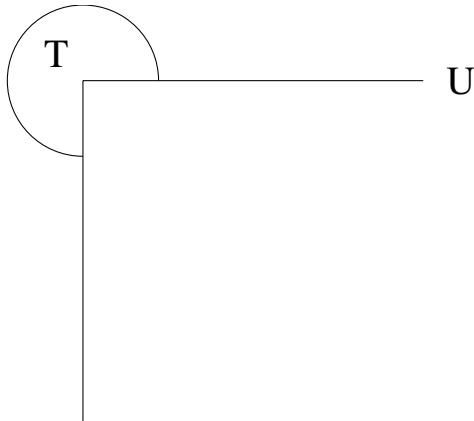


2.




$$m\angle LMN =$$

3.




$$m\angle STU =$$

4.



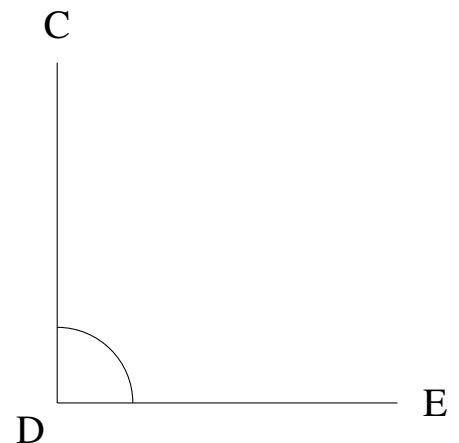
$$m\angle VWX =$$

5.



$$m\angle QRS =$$

6.



$$m\angle CDE =$$