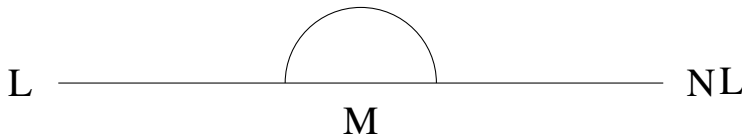


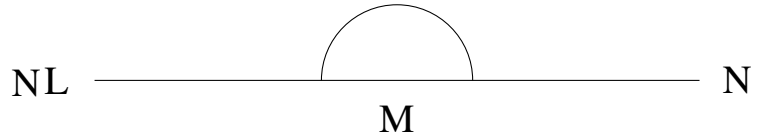
Mesure d'Angles (D)

Estimez et ensuite mesurez à l'aide d'un rapporteur la valeur de chaque angle.

1.

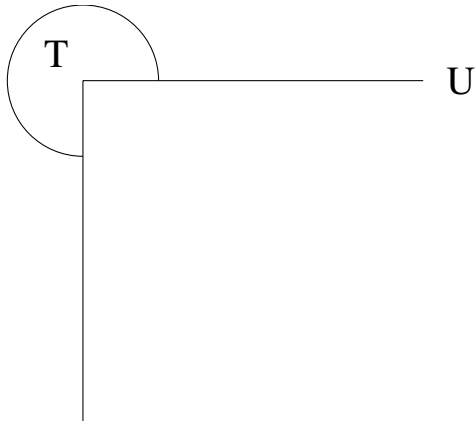


2.




$$m\angle LMN =$$

3.



$$m\angle STU =$$


4.



$$m\angle LMN =$$

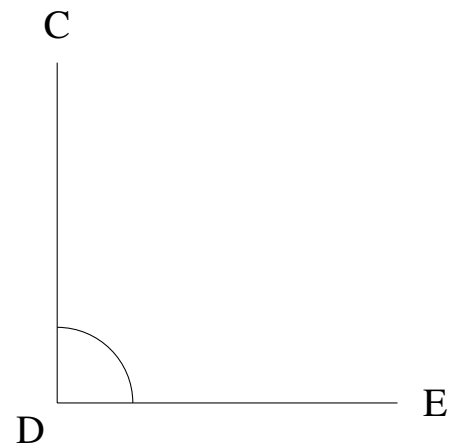
$$m\angle VWX =$$

5.



$$m\angle QRS =$$

6.

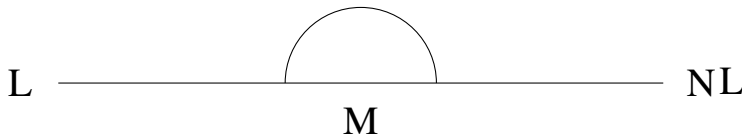


$$m\angle CDE =$$

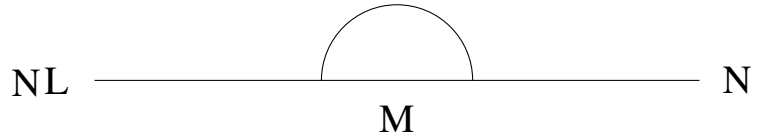
Mesure d'Angles (D) Solutions

Estimez et ensuite mesurez à l'aide d'un rapporteur la valeur de chaque angle.

1.



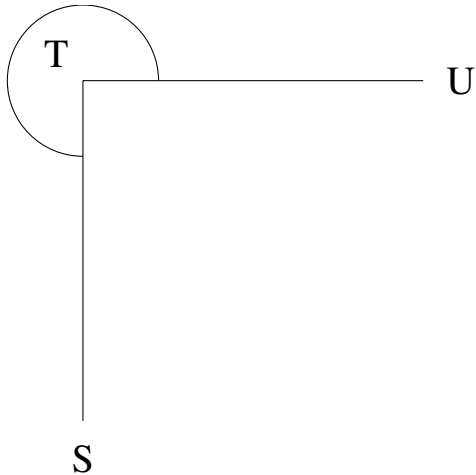
2.




$$m\angle LMN = 180^\circ$$

$$m\angle LMN = 180^\circ$$

3.




4.



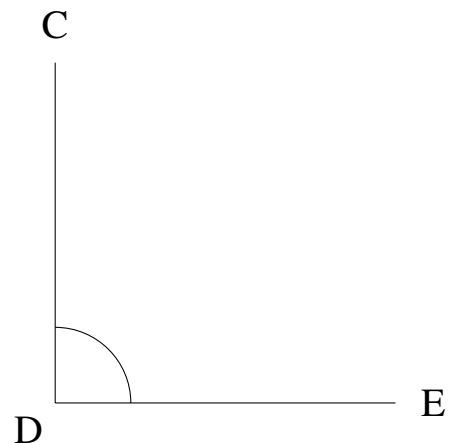
$$m\angle STU = 270^\circ$$

$$m\angle VWX = 0^\circ$$

5.



6.



$$m\angle QRS = 0^\circ$$

$$m\angle CDE = 90^\circ$$