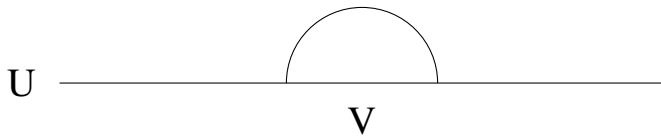


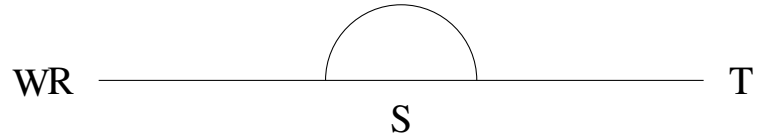
Mesure d'Angles (G)

Estimez et ensuite mesurez à l'aide d'un rapporteur la valeur de chaque angle.

1.



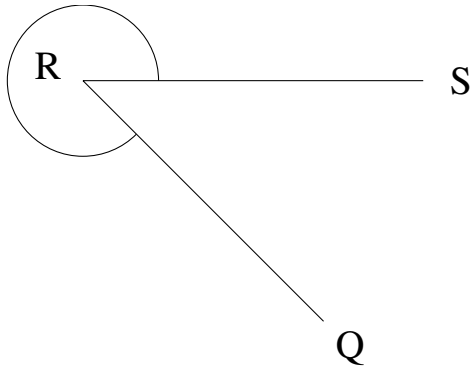
2.




$$m\angle UVW =$$

$$m\angle RST =$$

3.



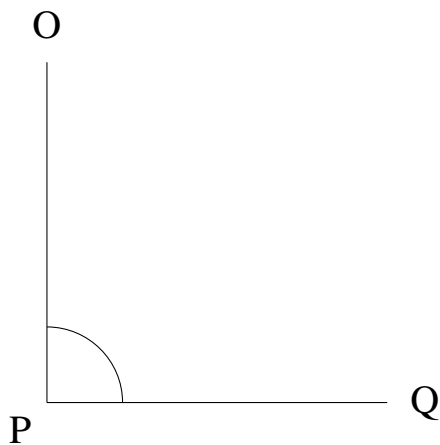
4.



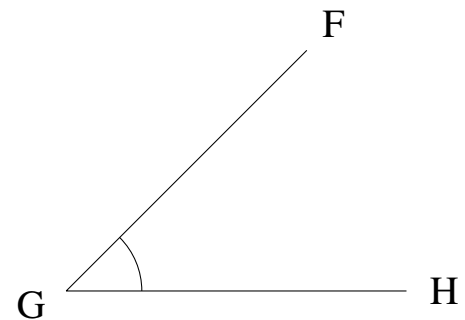
$$m\angle QRS =$$

$$m\angle STU =$$

5.



6.



$$m\angle OPQ =$$

$$m\angle FGH =$$