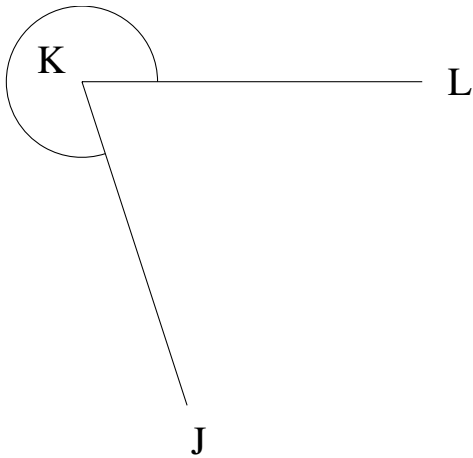


## Mesure d'Angles (I)

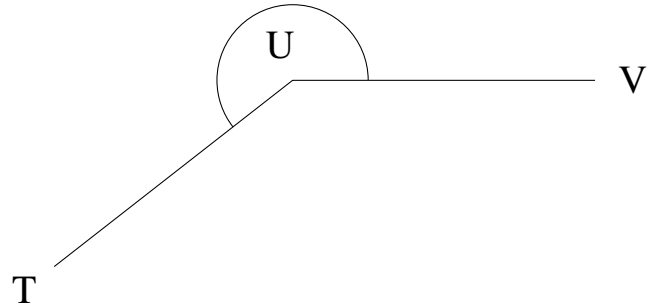
Estimez et ensuite mesurez à l'aide d'un rapporteur la valeur de chaque angle.

1.



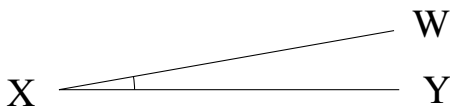
$$m\angle JKL =$$

2.



$$m\angle TUV =$$

3.



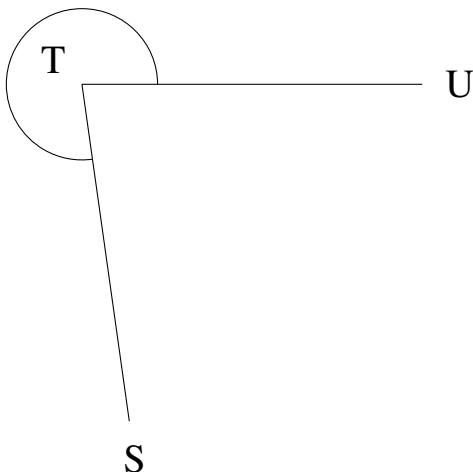
$$m\angle WXY =$$

4.



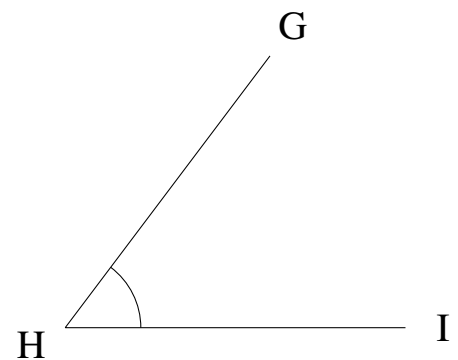
$$m\angle UVW =$$

5.



$$m\angle STU =$$

6.



$$m\angle GHI =$$