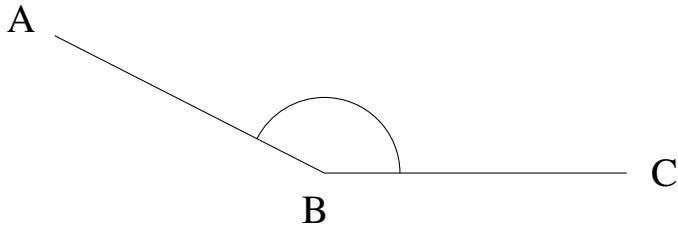


Mesure d'Angles (E)

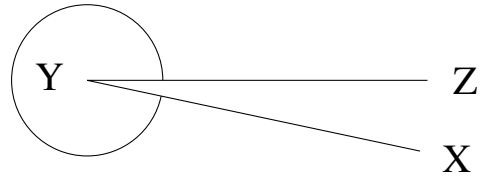
Estimez et ensuite mesurez à l'aide d'un rapporteur la valeur de chaque angle.

1.



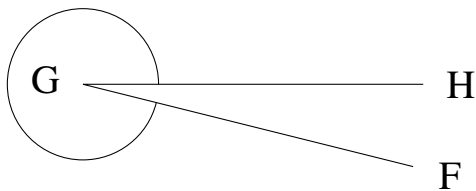
$$m\angle ABC =$$

2.



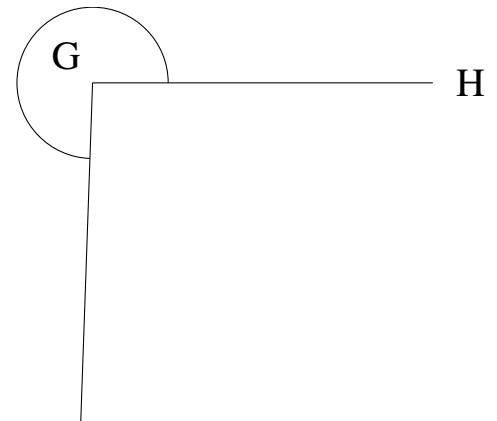
$$m\angle XYZ =$$

3.



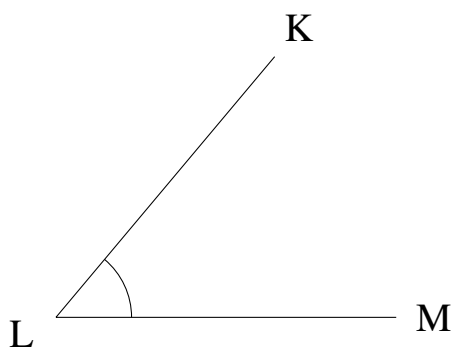
$$m\angle FGH =$$

4.



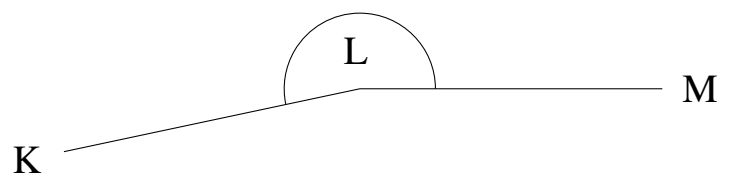
$$m\angle FGH =$$

5.



$$m\angle KLM =$$

6.

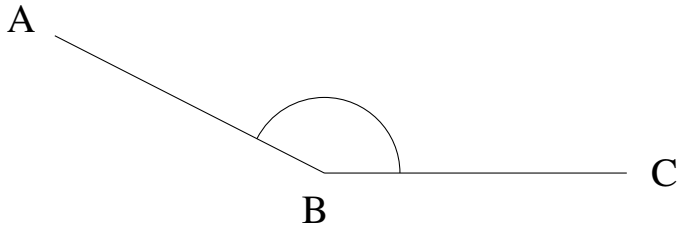


$$m\angle KLM =$$

Mesure d'Angles (E) Solutions

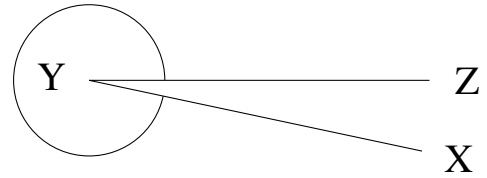
Estimez et ensuite mesurez à l'aide d'un rapporteur la valeur de chaque angle.

1.



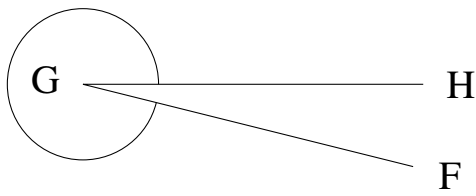
$$m\angle ABC = 153^\circ$$

2.



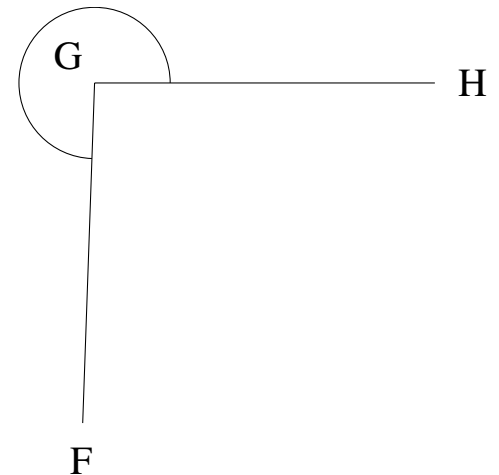
$$m\angle XYZ = 348^\circ$$

3.



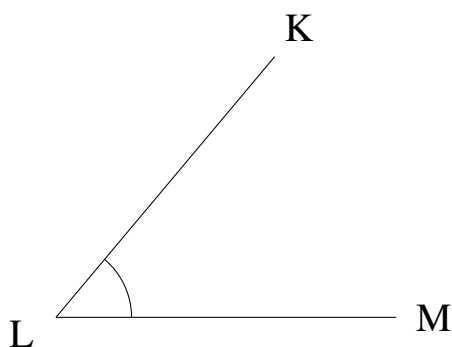
$$m\angle FGH = 346^\circ$$

4.



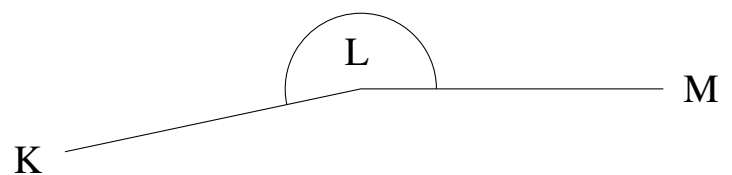
$$m\angle FGH = 268^\circ$$

5.



$$m\angle KLM = 50^\circ$$

6.



$$m\angle KLM = 192^\circ$$