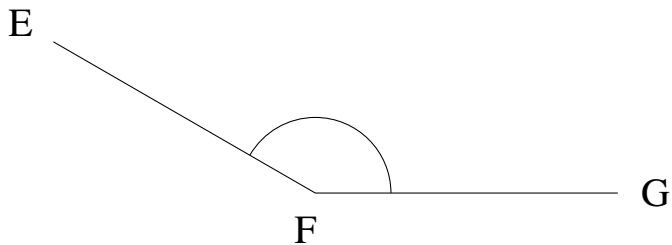


Mesure d'Angles (I)

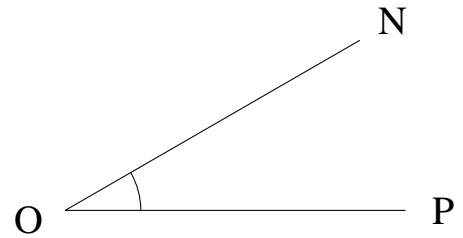
Estimez et ensuite mesurez à l'aide d'un rapporteur la valeur de chaque angle.

1.




$$m\angle EFG =$$

2.



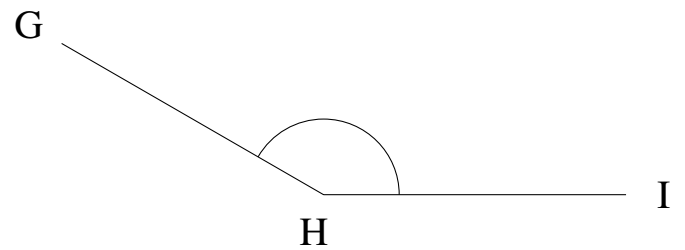
$$m\angle NOP =$$

3.




$$m\angle HIJ =$$

4.



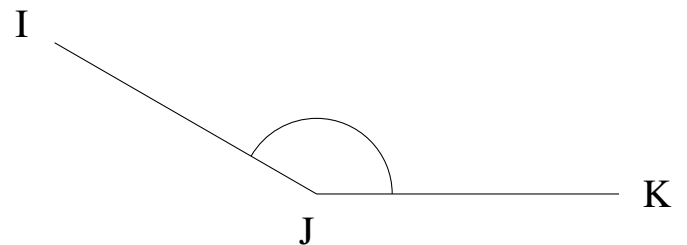
$$m\angle GHI =$$

5.



$$m\angle HIJ =$$

6.

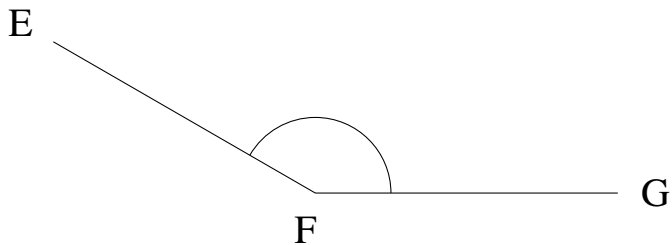


$$m\angle IJK =$$

Mesure d'Angles (I) Solutions

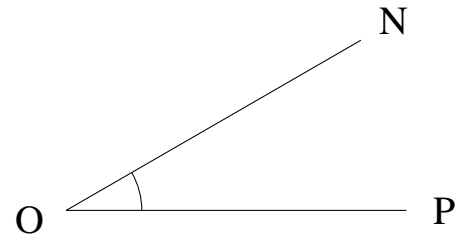
Estimez et ensuite mesurez à l'aide d'un rapporteur la valeur de chaque angle.

1.




$$m\angle EFG = 150^\circ$$

2.



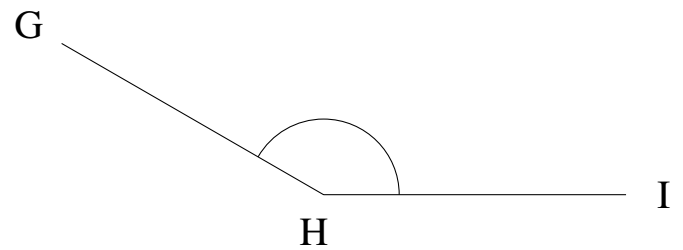
$$m\angle NOP = 30^\circ$$

3.




$$m\angle HIJ = 0^\circ$$

4.



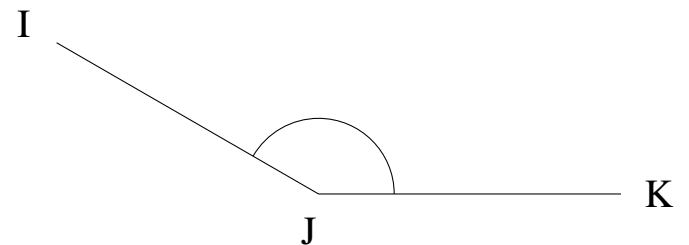
$$m\angle GHI = 150^\circ$$

5.



$$m\angle HIJ = 0^\circ$$

6.



$$m\angle IJK = 150^\circ$$