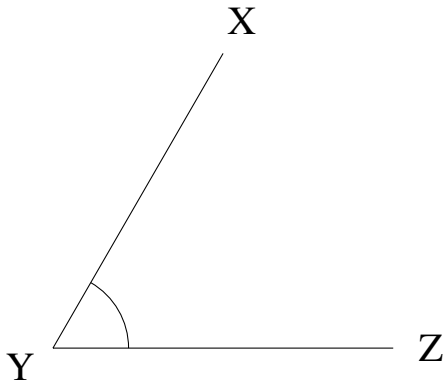


Mesure d'Angles (G)

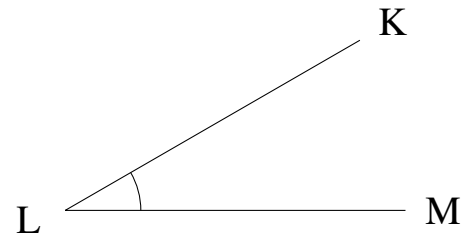
Estimez et ensuite mesurez à l'aide d'un rapporteur la valeur de chaque angle.

1.




$$m\angle XYZ =$$

2.




$$m\angle KLM =$$

3.




$$m\angle WXY =$$

4.



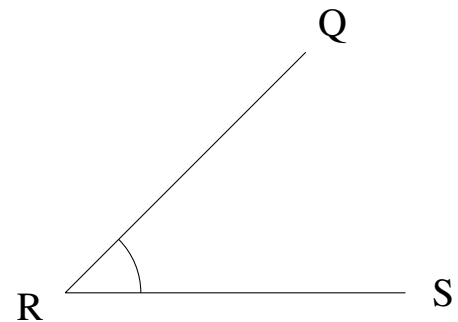
$$m\angle CDE =$$

5.



$$m\angle OPQ =$$

6.



$$m\angle QRS =$$