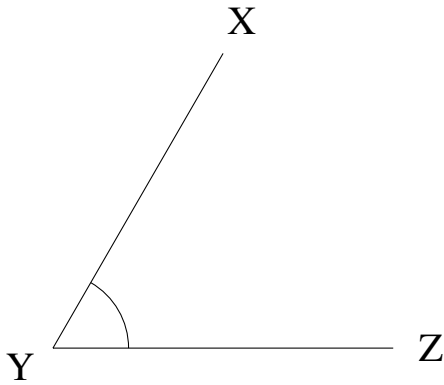


Mesure d'Angles (G)

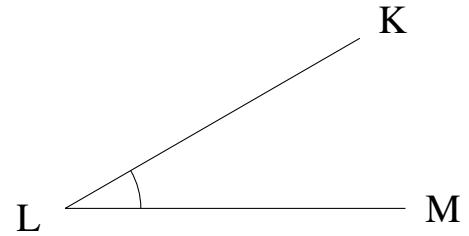
Estimez et ensuite mesurez à l'aide d'un rapporteur la valeur de chaque angle.

1.




$$m\angle XYZ =$$

2.




$$m\angle KLM =$$

3.




$$m\angle WXY =$$

4.



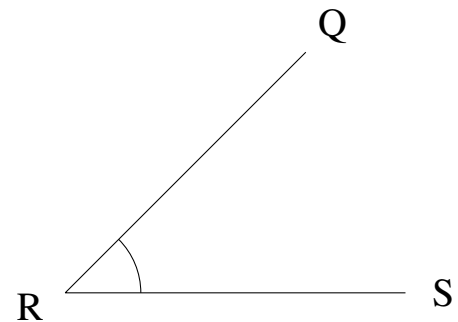
$$m\angle CDE =$$

5.



$$m\angle OPQ =$$

6.

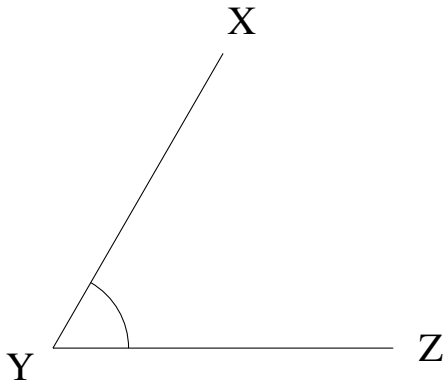


$$m\angle QRS =$$

Mesure d'Angles (G) Solutions

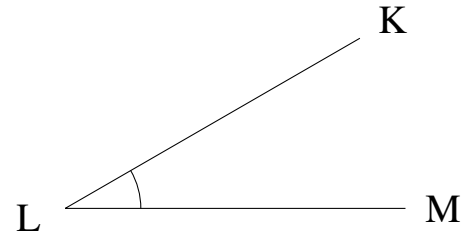
Estimez et ensuite mesurez à l'aide d'un rapporteur la valeur de chaque angle.

1.



$$m\angle XYZ = 60^\circ$$

2.




$$m\angle KLM = 30^\circ$$

3.




$$m\angle WXY = 0^\circ$$

4.



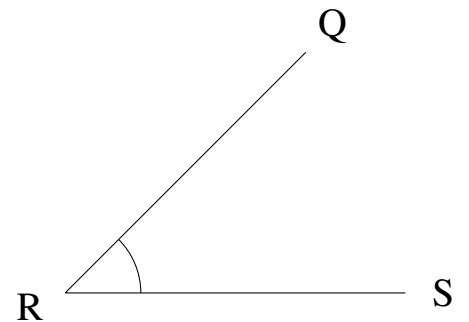
$$m\angle CDE = 0^\circ$$

5.



$$m\angle OPQ = 0^\circ$$

6.



$$m\angle QRS = 45^\circ$$