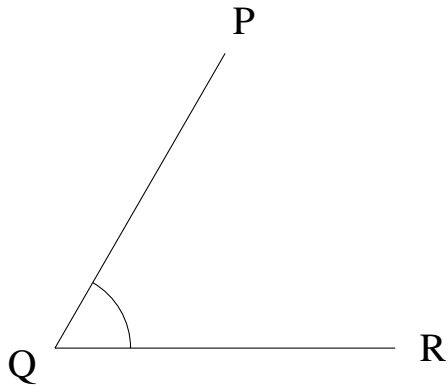


## Mesure d'Angles (F)

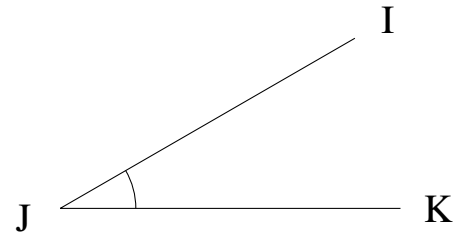
Estimez et ensuite mesurez à l'aide d'un rapporteur la valeur de chaque angle.

1.



$$m\angle PQR =$$

2.



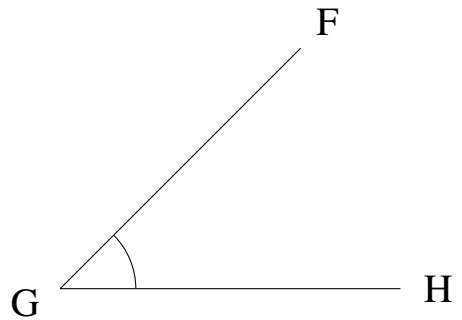
$$m\angle IJK =$$

3.




$$m\angle HIJ =$$

4.



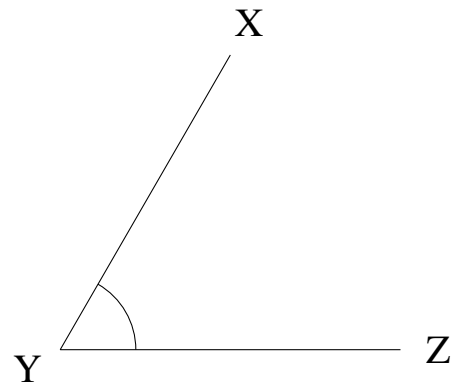
$$m\angle FGH =$$

5.



$$m\angle PQR =$$

6.



$$m\angle XYZ =$$