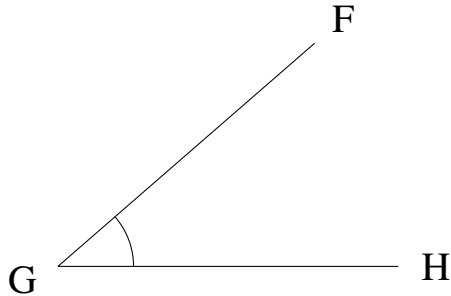


Mesure d'Angles (H)

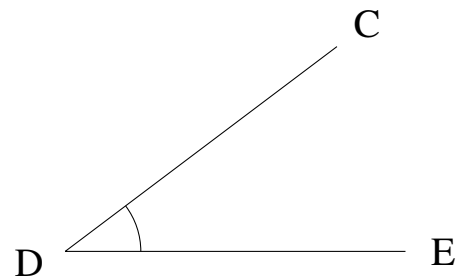
Estimez et ensuite mesurez à l'aide d'un rapporteur la valeur de chaque angle.

1.



$$m\angle FGH =$$

2.



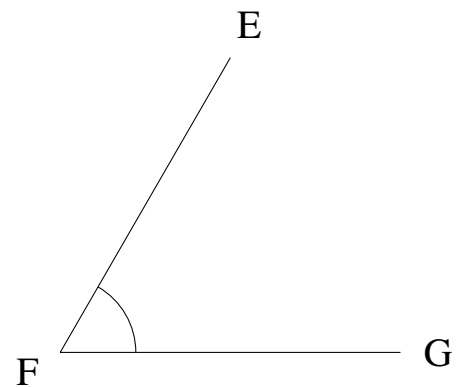
$$m\angle CDE =$$

3.



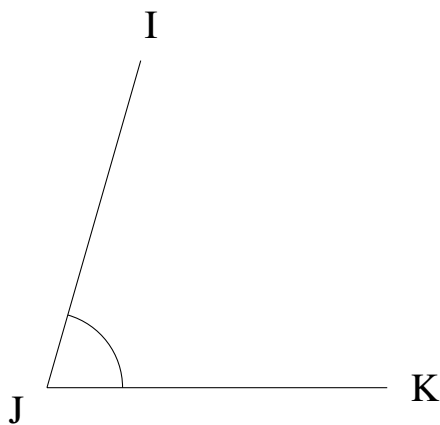
$$m\angle VWX =$$

4.



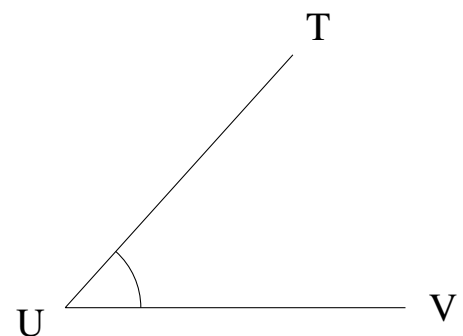
$$m\angle EFG =$$

5.



$$m\angle IJK =$$

6.

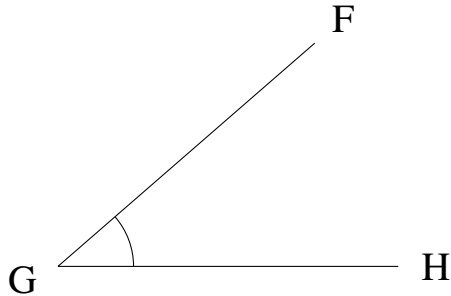


$$m\angle TUV =$$

Mesure d'Angles (H) Solutions

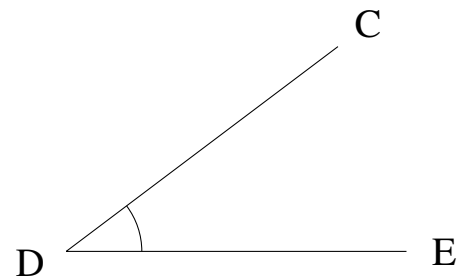
Estimez et ensuite mesurez à l'aide d'un rapporteur la valeur de chaque angle.

1.



$$m\angle FGH = 41^\circ$$

2.



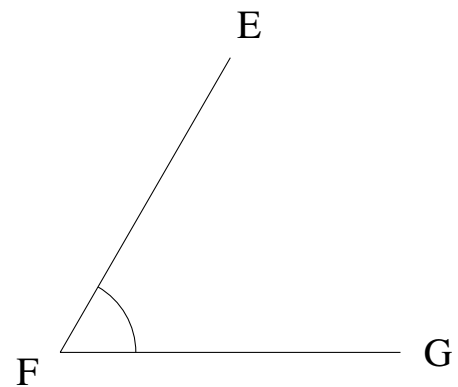
$$m\angle CDE = 37^\circ$$

3.



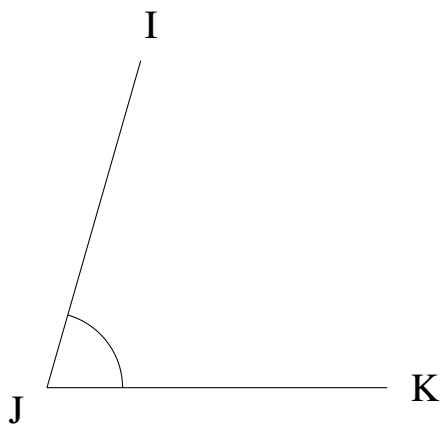
$$m\angle VWX = 1^\circ$$

4.



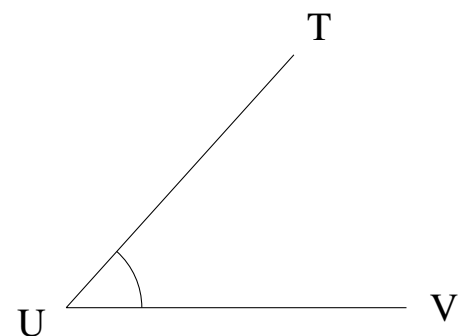
$$m\angle EFG = 60^\circ$$

5.



$$m\angle IJK = 74^\circ$$

6.



$$m\angle TUV = 48^\circ$$