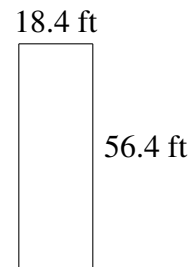
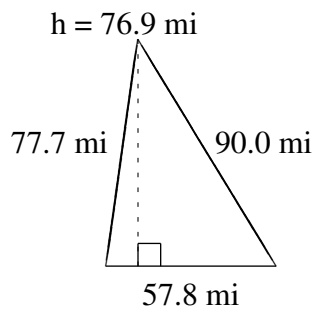
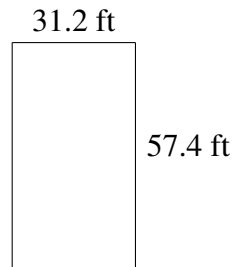
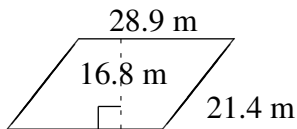
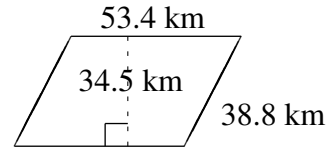
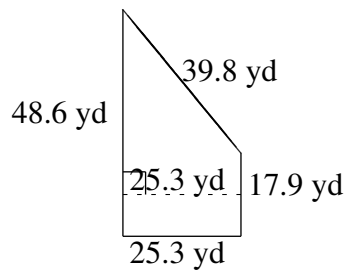


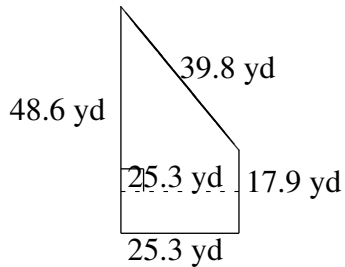
# Aire et Périmètre de Polygones (I)

Trouvez l'aire et le périmètre de chaque polygone.

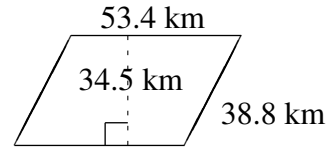


# Aire et Périmètre de Polygones (I) Solutions

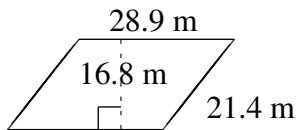
Trouvez l'aire et le périmètre de chaque polygone.



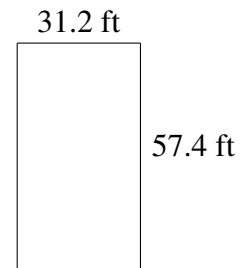
$$A = 841.225 \text{ yd}^2$$
$$P = 131.6 \text{ yd}$$



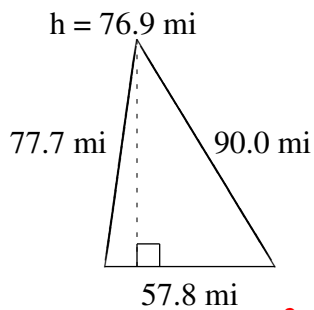
$$A = 1842.30 \text{ km}^2$$
$$P = 184.4 \text{ km}$$



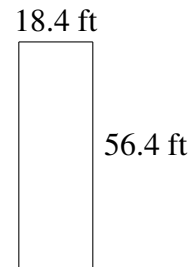
$$A = 485.52 \text{ m}^2$$
$$P = 100.6 \text{ m}$$



$$A = 1790.88 \text{ ft}^2$$
$$P = 177.2 \text{ ft}$$



$$A = 2222.41 \text{ mi}^2$$
$$P = 225.5 \text{ mi}$$



$$A = 1037.76 \text{ ft}^2$$
$$P = 149.6 \text{ ft}$$