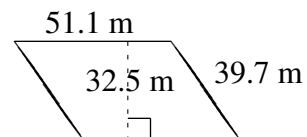
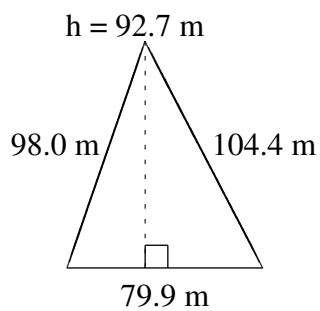
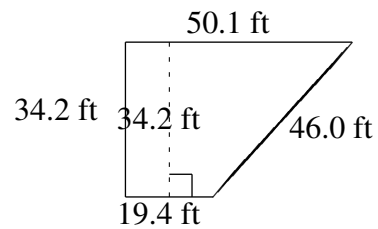
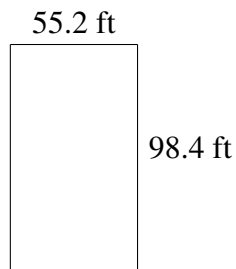
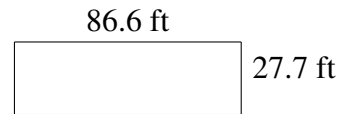
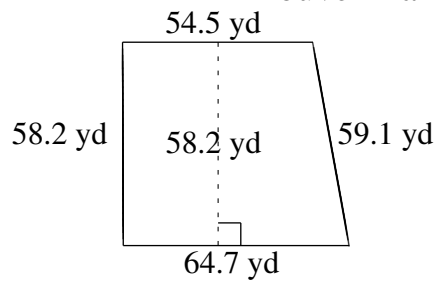


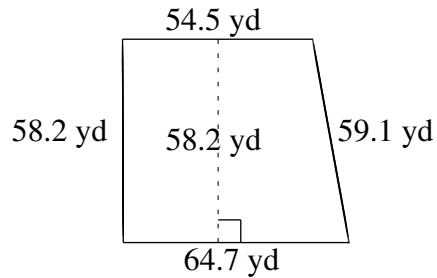
## Aire et Périmètre de Polygones (D)

Trouvez l'aire et le périmètre de chaque polygone.



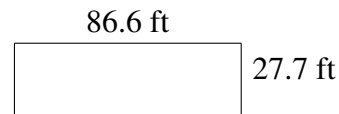
# Aire et Périmètre de Polygones (D) Solutions

Trouvez l'aire et le périmètre de chaque polygone.



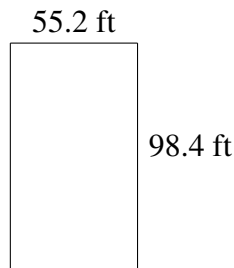
$$A = 3468.72 \text{ yd}^2$$

$$P = 236.5 \text{ yd}$$



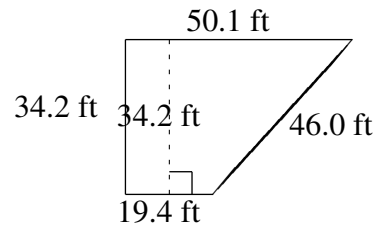
$$A = 2398.82 \text{ ft}^2$$

$$P = 228.6 \text{ ft}$$



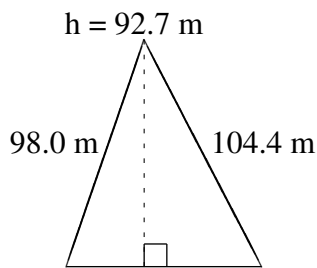
$$A = 5431.68 \text{ ft}^2$$

$$P = 307.2 \text{ ft}$$



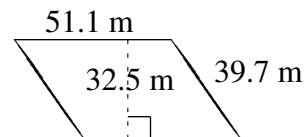
$$A = 1188.45 \text{ ft}^2$$

$$P = 149.7 \text{ ft}$$



$$A = 3703.365 \text{ m}^2$$

$$P = 282.3 \text{ m}$$



$$A = 1660.75 \text{ m}^2$$

$$P = 181.6 \text{ m}$$