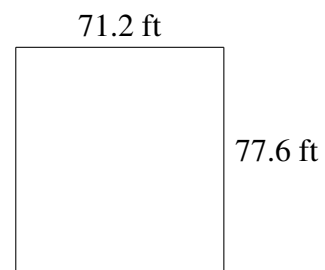
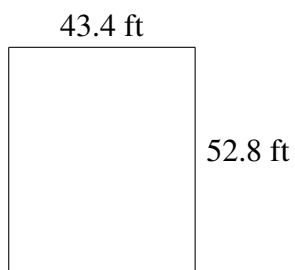
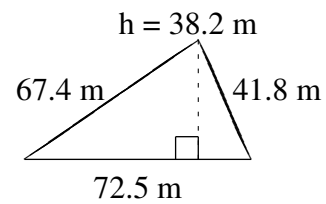
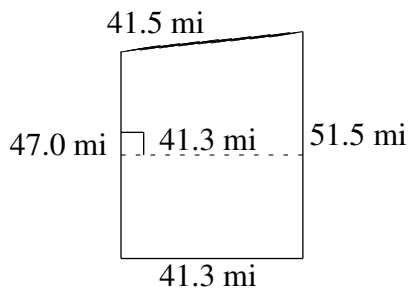
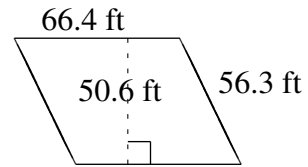
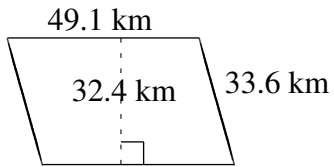


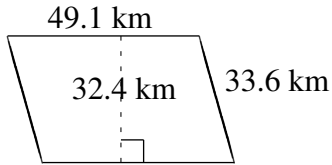
Aire et Périmètre de Polygones (A)

Trouvez l'aire et le périmètre de chaque polygone.

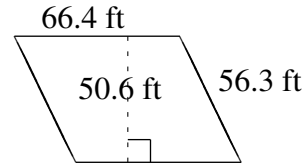


Aire et Périmètre de Polygones (A) Solutions

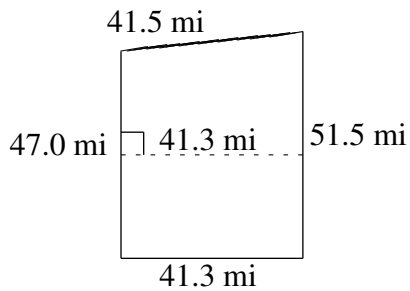
Trouvez l'aire et le périmètre de chaque polygone.



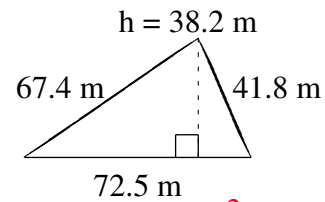
$$A = 1590.84 \text{ km}^2$$
$$P = 165.4 \text{ km}$$



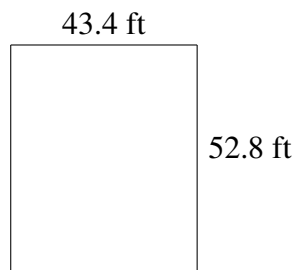
$$A = 3359.84 \text{ ft}^2$$
$$P = 245.4 \text{ ft}$$



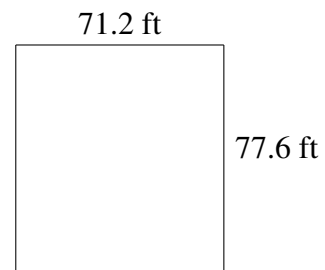
$$A = 2034.025 \text{ mi}^2$$
$$P = 181.3 \text{ mi}$$



$$A = 1384.75 \text{ m}^2$$
$$P = 181.7 \text{ m}$$



$$A = 2291.52 \text{ ft}^2$$
$$P = 192.4 \text{ ft}$$



$$A = 5525.12 \text{ ft}^2$$
$$P = 297.6 \text{ ft}$$