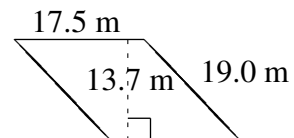
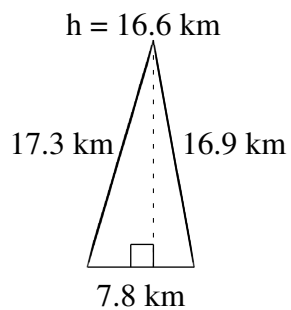
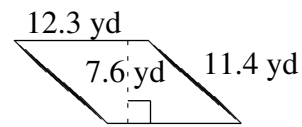
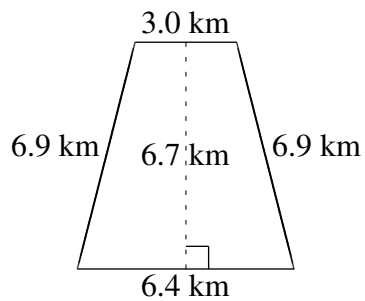
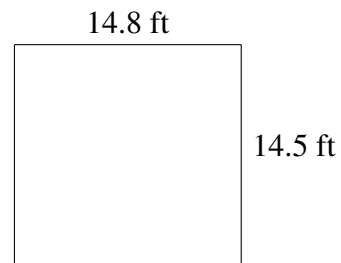
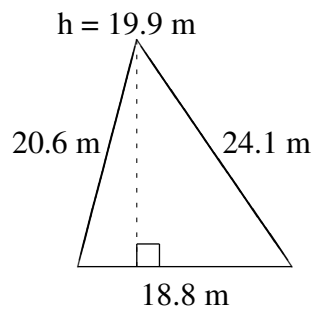


Aire et Périmètre de Polygones (I)

Trouvez l'aire et le périmètre de chaque polygone.



Aire et Périmètre de Polygones (I) Solutions

Trouvez l'aire et le périmètre de chaque polygone.

