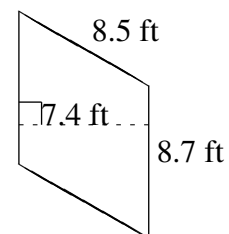
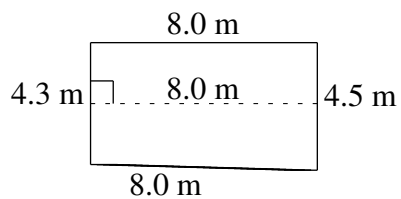
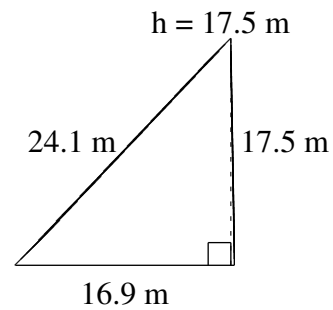
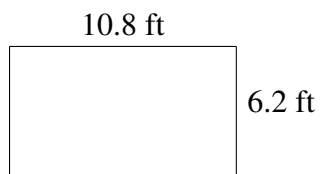
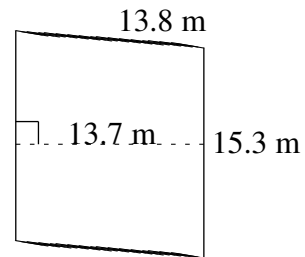
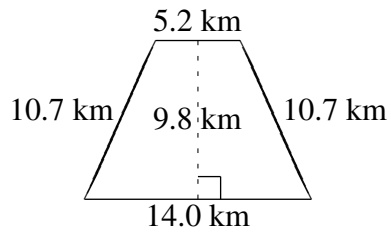


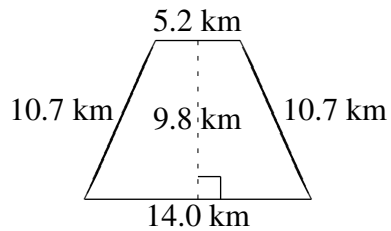
# Aire et Périmètre de Polygones (D)

Trouvez l'aire et le périmètre de chaque polygone.



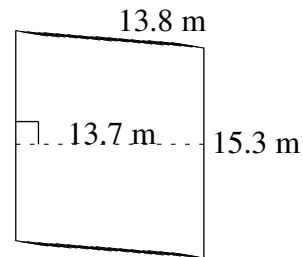
# Aire et Périmètre de Polygones (D) Solutions

Trouvez l'aire et le périmètre de chaque polygone.



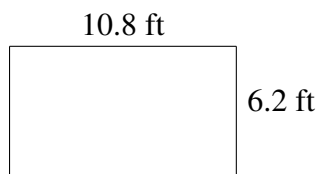
$$A = 94.08 \text{ km}^2$$

$$P = 40.6 \text{ km}$$



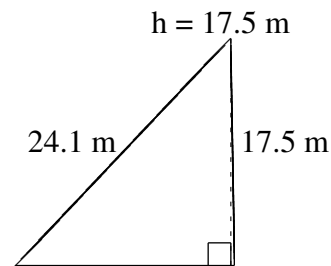
$$A = 209.61 \text{ m}^2$$

$$P = 58.2 \text{ m}$$



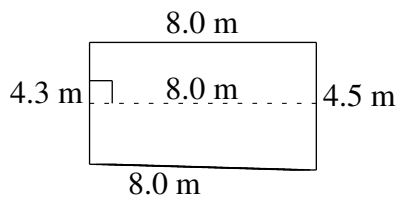
$$A = 66.96 \text{ ft}^2$$

$$P = 34.0 \text{ ft}$$



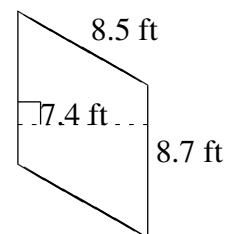
$$A = 147.875 \text{ m}^2$$

$$P = 58.5 \text{ m}$$



$$A = 35.20 \text{ m}^2$$

$$P = 24.8 \text{ m}$$



$$A = 64.38 \text{ ft}^2$$

$$P = 34.4 \text{ ft}$$