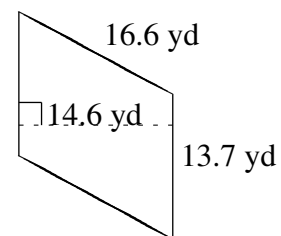
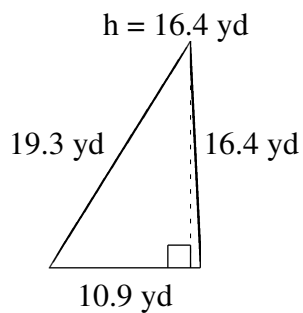
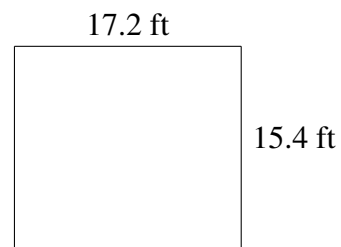
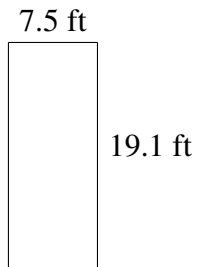
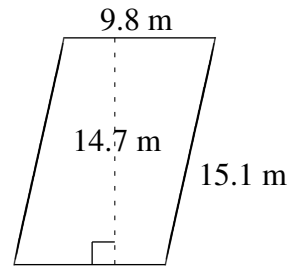
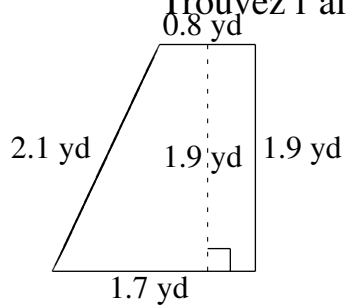


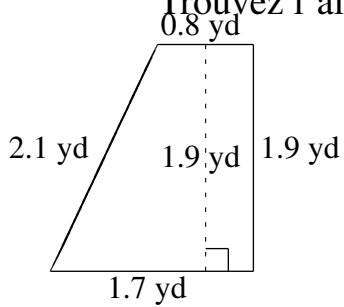
Aire et Périmètre de Polygones (C)

Trouvez l'aire et le périmètre de chaque polygone.



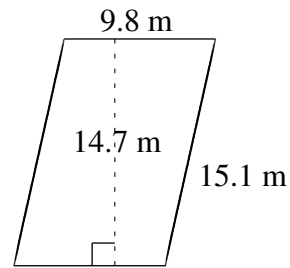
Aire et Périmètre de Polygones (C) Solutions

Trouvez l'aire et le périmètre de chaque polygone.



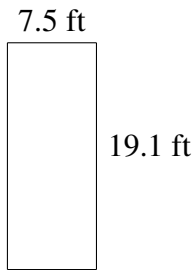
$$A = 2.375 \text{ yd}^2$$

$$P = 6.5 \text{ yd}$$



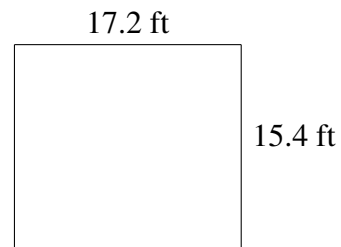
$$A = 144.06 \text{ m}^2$$

$$P = 49.8 \text{ m}$$



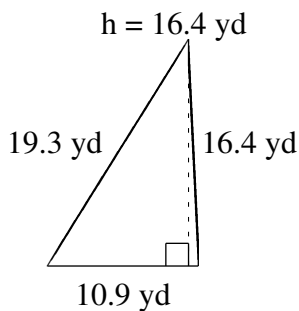
$$A = 143.25 \text{ ft}^2$$

$$P = 53.2 \text{ ft}$$



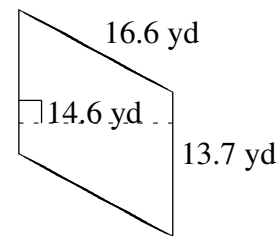
$$A = 264.88 \text{ ft}^2$$

$$P = 65.2 \text{ ft}$$



$$A = 89.38 \text{ yd}^2$$

$$P = 46.6 \text{ yd}$$



$$A = 200.02 \text{ yd}^2$$

$$P = 60.6 \text{ yd}$$