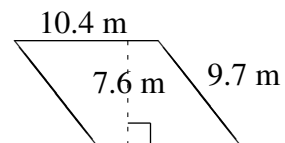
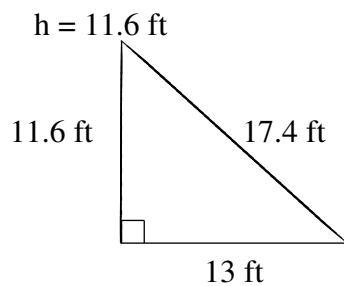
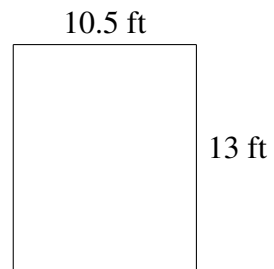
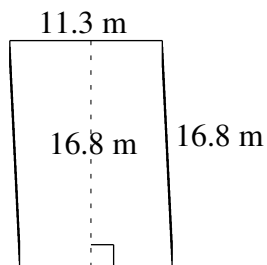
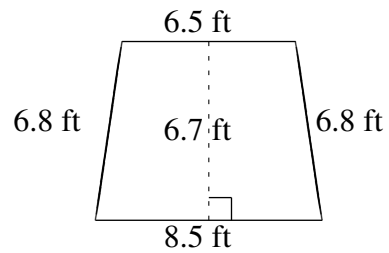
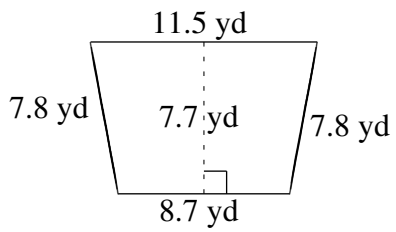


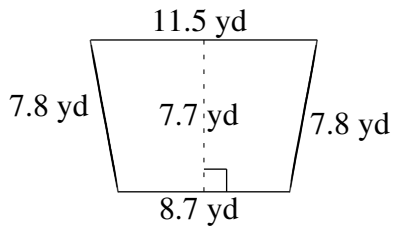
Aire et Périmètre de Polygones (B)

Trouvez l'aire et le périmètre de chaque polygone.

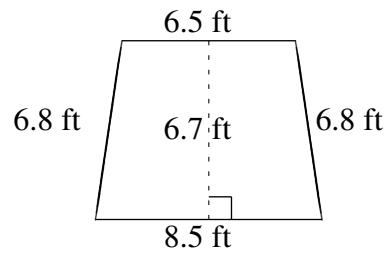


Aire et Périmètre de Polygones (B) Solutions

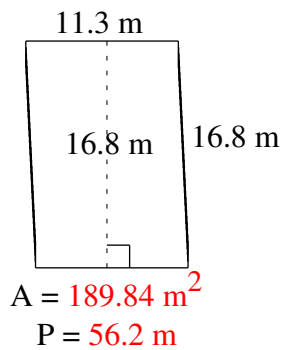
Trouvez l'aire et le périmètre de chaque polygone.



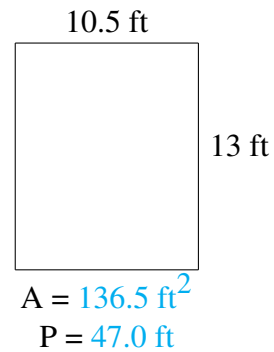
$$A = 77.77 \text{ yd}^2$$
$$P = 35.8 \text{ yd}$$



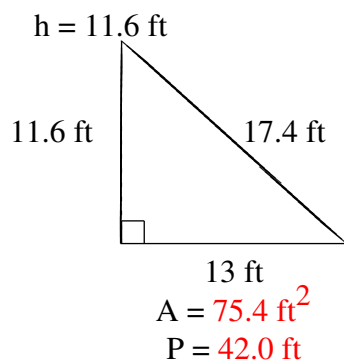
$$A = 50.25 \text{ ft}^2$$
$$P = 28.6 \text{ ft}$$



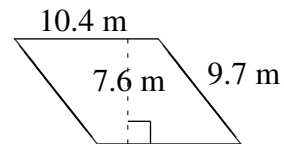
$$A = 189.84 \text{ m}^2$$
$$P = 56.2 \text{ m}$$



$$A = 136.5 \text{ ft}^2$$
$$P = 47.0 \text{ ft}$$



$$A = 75.4 \text{ ft}^2$$
$$P = 42.0 \text{ ft}$$



$$A = 79.04 \text{ m}^2$$
$$P = 40.2 \text{ m}$$