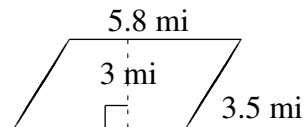
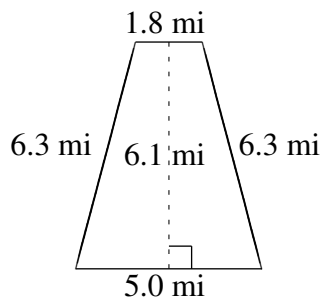
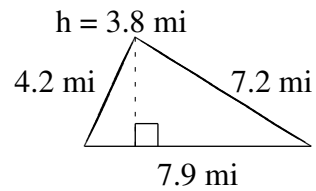
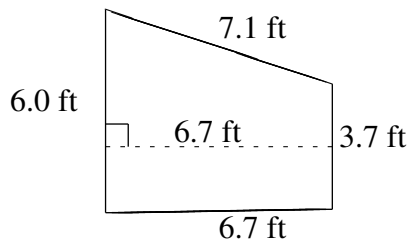
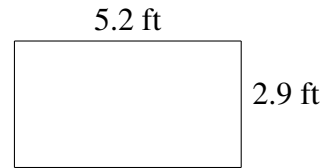
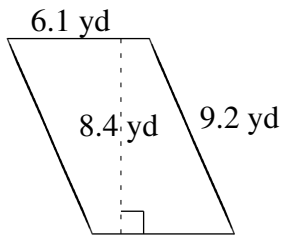


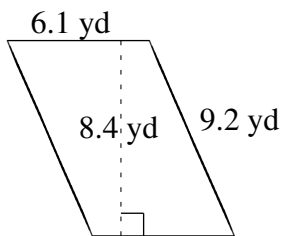
Aire et Périmètre de Polygones (A)

Trouvez l'aire et le périmètre de chaque polygone.

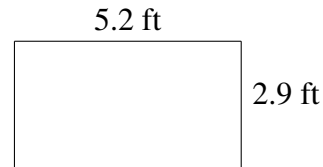


Aire et Périmètre de Polygones (A) Solutions

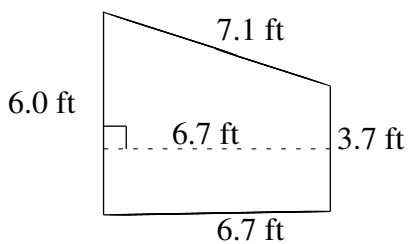
Trouvez l'aire et le périmètre de chaque polygone.



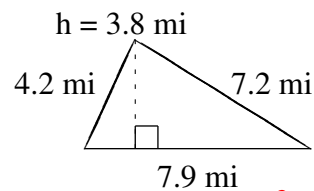
$$A = 51.24 \text{ yd}^2$$
$$P = 30.6 \text{ yd}$$



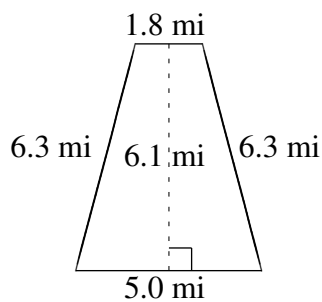
$$A = 15.08 \text{ ft}^2$$
$$P = 16.2 \text{ ft}$$



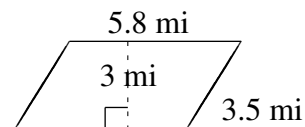
$$A = 32.495 \text{ ft}^2$$
$$P = 23.5 \text{ ft}$$



$$A = 15.01 \text{ mi}^2$$
$$P = 19.3 \text{ mi}$$



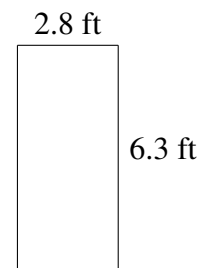
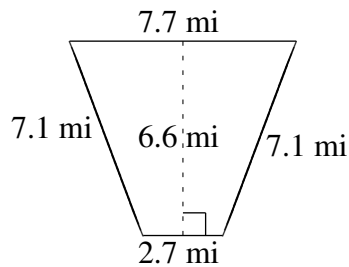
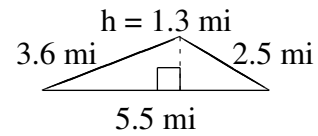
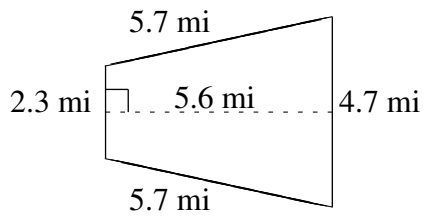
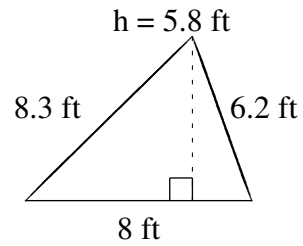
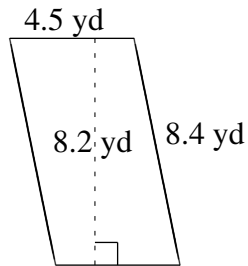
$$A = 20.74 \text{ mi}^2$$
$$P = 19.4 \text{ mi}$$



$$A = 17.4 \text{ mi}^2$$
$$P = 18.6 \text{ mi}$$

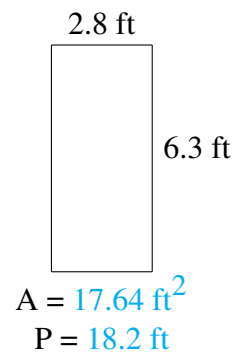
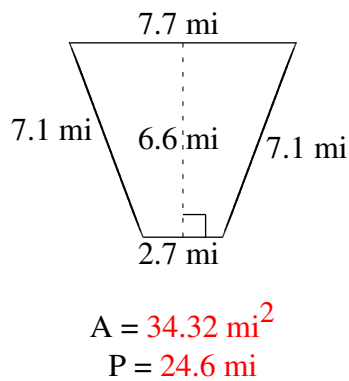
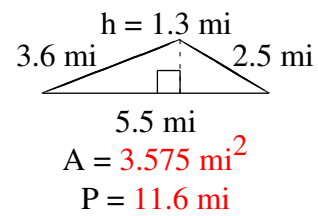
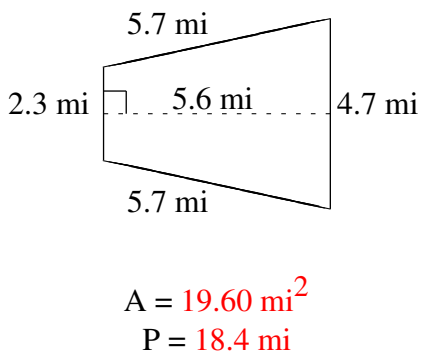
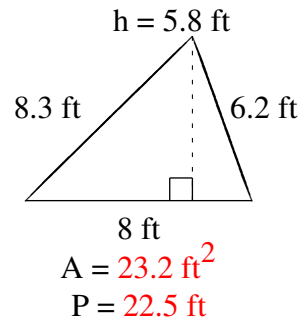
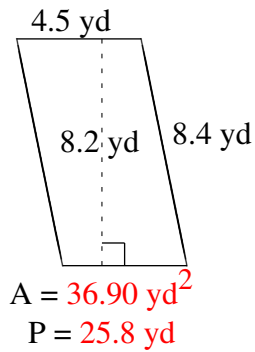
Aire et Périmètre de Polygones (B)

Trouvez l'aire et le périmètre de chaque polygone.



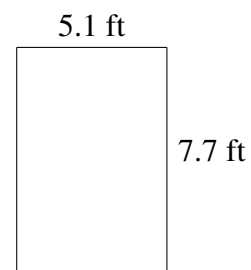
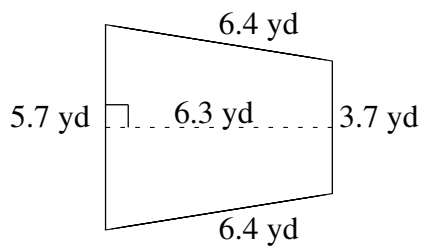
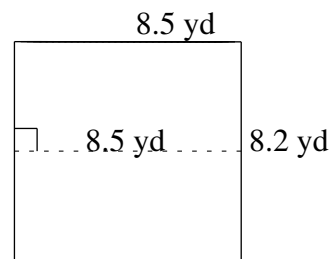
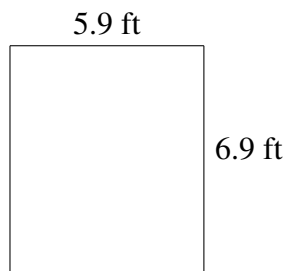
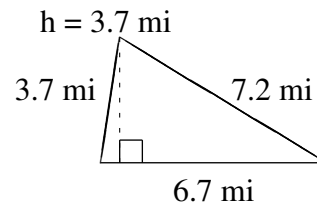
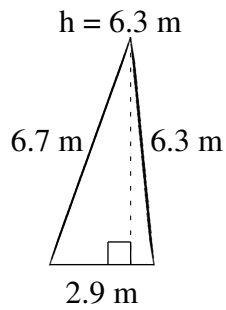
Aire et Périmètre de Polygones (B) Solutions

Trouvez l'aire et le périmètre de chaque polygone.



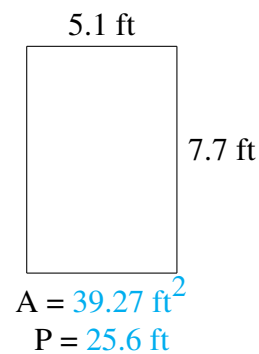
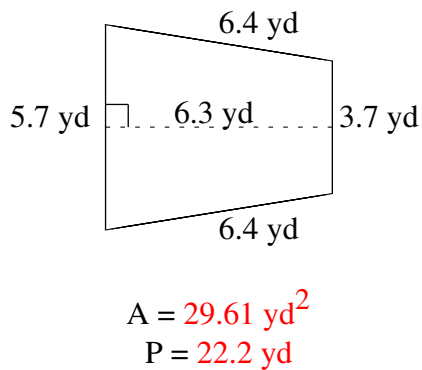
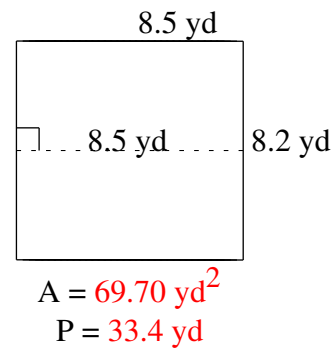
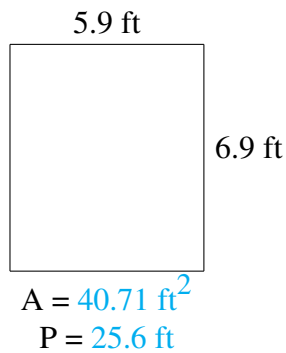
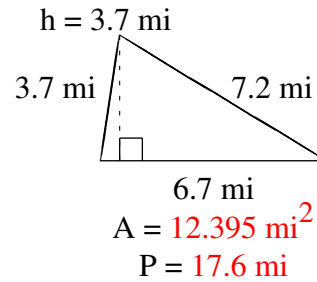
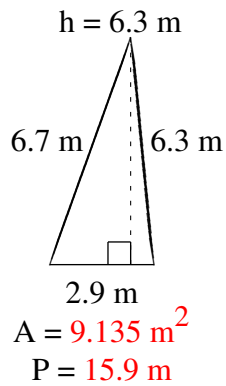
Aire et Périmètre de Polygones (C)

Trouvez l'aire et le périmètre de chaque polygone.



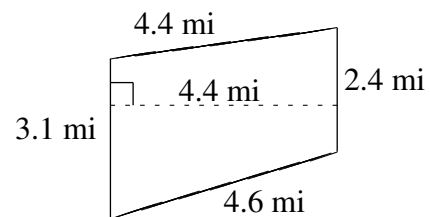
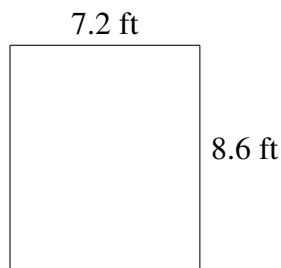
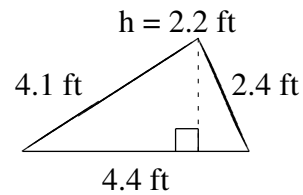
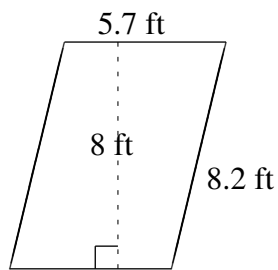
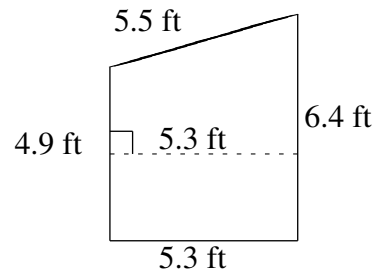
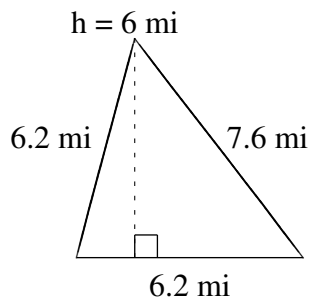
Aire et Périmètre de Polygones (C) Solutions

Trouvez l'aire et le périmètre de chaque polygone.



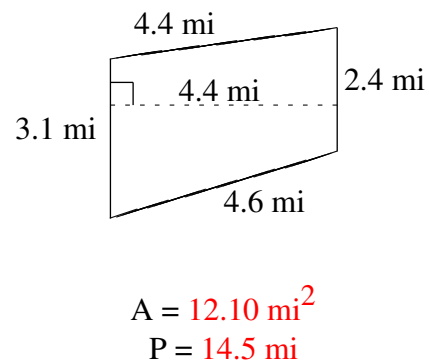
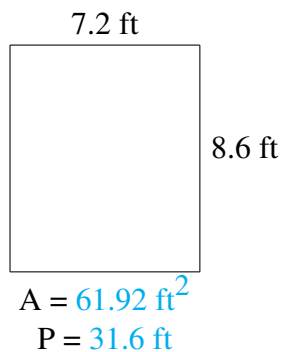
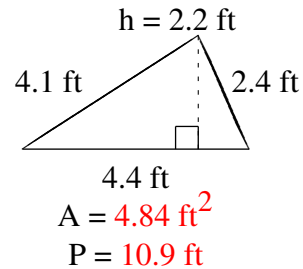
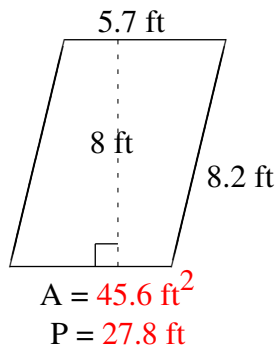
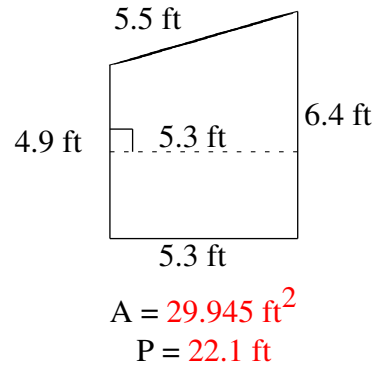
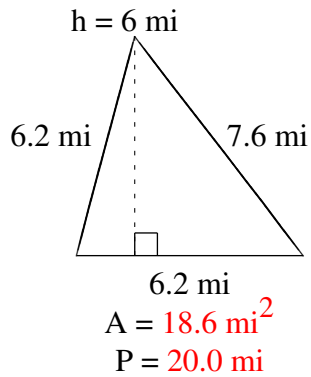
Aire et Périmètre de Polygones (D)

Trouvez l'aire et le périmètre de chaque polygone.



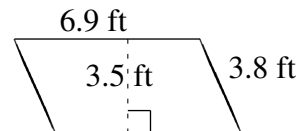
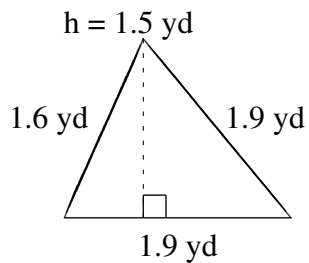
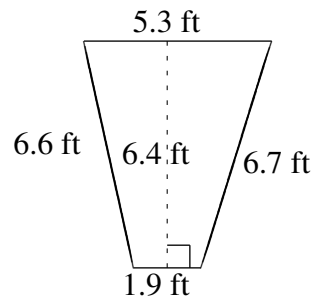
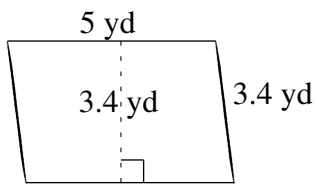
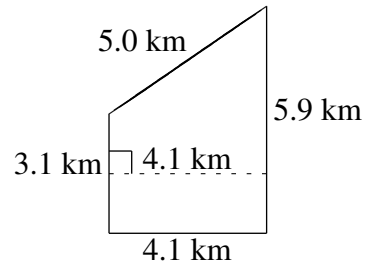
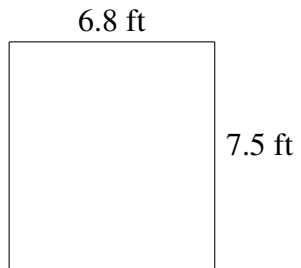
Aire et Périmètre de Polygones (D) Solutions

Trouvez l'aire et le périmètre de chaque polygone.



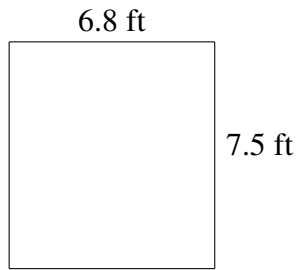
Aire et Périmètre de Polygones (E)

Trouvez l'aire et le périmètre de chaque polygone.

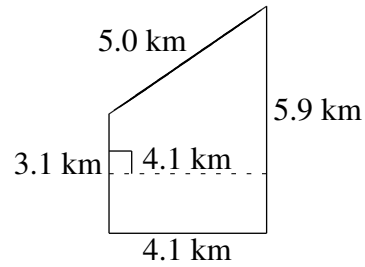


Aire et Périmètre de Polygones (E) Solutions

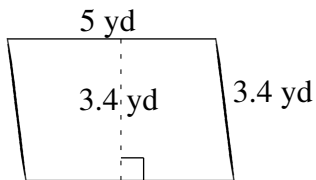
Trouvez l'aire et le périmètre de chaque polygone.



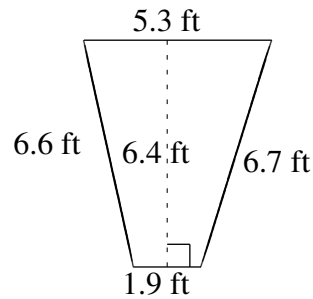
$$A = 51.00 \text{ ft}^2$$
$$P = 28.6 \text{ ft}$$



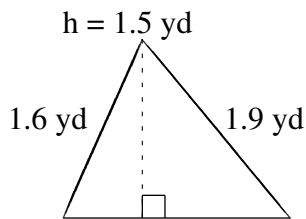
$$A = 18.45 \text{ km}^2$$
$$P = 18.1 \text{ km}$$



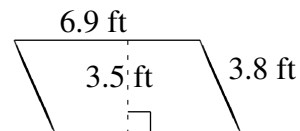
$$A = 17.0 \text{ yd}^2$$
$$P = 16.8 \text{ yd}$$



$$A = 23.04 \text{ ft}^2$$
$$P = 20.5 \text{ ft}$$



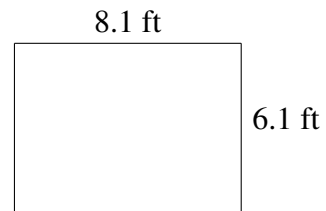
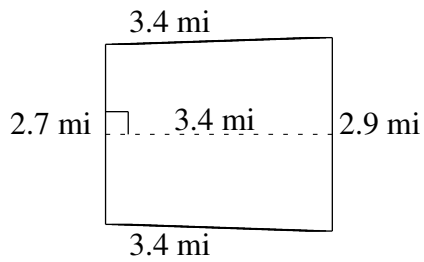
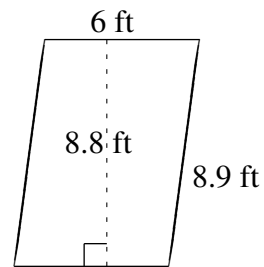
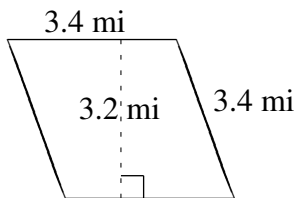

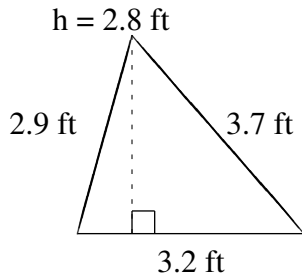
$$A = 1.425 \text{ yd}^2$$
$$P = 5.4 \text{ yd}$$



$$A = 24.15 \text{ ft}^2$$
$$P = 21.4 \text{ ft}$$

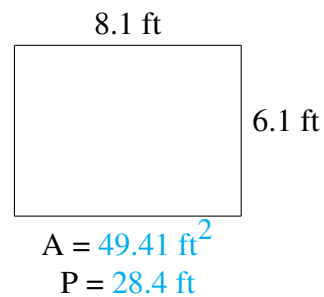
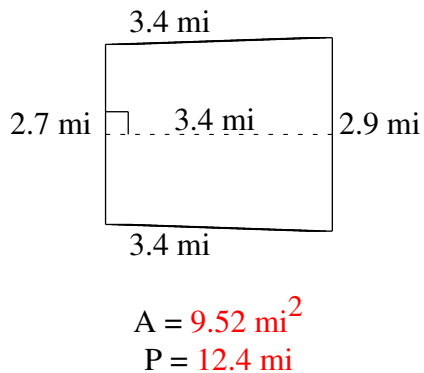
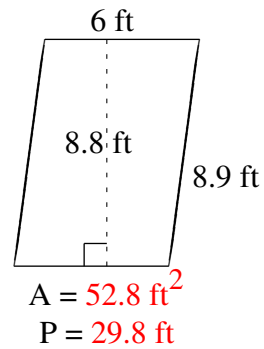
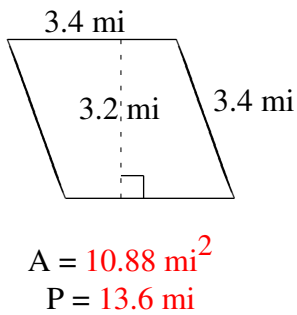
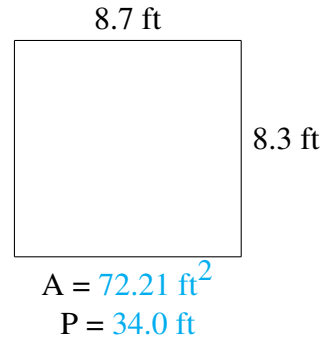
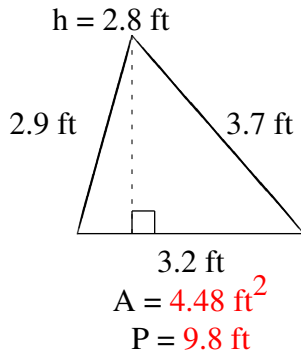
Aire et Périmètre de Polygones (F)

Trouvez l'aire et le périmètre de chaque polygone.



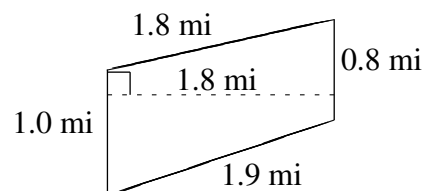
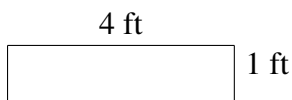
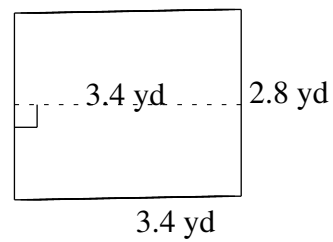
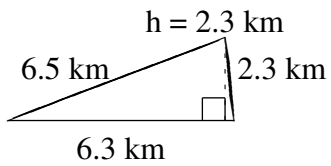
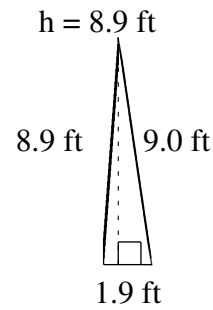
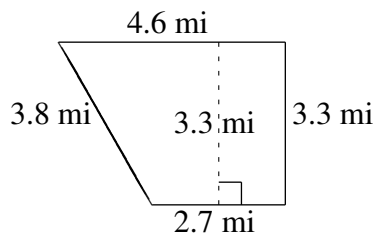
Aire et Périmètre de Polygones (F) Solutions

Trouvez l'aire et le périmètre de chaque polygone.



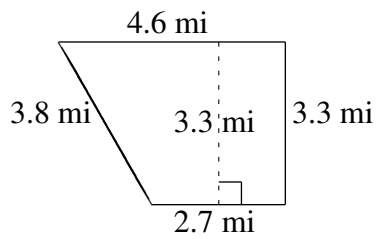
Aire et Périmètre de Polygones (G)

Trouvez l'aire et le périmètre de chaque polygone.



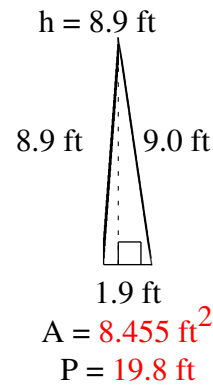
Aire et Périmètre de Polygones (G) Solutions

Trouvez l'aire et le périmètre de chaque polygone.



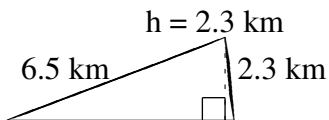
$$A = 12.045 \text{ mi}^2$$

$$P = 14.4 \text{ mi}$$



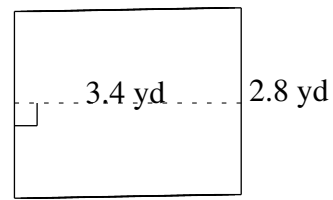
$$A = 8.455 \text{ ft}^2$$

$$P = 19.8 \text{ ft}$$



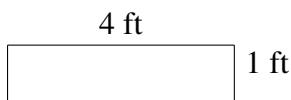
$$A = 7.245 \text{ km}^2$$

$$P = 15.1 \text{ km}$$



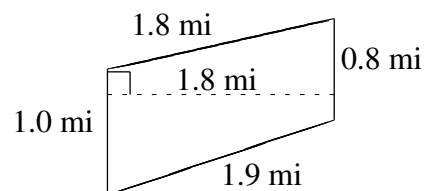
$$A = 9.52 \text{ yd}^2$$

$$P = 12.4 \text{ yd}$$



$$A = 4 \text{ ft}^2$$

$$P = 10 \text{ ft}$$

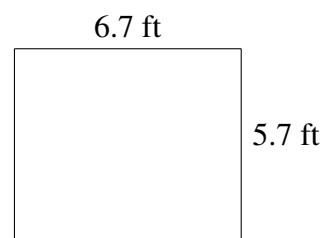
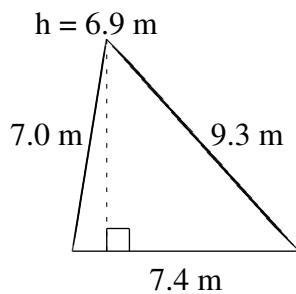
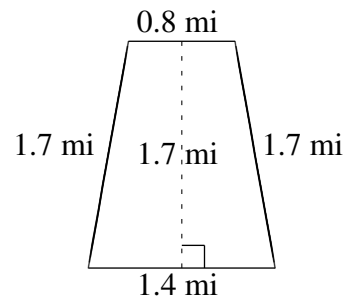
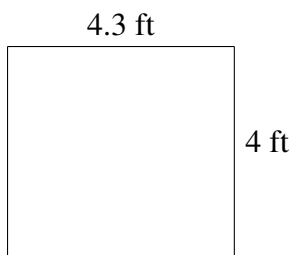
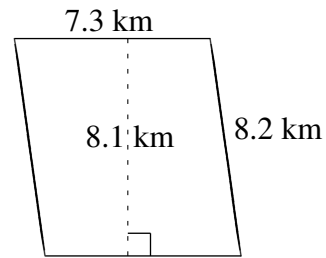
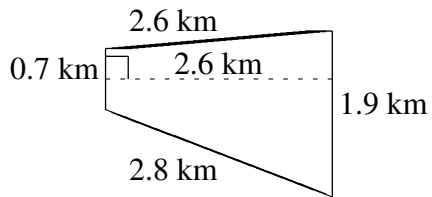


$$A = 1.62 \text{ mi}^2$$

$$P = 5.5 \text{ mi}$$

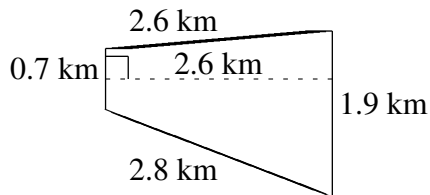
Aire et Périmètre de Polygones (H)

Trouvez l'aire et le périmètre de chaque polygone.

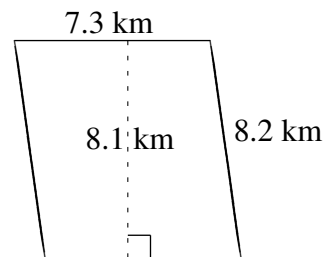


Aire et Périmètre de Polygones (H) Solutions

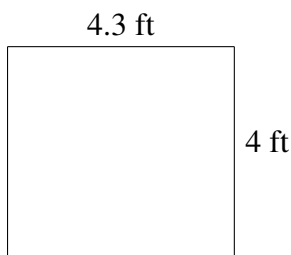
Trouvez l'aire et le périmètre de chaque polygone.



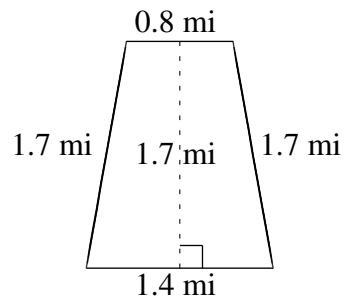
$$A = 3.38 \text{ km}^2$$
$$P = 8.0 \text{ km}$$



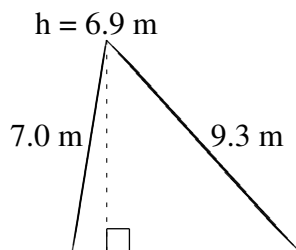
$$A = 59.13 \text{ km}^2$$
$$P = 31.0 \text{ km}$$



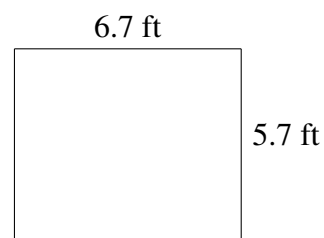
$$A = 17.2 \text{ ft}^2$$
$$P = 16.6 \text{ ft}$$



$$A = 1.87 \text{ mi}^2$$
$$P = 5.6 \text{ mi}$$



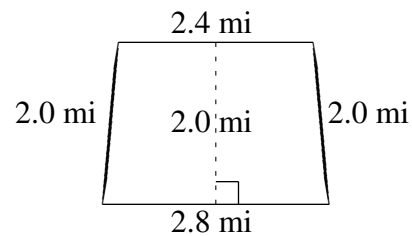
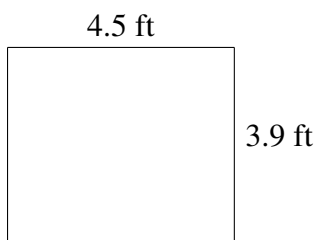
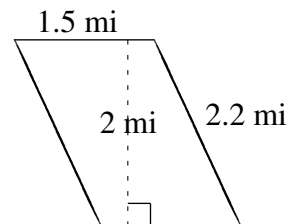
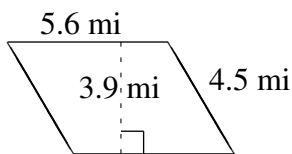
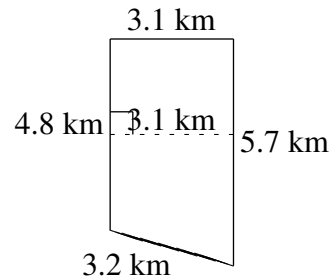
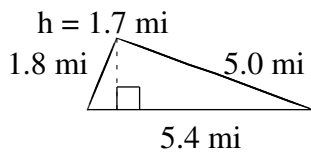
$$A = 25.53 \text{ m}^2$$
$$P = 23.7 \text{ m}$$



$$A = 38.19 \text{ ft}^2$$
$$P = 24.8 \text{ ft}$$

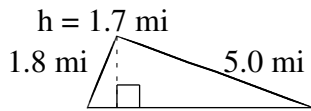
Aire et Périmètre de Polygones (I)

Trouvez l'aire et le périmètre de chaque polygone.

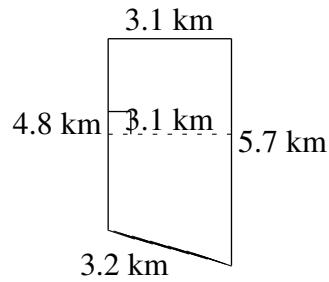


Aire et Périmètre de Polygones (I) Solutions

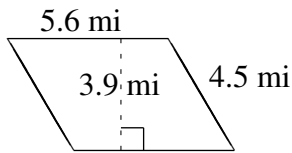
Trouvez l'aire et le périmètre de chaque polygone.



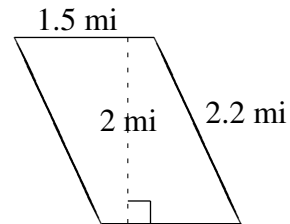
$$A = 4.59 \text{ mi}^2$$
$$P = 12.2 \text{ mi}$$



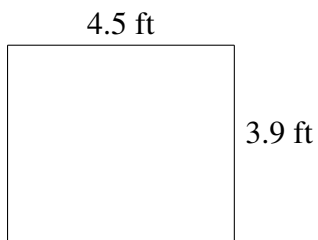
$$A = 16.275 \text{ km}^2$$
$$P = 16.8 \text{ km}$$



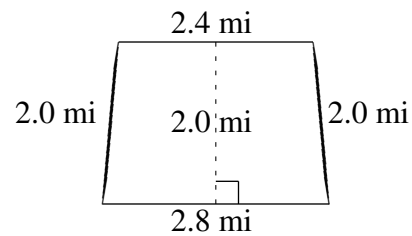
$$A = 21.84 \text{ mi}^2$$
$$P = 20.2 \text{ mi}$$



$$A = 3.0 \text{ mi}^2$$
$$P = 7.4 \text{ mi}$$



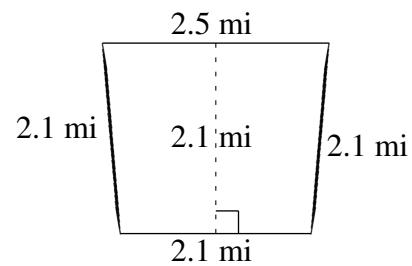
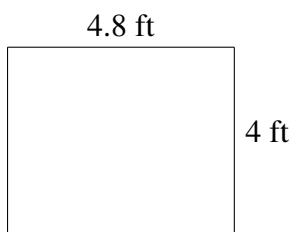
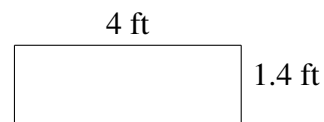
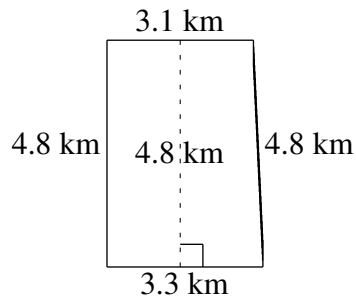
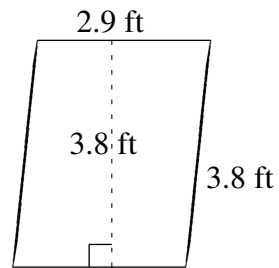
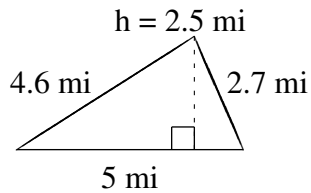
$$A = 17.55 \text{ ft}^2$$
$$P = 16.8 \text{ ft}$$



$$A = 5.20 \text{ mi}^2$$
$$P = 9.2 \text{ mi}$$

Aire et Périmètre de Polygones (J)

Trouvez l'aire et le périmètre de chaque polygone.



Aire et Périmètre de Polygones (J) Solutions

Trouvez l'aire et le périmètre de chaque polygone.

