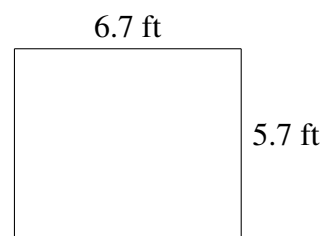
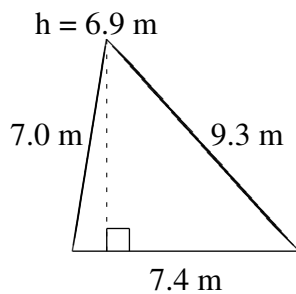
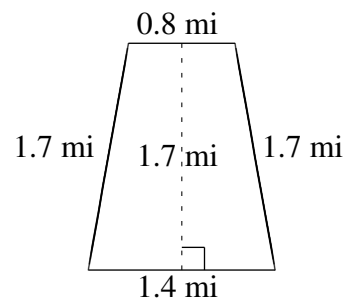
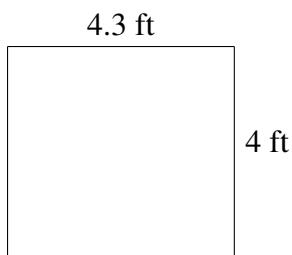
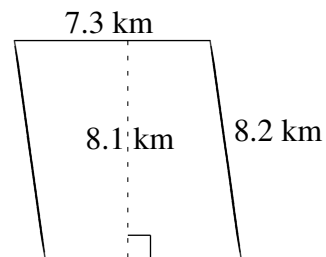
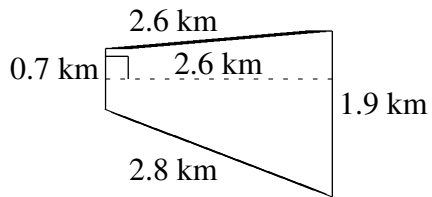


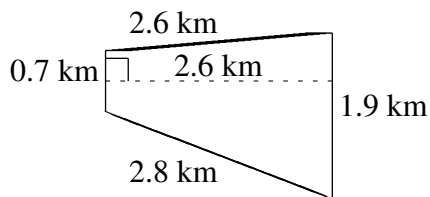
Aire et Périmètre de Polygones (H)

Trouvez l'aire et le périmètre de chaque polygone.

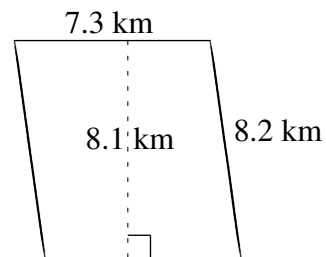


Aire et Périmètre de Polygones (H) Solutions

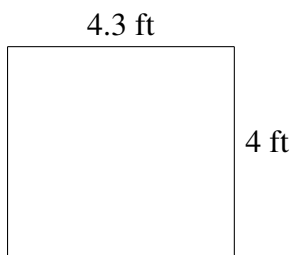
Trouvez l'aire et le périmètre de chaque polygone.



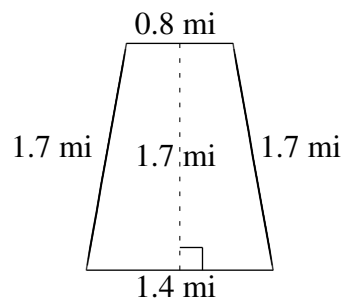
$$A = 3.38 \text{ km}^2$$
$$P = 8.0 \text{ km}$$



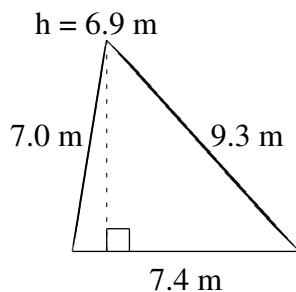
$$A = 59.13 \text{ km}^2$$
$$P = 31.0 \text{ km}$$



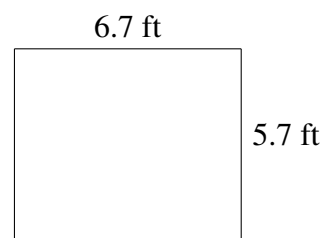
$$A = 17.2 \text{ ft}^2$$
$$P = 16.6 \text{ ft}$$



$$A = 1.87 \text{ mi}^2$$
$$P = 5.6 \text{ mi}$$



$$A = 25.53 \text{ m}^2$$
$$P = 23.7 \text{ m}$$



$$A = 38.19 \text{ ft}^2$$
$$P = 24.8 \text{ ft}$$