


# Chiffres Fondus Soustraction (E)

Nom: \_\_\_\_\_


Date: \_\_\_\_\_

Retrouve les chiffres qui ont fondu à la chaleur du soleil.


1. 
$$\begin{array}{r} 594 \\ - \quad \square 2 \square \\ \hline 2 \square 7 \end{array}$$




2. 
$$\begin{array}{r} 711 \\ - \quad \square 3 \square \\ \hline 4 \square 4 \end{array}$$




3. 
$$\begin{array}{r} \square 96 \\ - 15 \square \\ \hline 3 \square 2 \end{array}$$




4. 
$$\begin{array}{r} \square 02 \square \\ - 7 \square 2 \\ \hline \square 46 \end{array}$$




5. 
$$\begin{array}{r} \square 5 \square \square \\ - \quad \square 19 \\ \hline 875 \end{array}$$




6. 
$$\begin{array}{r} \square 299 \\ - 716 \\ \hline \square \square \square \end{array}$$




7. 
$$\begin{array}{r} 9 \square 3 \\ - 515 \\ \hline \square 9 \square \end{array}$$




8. 
$$\begin{array}{r} \square 53 \\ - 96 \\ \hline 2 \square \square \end{array}$$




9. 
$$\begin{array}{r} \square \square 6 \square \\ - 788 \\ \hline 4 \square 8 \end{array}$$




10. 
$$\begin{array}{r} 683 \\ - 4 \square 7 \\ \hline \square 7 \square \end{array}$$




11. 
$$\begin{array}{r} \square 23 \\ - 284 \\ \hline 5 \square \square \end{array}$$




12. 
$$\begin{array}{r} \square 67 \\ - 50 \\ \hline 6 \square \square \end{array}$$




13. 
$$\begin{array}{r} 627 \\ - 1 \square 7 \\ \hline \square 1 \square \end{array}$$




14. 
$$\begin{array}{r} \square \square \square 2 \\ - 741 \\ \hline 71 \square \end{array}$$




15. 
$$\begin{array}{r} 55 \square \\ - 206 \\ \hline \square \square 1 \end{array}$$




16. 
$$\begin{array}{r} \square \square 2 \square \\ - 842 \\ \hline 2 \square 8 \end{array}$$




17. 
$$\begin{array}{r} \square 29 \\ - 6 \square \square \\ \hline 143 \end{array}$$




18. 
$$\begin{array}{r} 978 \\ - 2 \square \square \\ \hline \square 24 \end{array}$$



19. 
$$\begin{array}{r} 436 \\ - 29 \square \\ \hline \square \square 9 \end{array}$$



20. 
$$\begin{array}{r} 600 \\ - \square 41 \\ \hline 2 \square \square \end{array}$$




# Chiffres Fondus Soustraction (E) Réponses

Nom: \_\_\_\_\_


Date: \_\_\_\_\_

Retrouve les chiffres qui ont fondu à la chaleur du soleil.


$$\begin{array}{r} 1. \quad 594 \\ - \quad 327 \\ \hline 267 \end{array}$$




$$\begin{array}{r} 2. \quad 711 \\ - \quad 237 \\ \hline 474 \end{array}$$




$$\begin{array}{r} 3. \quad 496 \\ - \quad 154 \\ \hline 342 \end{array}$$




$$\begin{array}{r} 4. \quad 1028 \\ - \quad 782 \\ \hline 246 \end{array}$$




$$\begin{array}{r} 5. \quad 1594 \\ - \quad 719 \\ \hline 875 \end{array}$$




$$\begin{array}{r} 6. \quad 1299 \\ - \quad 716 \\ \hline 583 \end{array}$$




$$\begin{array}{r} 7. \quad 913 \\ - \quad 515 \\ \hline 398 \end{array}$$




$$\begin{array}{r} 8. \quad 353 \\ - \quad 96 \\ \hline 257 \end{array}$$




$$\begin{array}{r} 9. \quad 1266 \\ - \quad 788 \\ \hline 478 \end{array}$$




$$\begin{array}{r} 10. \quad 683 \\ - \quad 407 \\ \hline 276 \end{array}$$




$$\begin{array}{r} 11. \quad 823 \\ - \quad 284 \\ \hline 539 \end{array}$$




$$\begin{array}{r} 12. \quad 667 \\ - \quad 50 \\ \hline 617 \end{array}$$




$$\begin{array}{r} 13. \quad 627 \\ - \quad 117 \\ \hline 510 \end{array}$$




$$\begin{array}{r} 14. \quad 1452 \\ - \quad 741 \\ \hline 711 \end{array}$$




$$\begin{array}{r} 15. \quad 557 \\ - \quad 206 \\ \hline 351 \end{array}$$




$$\begin{array}{r} 16. \quad 1120 \\ - \quad 842 \\ \hline 278 \end{array}$$




$$\begin{array}{r} 17. \quad 829 \\ - \quad 686 \\ \hline 143 \end{array}$$



$$\begin{array}{r} 18. \quad 978 \\ - \quad 254 \\ \hline 724 \end{array}$$



$$\begin{array}{r} 19. \quad 436 \\ - \quad 297 \\ \hline 139 \end{array}$$



$$\begin{array}{r} 20. \quad 600 \\ - \quad 341 \\ \hline 259 \end{array}$$

