


Chiffres Fondus Soustraction (H)

Nom: _____


Date: _____

Retrouve les chiffres qui ont fondu à la chaleur du soleil.


1.
$$\begin{array}{r} \square 2 \square 4 0 \\ - \square 2 \square 9 \\ \hline 4 4 9 \square \end{array}$$




2.
$$\begin{array}{r} \square 0 1 \square \\ - 1 5 9 9 \\ \hline 4 \square \square 5 \end{array}$$




3.
$$\begin{array}{r} 9 7 5 1 \\ - 2 \square \square 3 \\ \hline \square 6 0 \square \end{array}$$




4.
$$\begin{array}{r} \square \square 6 3 3 \\ - 8 6 \square \square \\ \hline 8 \square 9 9 \end{array}$$




5.
$$\begin{array}{r} \square \square \square 0 9 \\ - 9 5 1 \square \\ \hline 4 9 \square 1 \end{array}$$




6.
$$\begin{array}{r} \square 1 \square 0 \square \\ - \square 1 3 0 \\ \hline 7 8 \square 9 \end{array}$$




7.
$$\begin{array}{r} 9 3 1 4 \\ - 2 0 \square \square \\ \hline \square \square 3 4 \end{array}$$




8.
$$\begin{array}{r} \square 5 3 4 \square \\ - \square 3 9 1 \\ \hline 7 \square \square 8 \end{array}$$




9.
$$\begin{array}{r} \square \square \square \square \square \\ - 8 9 3 8 \\ \hline 1 4 8 5 \end{array}$$




10.
$$\begin{array}{r} \square 8 \square \square \\ - 2 \square 6 1 \\ \hline 3 1 6 4 \end{array}$$




11.
$$\begin{array}{r} \square \square 3 3 7 \\ - 3 \square \square 1 \\ \hline 9 7 0 \square \end{array}$$




12.
$$\begin{array}{r} \square 1 7 \square 9 \\ - 6 5 7 \square \\ \hline \square \square 5 6 \end{array}$$




13.
$$\begin{array}{r} \square \square 8 9 1 \\ - 3 8 \square 7 \\ \hline 8 \square 3 \square \end{array}$$




14.
$$\begin{array}{r} \square \square 5 0 7 \\ - 9 5 1 \square \\ \hline 5 \square \square 0 \end{array}$$




15.
$$\begin{array}{r} 7 0 9 \square \\ - \square \square \square 4 \\ \hline 2 3 4 1 \end{array}$$




16.
$$\begin{array}{r} \square 8 1 5 \\ - 3 1 6 0 \\ \hline 1 \square \square \square \end{array}$$




17.
$$\begin{array}{r} 8 \square 9 \square \\ - \square 2 \square 7 \\ \hline 4 5 3 5 \end{array}$$



18.
$$\begin{array}{r} \square 1 \square 7 \\ - 5 7 0 \square \\ \hline 3 \square 4 0 \end{array}$$



19.
$$\begin{array}{r} \square 1 1 6 \\ - 2 8 2 0 \\ \hline 3 \square \square \square \end{array}$$



20.
$$\begin{array}{r} \square \square \square 0 \square \\ - 5 4 \square 2 \\ \hline 6 0 8 1 \end{array}$$

