


Chiffres Fondus Soustraction (E)

Nom: _____


Date: _____

Retrouve les chiffres qui ont fondu à la chaleur du soleil.


1.
$$\begin{array}{r} \square 0 7 9 4 \\ - \square \square \square 8 \\ \hline 7 4 4 \square \end{array}$$




2.
$$\begin{array}{r} \square 0 6 2 \\ - 2 \square \square \square \\ \hline 3 6 2 0 \end{array}$$




3.
$$\begin{array}{r} 6 \square 4 7 \\ - \square 8 \square 1 \\ \hline 1 9 0 \square \end{array}$$




4.
$$\begin{array}{r} \square 8 \square \square \\ - 4 0 9 8 \\ \hline 1 \square 4 1 \end{array}$$




5.
$$\begin{array}{r} \square 2 \square \square 9 \\ - 3 9 8 \square \\ \hline \square 8 6 4 \end{array}$$




6.
$$\begin{array}{r} 7 \square 8 0 \\ - \square 0 0 \square \\ \hline 1 6 \square 6 \end{array}$$




7.
$$\begin{array}{r} \square 8 1 2 9 \\ - \square 9 \square \square \\ \hline 8 \square 0 0 \end{array}$$




8.
$$\begin{array}{r} \square 0 2 \square 1 \\ - \square 0 6 \square \\ \hline 4 \square 4 6 \end{array}$$




9.
$$\begin{array}{r} 8 8 4 \square \\ - 3 1 2 5 \\ \hline \square \square \square 8 \end{array}$$




10.
$$\begin{array}{r} 8 \square 9 2 \\ - 2 1 \square 9 \\ \hline \square 7 0 \square \end{array}$$




11.
$$\begin{array}{r} \square 0 5 7 \square \\ - 8 3 \square 9 \\ \hline \square \square 6 2 \end{array}$$




12.
$$\begin{array}{r} \square 2 \square 7 1 \\ - 7 2 \square \square \\ \hline \square 6 3 1 \end{array}$$




13.
$$\begin{array}{r} \square 3 1 3 2 \\ - \square \square 2 6 \\ \hline 7 5 \square \square \end{array}$$




14.
$$\begin{array}{r} \square 5 7 3 4 \\ - 6 4 4 \square \\ \hline \square \square \square 9 \end{array}$$




15.
$$\begin{array}{r} 3 6 2 2 \\ - \square \square 0 \square \\ \hline 1 6 \square 0 \end{array}$$




16.
$$\begin{array}{r} 7 0 3 9 \\ - \square \square \square \square \\ \hline 1 8 9 8 \end{array}$$




17.
$$\begin{array}{r} \square 1 0 1 5 \\ - 3 7 7 \square \\ \hline \square \square \square 8 \end{array}$$




18.
$$\begin{array}{r} \square 8 \square 2 \\ - 3 1 7 \square \\ \hline 4 \square 3 4 \end{array}$$



19.
$$\begin{array}{r} \square 2 2 7 \square \\ - \square 1 \square 9 \\ \hline 7 \square 0 5 \end{array}$$



20.
$$\begin{array}{r} \square 6 0 3 \square \\ - 7 2 7 4 \\ \hline \square \square \square 0 \end{array}$$




Chiffres Fondus Soustraction (E) Réponses

Nom: _____


Date: _____

Retrouve les chiffres qui ont fondu à la chaleur du soleil.


1.
$$\begin{array}{r} 10794 \\ - 3348 \\ \hline 7446 \end{array}$$




2.
$$\begin{array}{r} 6062 \\ - 2442 \\ \hline 3620 \end{array}$$




3.
$$\begin{array}{r} 6747 \\ - 4841 \\ \hline 1906 \end{array}$$




4.
$$\begin{array}{r} 5839 \\ - 4098 \\ \hline 1741 \end{array}$$




5.
$$\begin{array}{r} 12849 \\ - 3985 \\ \hline 8864 \end{array}$$




6.
$$\begin{array}{r} 7680 \\ - 6004 \\ \hline 1676 \end{array}$$




7.
$$\begin{array}{r} 18129 \\ - 9929 \\ \hline 8200 \end{array}$$




8.
$$\begin{array}{r} 10211 \\ - 6065 \\ \hline 4146 \end{array}$$




9.
$$\begin{array}{r} 8843 \\ - 3125 \\ \hline 5718 \end{array}$$




10.
$$\begin{array}{r} 8892 \\ - 2189 \\ \hline 6703 \end{array}$$




11.
$$\begin{array}{r} 10571 \\ - 8309 \\ \hline 2262 \end{array}$$




12.
$$\begin{array}{r} 12871 \\ - 7240 \\ \hline 5631 \end{array}$$




13.
$$\begin{array}{r} 13132 \\ - 5626 \\ \hline 7506 \end{array}$$




14.
$$\begin{array}{r} 15734 \\ - 6445 \\ \hline 9289 \end{array}$$




15.
$$\begin{array}{r} 3622 \\ - 2002 \\ \hline 1620 \end{array}$$




16.
$$\begin{array}{r} 7039 \\ - 5141 \\ \hline 1898 \end{array}$$




17.
$$\begin{array}{r} 11015 \\ - 3777 \\ \hline 7238 \end{array}$$



18.
$$\begin{array}{r} 7812 \\ - 3178 \\ \hline 4634 \end{array}$$



19.
$$\begin{array}{r} 12274 \\ - 5169 \\ \hline 7105 \end{array}$$



20.
$$\begin{array}{r} 16034 \\ - 7274 \\ \hline 8760 \end{array}$$

