


# Chiffres Fondus Soustraction (A)

Nom: \_\_\_\_\_


Date: \_\_\_\_\_

Retrouve les chiffres qui ont fondu à la chaleur du soleil.


1. 
$$\begin{array}{r} \square 9 4 8 \\ - 1 9 7 \square \\ \hline 2 \square \square 7 \end{array}$$




2. 
$$\begin{array}{r} \square 8 8 8 \square \\ - 9 \square \square 5 \\ \hline \square 3 5 2 \end{array}$$




3. 
$$\begin{array}{r} 8 \square \square 9 \\ - 6 3 5 \square \\ \hline \square 6 5 2 \end{array}$$




4. 
$$\begin{array}{r} 8 4 8 \square \\ - 6 \square 3 4 \\ \hline \square 0 \square 5 \end{array}$$




5. 
$$\begin{array}{r} \square \square 0 2 4 \\ - 9 \square \square \square \\ \hline 2 7 9 4 \end{array}$$




6. 
$$\begin{array}{r} \square 0 4 8 \square \\ - 7 9 8 3 \\ \hline \square \square \square 3 \end{array}$$




7. 
$$\begin{array}{r} 3 3 5 1 \\ - \square \square \square \square \\ \hline 1 0 9 3 \end{array}$$




8. 
$$\begin{array}{r} \square \square 5 0 6 \\ - 8 \square 8 6 \\ \hline 6 7 \square \square \end{array}$$




9. 
$$\begin{array}{r} 7 7 \square 7 \\ - 6 3 4 0 \\ \hline \square \square 4 \square \end{array}$$




10. 
$$\begin{array}{r} \square 5 6 5 \\ - 8 3 \square \square \\ \hline 1 \square 0 2 \end{array}$$




11. 
$$\begin{array}{r} \square 3 \square \square 7 \\ - \square 3 2 5 \\ \hline 7 6 4 \square \end{array}$$




12. 
$$\begin{array}{r} \square 1 \square \square 4 \\ - 3 9 1 1 \\ \hline \square 3 4 \square \end{array}$$




13. 
$$\begin{array}{r} 8 3 8 0 \\ - 1 2 8 1 \\ \hline \square \square \square \square \end{array}$$




14. 
$$\begin{array}{r} 9 4 6 8 \\ - 4 8 3 \square \\ \hline \square \square \square 2 \end{array}$$




15. 
$$\begin{array}{r} \square \square 0 1 \\ - 3 6 \square 5 \\ \hline 4 0 0 \square \end{array}$$




16. 
$$\begin{array}{r} \square \square 7 7 4 \\ - 2 8 \square \square \\ \hline 7 \square 7 5 \end{array}$$




17. 
$$\begin{array}{r} \square \square 4 2 \\ - 1 8 6 9 \\ \hline 3 4 \square \square \end{array}$$




18. 
$$\begin{array}{r} \square \square 8 1 7 \\ - 7 \square 3 \square \\ \hline 4 3 \square 1 \end{array}$$



19. 
$$\begin{array}{r} \square 0 9 2 \square \\ - \square 6 \square 8 \\ \hline 7 \square 0 3 \end{array}$$



20. 
$$\begin{array}{r} \square 6 9 \square \\ - 1 4 6 8 \\ \hline 8 \square \square 9 \end{array}$$




# Chiffres Fondus Soustraction (A) Réponses

Nom: \_\_\_\_\_


Date: \_\_\_\_\_

Retrouve les chiffres qui ont fondu à la chaleur du soleil.


1. 
$$\begin{array}{r} 4948 \\ - 1971 \\ \hline 2977 \end{array}$$




2. 
$$\begin{array}{r} 18887 \\ - 9535 \\ \hline 9352 \end{array}$$




3. 
$$\begin{array}{r} 8009 \\ - 6357 \\ \hline 1652 \end{array}$$




4. 
$$\begin{array}{r} 8489 \\ - 6434 \\ \hline 2055 \end{array}$$




5. 
$$\begin{array}{r} 12024 \\ - 9230 \\ \hline 2794 \end{array}$$




6. 
$$\begin{array}{r} 10486 \\ - 7983 \\ \hline 2503 \end{array}$$




7. 
$$\begin{array}{r} 3351 \\ - 2258 \\ \hline 1093 \end{array}$$




8. 
$$\begin{array}{r} 15506 \\ - 8786 \\ \hline 6720 \end{array}$$




9. 
$$\begin{array}{r} 7787 \\ - 6340 \\ \hline 1447 \end{array}$$




10. 
$$\begin{array}{r} 9565 \\ - 8363 \\ \hline 1202 \end{array}$$




11. 
$$\begin{array}{r} 13967 \\ - 6325 \\ \hline 7642 \end{array}$$




12. 
$$\begin{array}{r} 11254 \\ - 3911 \\ \hline 7343 \end{array}$$




13. 
$$\begin{array}{r} 8380 \\ - 1281 \\ \hline 7099 \end{array}$$




14. 
$$\begin{array}{r} 9468 \\ - 4836 \\ \hline 4632 \end{array}$$




15. 
$$\begin{array}{r} 7701 \\ - 3695 \\ \hline 4006 \end{array}$$




16. 
$$\begin{array}{r} 10774 \\ - 2899 \\ \hline 7875 \end{array}$$




17. 
$$\begin{array}{r} 5342 \\ - 1869 \\ \hline 3473 \end{array}$$



18. 
$$\begin{array}{r} 11817 \\ - 7436 \\ \hline 4381 \end{array}$$



19. 
$$\begin{array}{r} 10921 \\ - 3618 \\ \hline 7303 \end{array}$$



20. 
$$\begin{array}{r} 9697 \\ - 1468 \\ \hline 8229 \end{array}$$

