


# Chiffres Fondus Pour tous les goûts (E)

Nom: \_\_\_\_\_


Date: \_\_\_\_\_

Retrouve les chiffres qui ont fondu à la chaleur du soleil.


1. 
$$\begin{array}{r} \square\square\square 9 \\ - 587 \\ \hline 73\square \end{array}$$




2. 
$$\begin{array}{r} 12 \\ \square \overline{) 84} \end{array}$$




3. 
$$\begin{array}{r} 9\square\square \\ + \square 87 \\ \hline \square 452 \end{array}$$




4. 
$$\begin{array}{r} \square 1\square \\ + 217 \\ \hline 3\square 6 \end{array}$$




5. 
$$\begin{array}{r} 645 \\ - 1\square\square \\ \hline \square 85 \end{array}$$




6. 
$$6 \overline{) \square 42}$$




7. 
$$\begin{array}{r} \square 47 \\ - 8\square\square \\ \hline 60 \end{array}$$




8. 
$$\begin{array}{r} 4\square\square \\ + 80 \\ \hline \square 01 \end{array}$$




9. 
$$\begin{array}{r} \square \\ \times 10 \\ \hline 60 \end{array}$$




10. 
$$\begin{array}{r} 1\square \\ \times 10 \\ \hline \square 10 \end{array}$$




11. 
$$\begin{array}{r} \square 122 \\ - \square\square\square \\ \hline 792 \end{array}$$




12. 
$$\begin{array}{r} 4 \\ \times 1\square \\ \hline 40 \end{array}$$




13. 
$$8 \overline{) \square 56}$$




14. 
$$\begin{array}{r} \square \\ \times 8 \\ \hline 64 \end{array}$$




15. 
$$\begin{array}{r} \square 54 \\ + 5\square\square \\ \hline \square 520 \end{array}$$




16. 
$$\begin{array}{r} 7 \\ \times 1\square \\ \hline 70 \end{array}$$




17. 
$$\begin{array}{r} 59\square \\ - \square 2 \\ \hline \square 99 \end{array}$$



18. 
$$3 \overline{) 2\square}$$



19. 
$$\begin{array}{r} 96 \\ + \square 24 \\ \hline 5\square\square \end{array}$$



20. 
$$10 \overline{) 4\square}$$

