


Chiffres Fondus Pour tous les goûts (D)

Nom: _____


Date: _____

Retrouve les chiffres qui ont fondu à la chaleur du soleil.


1.
$$\begin{array}{r} 3 \\ \times \square \\ \hline 12 \end{array}$$




2.
$$\begin{array}{r} 3 \\ \square \overline{) 6} \end{array}$$




3.
$$\begin{array}{r} 7 \square \square \\ + 640 \\ \hline \square \square 77 \end{array}$$




4.
$$\begin{array}{r} \square \square 5 \square \\ - 6 \square 5 \\ \hline 365 \end{array}$$




5.
$$\begin{array}{r} 6 \\ \times \square \\ \hline 24 \end{array}$$




6.
$$\begin{array}{r} \square 9 \square \\ - \square \square 0 \\ \hline 227 \end{array}$$




7.
$$\begin{array}{r} \square \\ 12 \overline{) 36} \end{array}$$




8.
$$\begin{array}{r} \square 2 \square \square \\ - \square 20 \\ \hline 803 \end{array}$$




9.
$$\begin{array}{r} 7 \\ \square \overline{) 49} \end{array}$$




10.
$$\begin{array}{r} 46 \square \\ + \square \square 3 \\ \hline 854 \end{array}$$




11.
$$\begin{array}{r} 403 \\ + \square \square 1 \\ \hline 58 \square \end{array}$$




12.
$$\begin{array}{r} 7 \\ \times 1 \square \\ \hline 70 \end{array}$$




13.
$$\begin{array}{r} 595 \\ - \square 7 \square \\ \hline 4 \square 7 \end{array}$$




14.
$$\begin{array}{r} 8 \\ \times \square \\ \hline 48 \end{array}$$




15.
$$\begin{array}{r} 10 \\ \square \overline{) 30} \end{array}$$




16.
$$\begin{array}{r} 9 \\ \times \square \\ \hline 18 \end{array}$$




17.
$$\begin{array}{r} 9 \\ \square \overline{) 72} \end{array}$$



18.
$$\begin{array}{r} 98 \square \\ + 9 \square 6 \\ \hline \square \square 82 \end{array}$$



19.
$$\begin{array}{r} \square \square \square 5 \\ - 426 \\ \hline 89 \square \end{array}$$



20.
$$\begin{array}{r} \square 2 \\ + 77 \square \\ \hline \square 51 \end{array}$$

