


Chiffres Fondus Pour tous les goûts (B)

Nom: _____


Date: _____

Retrouve les chiffres qui ont fondu à la chaleur du soleil.


1.
$$\begin{array}{r} 5 \square 5 \\ + 127 \\ \hline \square 0 \square \end{array}$$




2.
$$\begin{array}{r} 96\square \\ + \square 65 \\ \hline \square 4 \square 3 \end{array}$$




3.
$$\begin{array}{r} 3\square\square \\ + 525 \\ \hline \square 07 \end{array}$$




4.
$$\begin{array}{r} \square 33 \\ + 2\square 7 \\ \hline 94\square \end{array}$$




5.
$$\begin{array}{r} 70\square \\ - \square\square 3 \\ \hline 229 \end{array}$$




6.
$$\begin{array}{r} \square \\ \times 4 \\ \hline 12 \end{array}$$




7.
$$\begin{array}{r} \square \\ \times 4 \\ \hline 12 \end{array}$$




8.
$$\begin{array}{r} 937 \\ - \square 2 \\ \hline \square 8 \square \end{array}$$




9.
$$\begin{array}{r} \square 1 \square \\ - 709 \\ \hline 2\square 6 \end{array}$$




10.
$$\begin{array}{r} 11 \\ 5 \overline{) 5\square} \end{array}$$




11.
$$\begin{array}{r} \square \\ \times 6 \\ \hline 54 \end{array}$$




12.
$$\begin{array}{r} 9\square 8 \\ + \square 02 \\ \hline \square 79\square \end{array}$$




13.
$$\begin{array}{r} 357 \\ - 48 \\ \hline \square\square\square \end{array}$$




14.
$$\begin{array}{r} 9 \\ 11 \overline{) 9\square} \end{array}$$




15.
$$\begin{array}{r} 11 \\ \square \overline{) 22} \end{array}$$




16.
$$\begin{array}{r} \square \\ \times 10 \\ \hline 80 \end{array}$$




17.
$$\begin{array}{r} 11 \\ \times \square \\ \hline 88 \end{array}$$



18.
$$\begin{array}{r} 12 \\ 8 \overline{) 9\square} \end{array}$$



19.
$$\begin{array}{r} 8 \\ 6 \overline{) 4\square} \end{array}$$



20.
$$\begin{array}{r} \square 437 \\ - 55\square \\ \hline \square\square 9 \end{array}$$

