


Chiffres Fondus Pour tous les goûts (I)

Nom: _____


Date: _____

Retrouve les chiffres qui ont fondu à la chaleur du soleil.


1.
$$\begin{array}{r} 62 \\ \times 43 \\ \hline 2 \square 6 \square \end{array}$$




2.
$$\begin{array}{r} \square 8 \square 3 \\ + 482 \square \\ \hline \square 3 \square 12 \end{array}$$




3.
$$\begin{array}{r} 272 \square \\ + 4 \square \square 5 \\ \hline \square 894 \end{array}$$




4.
$$\begin{array}{r} \square 2 \square 92 \\ - 6041 \\ \hline \square 2 \square \square \end{array}$$




5.
$$\begin{array}{r} 83 \\ 76 \overline{) 6 \square 0 \square} \end{array}$$




6.
$$\begin{array}{r} 51 \\ 22 \overline{) 1 \square 2 \square} \end{array}$$




7.
$$\begin{array}{r} 13 \\ 69 \overline{) \square 9 \square} \end{array}$$




8.
$$\begin{array}{r} 7534 \\ + \square 401 \\ \hline \square 1 \square \square \square \end{array}$$




9.
$$\begin{array}{r} 2 \square \\ 87 \overline{) 2 \square 23} \end{array}$$




10.
$$\begin{array}{r} \square 385 \\ - 399 \square \\ \hline 4 \square \square 0 \end{array}$$




11.
$$\begin{array}{r} \square 59 \square \square \\ - 6 \square 71 \\ \hline \square 603 \end{array}$$




12.
$$\begin{array}{r} 18 \\ \times 89 \\ \hline 1 \square 0 \square \end{array}$$




13.
$$\begin{array}{r} 53 \\ 35 \overline{) 1 \square 5 \square} \end{array}$$




14.
$$\begin{array}{r} \square \square 1 \square \\ - 20 \square 2 \\ \hline 6403 \end{array}$$




15.
$$\begin{array}{r} 34 \\ \times 6 \square \\ \hline 2 \square 12 \end{array}$$




16.
$$\begin{array}{r} 7 \square \square \square \\ + \square 203 \\ \hline \square 5205 \end{array}$$




17.
$$\begin{array}{r} \square 45 \square 3 \\ - \square 974 \\ \hline 9 \square 8 \square \end{array}$$



18.
$$\begin{array}{r} 78 \square 0 \\ + 5 \square 1 \square \\ \hline \square \square 656 \end{array}$$



19.
$$\begin{array}{r} 41 \\ \times 9 \square \\ \hline 3 \square 13 \end{array}$$



20.
$$\begin{array}{r} 81 \\ \times 5 \square \\ \hline 4 \square 36 \end{array}$$

