


Chiffres Fondus Pour tous les goûts (H)

Nom: _____


Date: _____

Retrouve les chiffres qui ont fondu à la chaleur du soleil.


1.
$$\begin{array}{r} 72 \\ 58 \overline{) 4 \square 7 \square} \end{array}$$




2.
$$\begin{array}{r} 298\square \\ + \square 5\square 7 \\ \hline 8\square 44 \end{array}$$




3.
$$\begin{array}{r} \square\square\square 27 \\ - 81\square\square \\ \hline 2842 \end{array}$$




4.
$$\begin{array}{r} 78 \\ 37 \overline{) 2\square 8\square} \end{array}$$




5.
$$\begin{array}{r} 4\square \\ \times 84 \\ \hline 3\square 80 \end{array}$$




6.
$$\begin{array}{r} 24 \\ 8\square \overline{) 2\square 64} \end{array}$$




7.
$$\begin{array}{r} \square 4\square 4 \\ + 3289 \\ \hline 9\square 9\square \end{array}$$




8.
$$\begin{array}{r} 73 \\ \times 8\square \\ \hline 5\square 40 \end{array}$$




9.
$$\begin{array}{r} 99 \\ \times 9\square \\ \hline 8\square 10 \end{array}$$




10.
$$\begin{array}{r} 1\square 5\square \\ + \square 4\square 8 \\ \hline 5277 \end{array}$$




11.
$$\begin{array}{r} 95 \\ 7\square \overline{) 6\square 40} \end{array}$$




12.
$$\begin{array}{r} \square 7\square\square \\ - 5861 \\ \hline 3\square 00 \end{array}$$




13.
$$\begin{array}{r} \square 033\square \\ - 2330 \\ \hline \square\square\square 7 \end{array}$$




14.
$$\begin{array}{r} 4088 \\ + 24\square 1 \\ \hline \square\square 4\square \end{array}$$




15.
$$\begin{array}{r} \square\square\square\square 5 \\ - 9408 \\ \hline 567\square \end{array}$$




16.
$$\begin{array}{r} 52 \\ \times 72 \\ \hline 3\square 4\square \end{array}$$




17.
$$\begin{array}{r} \square 3\square 5\square \\ - 4108 \\ \hline \square 5\square 9 \end{array}$$




18.
$$\begin{array}{r} 6\square \\ 14 \overline{) \square 96} \end{array}$$



19.
$$\begin{array}{r} 6354 \\ + \square\square\square\square \\ \hline \square 3727 \end{array}$$



20.
$$\begin{array}{r} 24 \\ \times 4\square \\ \hline 1\square 52 \end{array}$$




Chiffres Fondus Pour tous les goûts (H) Réponses

Nom: _____


Date: _____

Retrouve les chiffres qui ont fondu à la chaleur du soleil.


1.
$$\begin{array}{r} 72 \\ 58 \overline{) 4176} \end{array}$$




2.
$$\begin{array}{r} 2987 \\ + 5557 \\ \hline 8544 \end{array}$$




3.
$$\begin{array}{r} 11027 \\ - 8185 \\ \hline 2842 \end{array}$$




4.
$$\begin{array}{r} 78 \\ 37 \overline{) 2886} \end{array}$$




5.
$$\begin{array}{r} 45 \\ \times 84 \\ \hline 3780 \end{array}$$




6.
$$\begin{array}{r} 24 \\ 86 \overline{) 2064} \end{array}$$




7.
$$\begin{array}{r} 6404 \\ + 3289 \\ \hline 9693 \end{array}$$




8.
$$\begin{array}{r} 73 \\ \times 80 \\ \hline 5840 \end{array}$$




9.
$$\begin{array}{r} 99 \\ \times 90 \\ \hline 8910 \end{array}$$




10.
$$\begin{array}{r} 1859 \\ + 3418 \\ \hline 5277 \end{array}$$




11.
$$\begin{array}{r} 95 \\ 72 \overline{) 6840} \end{array}$$




12.
$$\begin{array}{r} 9761 \\ - 5861 \\ \hline 3900 \end{array}$$




13.
$$\begin{array}{r} 10337 \\ - 2330 \\ \hline 8007 \end{array}$$




14.
$$\begin{array}{r} 4088 \\ + 2461 \\ \hline 6549 \end{array}$$




15.
$$\begin{array}{r} 15085 \\ - 9408 \\ \hline 5677 \end{array}$$




16.
$$\begin{array}{r} 52 \\ \times 72 \\ \hline 3744 \end{array}$$




17.
$$\begin{array}{r} 13657 \\ - 4108 \\ \hline 9549 \end{array}$$



18.
$$\begin{array}{r} 64 \\ 14 \overline{) 896} \end{array}$$



19.
$$\begin{array}{r} 6354 \\ + 7373 \\ \hline 13727 \end{array}$$



20.
$$\begin{array}{r} 24 \\ \times 48 \\ \hline 1152 \end{array}$$

