


Chiffres Fondus Pour tous les goûts (C)

Nom: _____


Date: _____

Retrouve les chiffres qui ont fondu à la chaleur du soleil.


1.
$$\begin{array}{r} \square\square 8 2 \\ + 7 7 \square\square \\ \hline \square\square 7 6 2 6 \end{array}$$




2.
$$\begin{array}{r} \square\square 4 \square\square \\ - 9 \square 0 6 \\ \hline 9 7 9 1 \end{array}$$




3.
$$\begin{array}{r} 8 7 0 \square \\ - 2 4 \square 7 \\ \hline \square\square 9 4 \end{array}$$




4.
$$\begin{array}{r} 2 7 \\ 7 8 \overline{) 2 \square 0 \square} \end{array}$$




5.
$$\begin{array}{r} 3 7 4 6 \\ - 1 6 \square\square \\ \hline \square\square 5 7 \end{array}$$




6.
$$\begin{array}{r} 2 \square \\ 5 7 \overline{) 1 \square 9 7} \end{array}$$




7.
$$\begin{array}{r} 5 3 \\ \times 9 4 \\ \hline 4 \square 8 \square \end{array}$$




8.
$$\begin{array}{r} 2 0 \\ \times 3 \square \\ \hline \square 2 0 \end{array}$$




9.
$$\begin{array}{r} \square 5 7 9 \\ + 4 5 2 8 \\ \hline 7 \square\square\square \end{array}$$




10.
$$\begin{array}{r} 7 \square\square 3 \\ - 1 6 4 9 \\ \hline \square 0 9 \square \end{array}$$




11.
$$\begin{array}{r} 1 4 \square 7 \\ + \square\square 5 \square \\ \hline 2 4 7 1 \end{array}$$




12.
$$\begin{array}{r} 7 \square \\ 9 8 \overline{) 7 \square 4 2} \end{array}$$




13.
$$\begin{array}{r} 7 2 \\ \times 2 7 \\ \hline 1 \square 4 \square \end{array}$$




14.
$$\begin{array}{r} 7 \square \\ \times 1 5 \\ \hline 1 \square 4 0 \end{array}$$




15.
$$\begin{array}{r} \square 7 2 8 \\ + 9 \square 5 \square \\ \hline \square 5 6 \square 2 \end{array}$$




16.
$$\begin{array}{r} 2 1 \\ 5 \square \overline{) 1 \square 5 5} \end{array}$$




17.
$$\begin{array}{r} 4 \square 4 0 \\ + \square 6 8 \square \\ \hline \square 3 5 \square 3 \end{array}$$




18.
$$\begin{array}{r} \square 4 5 2 \\ - 5 \square\square 0 \\ \hline 3 9 6 \square \end{array}$$



19.
$$\begin{array}{r} 8 \square \\ 4 3 \overline{) 3 \square 6 9} \end{array}$$



20.
$$\begin{array}{r} 6 0 \\ \times 2 \square \\ \hline 1 \square 8 0 \end{array}$$




Chiffres Fondus Pour tous les goûts (C) Réponses

Nom: _____


Date: _____

Retrouve les chiffres qui ont fondu à la chaleur du soleil.


1.
$$\begin{array}{r} 9882 \\ + 7744 \\ \hline 17626 \end{array}$$




2.
$$\begin{array}{r} 19497 \\ - 9706 \\ \hline 9791 \end{array}$$




3.
$$\begin{array}{r} 8701 \\ - 2407 \\ \hline 6294 \end{array}$$




4.
$$\begin{array}{r} 27 \\ 78 \overline{) 2106} \end{array}$$




5.
$$\begin{array}{r} 3746 \\ - 1689 \\ \hline 2057 \end{array}$$




6.
$$\begin{array}{r} 21 \\ 57 \overline{) 1197} \end{array}$$




7.
$$\begin{array}{r} 53 \\ \times 94 \\ \hline 4982 \end{array}$$




8.
$$\begin{array}{r} 20 \\ \times 36 \\ \hline 720 \end{array}$$




9.
$$\begin{array}{r} 2579 \\ + 4528 \\ \hline 7107 \end{array}$$




10.
$$\begin{array}{r} 7743 \\ - 1649 \\ \hline 6094 \end{array}$$




11.
$$\begin{array}{r} 1417 \\ + 1054 \\ \hline 2471 \end{array}$$




12.
$$\begin{array}{r} 79 \\ 98 \overline{) 7742} \end{array}$$




13.
$$\begin{array}{r} 72 \\ \times 27 \\ \hline 1944 \end{array}$$




14.
$$\begin{array}{r} 76 \\ \times 15 \\ \hline 1140 \end{array}$$




15.
$$\begin{array}{r} 5728 \\ + 9954 \\ \hline 15682 \end{array}$$




16.
$$\begin{array}{r} 21 \\ 55 \overline{) 1155} \end{array}$$




17.
$$\begin{array}{r} 4840 \\ + 8683 \\ \hline 13523 \end{array}$$



18.
$$\begin{array}{r} 9452 \\ - 5490 \\ \hline 3962 \end{array}$$



19.
$$\begin{array}{r} 83 \\ 43 \overline{) 3569} \end{array}$$



20.
$$\begin{array}{r} 60 \\ \times 23 \\ \hline 1380 \end{array}$$

