


Chiffres Fondus Multiplication (G)

Nom: _____


Date: _____

Retrouve les chiffres qui ont fondu à la chaleur du soleil.


1.
$$\begin{array}{r} 1 \square \\ \times 7 \\ \hline 84 \end{array}$$




2.
$$\begin{array}{r} 6 \\ \times 8 \\ \hline 4 \square \end{array}$$




3.
$$\begin{array}{r} 10 \\ \times \square \\ \hline 30 \end{array}$$




4.
$$\begin{array}{r} \square \\ \times 10 \\ \hline 90 \end{array}$$




5.
$$\begin{array}{r} 4 \\ \times 4 \\ \hline 1 \square \end{array}$$




6.
$$\begin{array}{r} \square \\ \times 11 \\ \hline 77 \end{array}$$




7.
$$\begin{array}{r} 7 \\ \times 12 \\ \hline 8 \square \end{array}$$




8.
$$\begin{array}{r} 9 \\ \times \square \\ \hline 72 \end{array}$$




9.
$$\begin{array}{r} 6 \\ \times 1 \square \\ \hline 66 \end{array}$$




10.
$$\begin{array}{r} 5 \\ \times \square \\ \hline 15 \end{array}$$




11.
$$\begin{array}{r} 9 \\ \times 8 \\ \hline 7 \square \end{array}$$




12.
$$\begin{array}{r} 1 \square \\ \times 3 \\ \hline 33 \end{array}$$




13.
$$\begin{array}{r} 5 \\ \times 6 \\ \hline 3 \square \end{array}$$




14.
$$\begin{array}{r} 12 \\ \times 1 \square \\ \hline \square 44 \end{array}$$




15.
$$\begin{array}{r} 8 \\ \times \square \\ \hline 64 \end{array}$$




16.
$$\begin{array}{r} 4 \\ \times \square \\ \hline 32 \end{array}$$




17.
$$\begin{array}{r} 7 \\ \times \square \\ \hline 21 \end{array}$$




18.
$$\begin{array}{r} 12 \\ \times 9 \\ \hline \square 0 \square \end{array}$$



19.
$$\begin{array}{r} 7 \\ \times \square \\ \hline 42 \end{array}$$



20.
$$\begin{array}{r} 8 \\ \times \square \\ \hline 16 \end{array}$$




Chiffres Fondus Multiplication (G) Réponses

Nom: _____


Date: _____

Retrouve les chiffres qui ont fondu à la chaleur du soleil.


1.
$$\begin{array}{r} 1 \boxed{2} \\ \times 7 \\ \hline 84 \end{array}$$




2.
$$\begin{array}{r} 6 \\ \times 8 \\ \hline 4 \boxed{8} \end{array}$$




3.
$$\begin{array}{r} 10 \\ \times \boxed{3} \\ \hline 30 \end{array}$$




4.
$$\begin{array}{r} \boxed{9} \\ \times 10 \\ \hline 90 \end{array}$$




5.
$$\begin{array}{r} 4 \\ \times 4 \\ \hline 1 \boxed{6} \end{array}$$




6.
$$\begin{array}{r} \boxed{7} \\ \times 11 \\ \hline 77 \end{array}$$




7.
$$\begin{array}{r} 7 \\ \times 12 \\ \hline 8 \boxed{4} \end{array}$$




8.
$$\begin{array}{r} 9 \\ \times \boxed{8} \\ \hline 72 \end{array}$$




9.
$$\begin{array}{r} 6 \\ \times 1 \boxed{1} \\ \hline 66 \end{array}$$




10.
$$\begin{array}{r} 5 \\ \times \boxed{3} \\ \hline 15 \end{array}$$




11.
$$\begin{array}{r} 9 \\ \times 8 \\ \hline 7 \boxed{2} \end{array}$$




12.
$$\begin{array}{r} 1 \boxed{1} \\ \times 3 \\ \hline 33 \end{array}$$




13.
$$\begin{array}{r} 5 \\ \times 6 \\ \hline 3 \boxed{0} \end{array}$$




14.
$$\begin{array}{r} 12 \\ \times 1 \boxed{2} \\ \hline \boxed{1}44 \end{array}$$




15.
$$\begin{array}{r} 8 \\ \times \boxed{8} \\ \hline 64 \end{array}$$




16.
$$\begin{array}{r} 4 \\ \times \boxed{8} \\ \hline 32 \end{array}$$




17.
$$\begin{array}{r} 7 \\ \times \boxed{3} \\ \hline 21 \end{array}$$



18.
$$\begin{array}{r} 12 \\ \times 9 \\ \hline \boxed{1}0 \boxed{8} \end{array}$$



19.
$$\begin{array}{r} 7 \\ \times \boxed{6} \\ \hline 42 \end{array}$$



20.
$$\begin{array}{r} 8 \\ \times \boxed{2} \\ \hline 16 \end{array}$$

